

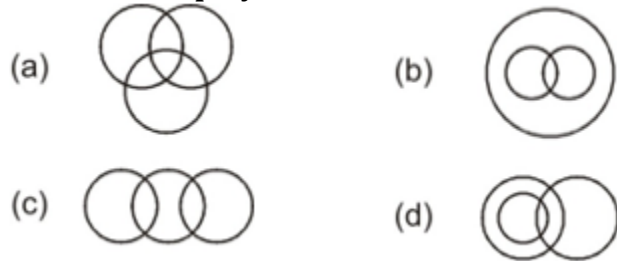
Reasoning Mega Quiz for RRB NTPC

Q1. A series is given, with one term missing. Choose the correct alternative from the given ones that will complete the series.

WFB, TGD, QHG, ?

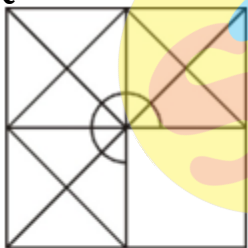
- (a) NIL
- (b) NIK
- (c) NLK
- (d) NJL

Q2. Identify the diagram that best represents the relationship among classes given below Tennis fans, Cricket players, Students



- (a) a
- (b) b
- (c) c
- (d) d

Q3. Which answer figure will complete the pattern in the question figure?



- (a) a
- (b) b
- (c) c
- (d) d

TEST SERIES
Bilingual



CRACKER SERIES
NTPC CBT-I
10 Full-Length Mocks

Validity : 12 Months

Q4. Arrange the following words as per order in the dictionary

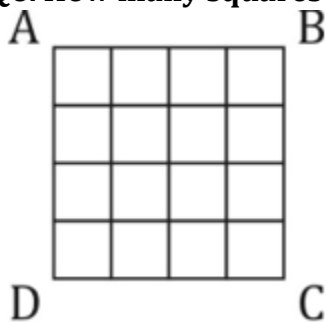
1. Dyke 2. Dwindle 3. Dwell 4. Dye

- (a) 3,2,4,1
- (b) 1,3,4,2
- (c) 2,1,3,4
- (d) 3,4,2,1

Q5. In the following problem, '=' stands for '÷', '+' stands for '-', 'x' stands for '=', '-' stands for '+' and '÷' stands for 'x'. Find the correct equation.

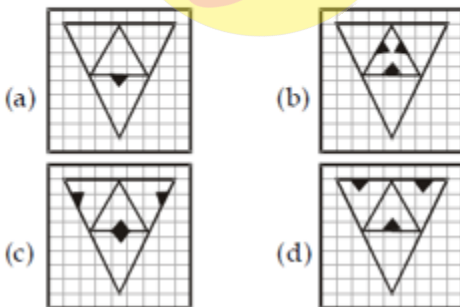
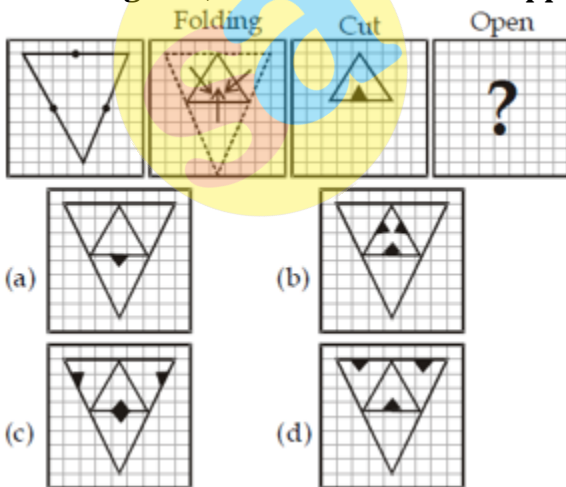
- (a) $8 \div 4 + 15 = 6 \times 4$
- (b) $4 \times 6 \div 4 + 4 = 7$
- (c) $5 \div 3 - 25 + 20 = 20 \times 39$
- (d) $96 \div 2 \times 6 \div 105 + 1$

Q6. How many squares are there in the square figure ABCD?



- (a) 16
- (b) 17
- (c) 26
- (d) 30

Q7. A piece of paper is folded and cut as shown below in the question figures. From the given answer figures, indicate how it will appear when opened.



- (a) a
- (b) b
- (c) c
- (d) d

Q8. X is the husband of Y. W is the daughter of X. Z is the husband of W. N is the daughter of Z. What is the relationship of N to Y?

- (a) Cousin
- (b) Niece
- (c) Daughter
- (d) Grand daughter

Q9. Find missing pair of letters from given responses to replace?

AZ	BY	CX
DW	EV	FU
GT	?	IR

- (a) HR
- (b) HS
- (c) HV
- (d) HU

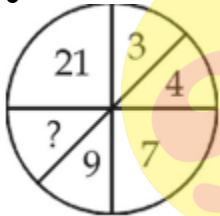
Q10. X walked 20 feet from A to B in the East direction. Then X turned to the right and walked 6 feet. Again, X turned to the right and walked 28 feet. How far is X from A?

- (a) 28
- (b) 9
- (c) 10
- (d) 27

Q11. If $1 \times 3 \times 5 = 1925$ and $7 \times 9 \times 11 = 4981121$, then find the value of $19 \times 21 \times 23 = ?$

- (a) 361529441
- (b) 361441289
- (c) 441361289
- (d) 361441529

Q12. Find the missing number



- (a) 15
- (b) 12
- (c) 11
- (d) 16

Q13. P, Q, R and S are playing a game of carrom. P, R and S, Q are partners. 'S' is to the right of 'R'. If 'R' is facing West, then 'Q' is facing which direction?

- (a) North
- (b) South
- (c) East
- (d) West

TEST SERIES
Bilingual



RRB NTPC
CBT 1 + CBT 2

100+ TOTAL TESTS

Q14. Find the odd word/letters/number from the given alternatives.

(A) Bud (B) Branch (C) Leaf (D) Plant

- (a) A
- (b) B
- (c) C
- (d) D

Q15. Find the odd word/letters/number from the given alternatives.

(A) ABD (B) FGI (C) LMO (D) STU

- (a) A
- (b) B
- (c) C
- (d) D

Q16. M is son of P, Q is the grand-daughter of O, who is the husband of P. How is M related to O?

- (a) Son
- (b) Daughter
- (c) Mother
- (d) Father

Q17. Ramesh is richer than Satish but Jaya is less rich than Ramesh. Ram is less rich than Jaya but richer than Satish, but is not as rich as Ramesh. Ramesh is less rich than Navin. The richest amongst them is?

- (a) Ramesh
- (b) Satish
- (c) Navin
- (d) Jaya

Q18. Find the missing number from the given alternatives:

8	7	6
7	6	5
6	5	4
90	65	?

- (a) 54
- (b) 44
- (c) 34
- (d) 26

Q19. Sham goes to his friend's house that is straight 10 Km from his house. After that, he takes a right turn and walks 2 Km and again takes a right turn and walks for 10 Km. How much distance is Sham still away from his house?

- (a) 10 Km
- (b) 8 Km
- (c) 12 Km
- (d) 2 Km

12 Months Subscription

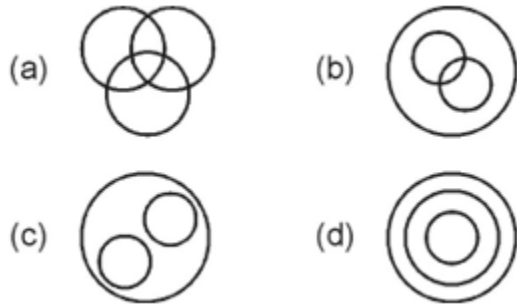
SSC CHSL

KA MAHA PACK

Live Class, Video Course,
Test Series, eBooks

Bilingual (with eBooks)

Q20. Which of the following diagrams represent the relationship between Awards, Pulitzer Prize and Oscars?



- (a) a
- (b) b
- (c) c
- (d) d

Directions (21-22): Select the related word/letters/number from the given alternatives.

Q21. Foot : Man :: Hoof : ?

- (a) Leg
- (b) Dog
- (c) Horse
- (d) Shoe

Q22. ACEG : ZXVT :: IKMO : ?

- (a) MNOP
- (b) PQRS
- (c) RPNL
- (d) LNPR

Q23. For the following questions. Find the odd word/letters/number pair from the given alternatives

- (a) MARCH
- (b) MAY
- (c) JUNE
- (d) DECEMBER

Q24. For the following questions. Find the odd word/letters/number pair from the given alternatives

- (a) 1 : 8
- (b) 27 : 64
- (c) 125 : 218
- (d) 343 : 512

Q25. A series is given, with one term missing. Choose the correct alternative from the given ones that will complete the series.

8, 15, 28, 53, ?

- (a) 106
- (b) 100
- (c) 108
- (d) 102



sscadda.com