

Reasoning Sunday Mega Quiz for RRB NTPC

Q1. 7th of April 2014 is a Monday. What day would be 14 August 2014?

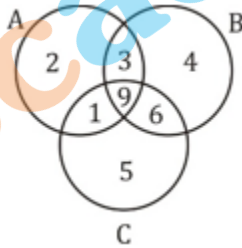
- (a) Wednesday
- (b) Friday
- (c) Thursday
- (d) Monday

Q2. In the following question select the related word from the given alternative?

GATES : JDWHV :: LINUX :

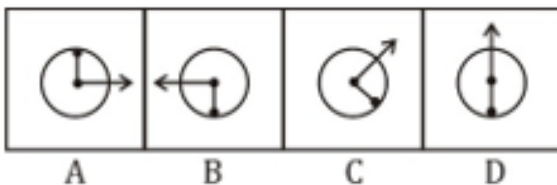
- (a) OLQXA
- (b) OLQVZ
- (c) NKQXA
- (d) NKQVZ

Q3. The given Venn diagram represents the sports preference of a group of school students. There are three games : A-Hockey, B-Cricket, C- Squash. How many student play at least one game?



- (a) 15
- (b) 21
- (c) 30
- (d) 25

Q4. Choose the figure which is different from the others in the given set.



- (a) A
- (b) B
- (c) C
- (d) D

6 Months Subscription

RRB NTPC
KA MAHA PACK

Test Series, Live Classes,
Video Course, eBooks

Bilingual

Q5. Which of the following correctly represents the relationship between.

1. Eyes
2. Forehead
3. Face

(a)



(b)



(c)



(d)



Q6. Out of the four given figures, three are similar in a certain manner. However, one figure is NOT like the other three.

R	U	M	K
20	23	15	12
A	B	C	D

- (a) A
- (b) B
- (c) C
- (d) D



Q7. Direction : There are statement(s) which are followed by conclusion(s). Choose the conclusion which logically follow from the given statements

Statement: Domestic demand has been increasing faster than the production of indigenous crude oil.

Conclusion:

- I. Crude oil must be imported
- II. Domestic demand should be reduced

- (a) If only conclusion I follows;
- (b) If only conclusion II follows;
- (c) If either I or II follows;
- (d) If neither I nor II follows; and

Q8. In a certain language, 'MEI TOH CHALA' is coded as 'mo to yo', 'CHALA YE BHI' is coded as 'ao mo xo', 'MEI PAR TOH' is coded as 'ho yo to', What is the code for 'YE MEI BHI' in that language?

- (a) ao to xo
- (b) ho to yo
- (c) ao xo yo
- (d) 'ao xo yo' OR 'ao to xo'

Q9. How many triangles are there in the following figure?



- (a) 16
- (b) 18
- (c) 22
- (d) more than 23

Q10. Choose figure that is different from the rest.



- (a) b
- (b) c
- (c) e
- (d) a

Q11. How is Ravi related to the daughter of only daughter-in-law of wife of Ravi's father.

- (a) Husband
- (b) Son
- (c) Father
- (d) Grand Father

Q12. Direction : There are statement(s) which are followed by conclusion(s). Choose the conclusion which logically follow from the given statements

Statement: All the organised persons find time for rest. Sunita, inspite of her very busy schedule, finds time for rest.

Conclusion:

- I. Sunita is an organised person
- II. Sunita is an Industrious person

- (a) If only conclusion I follows;
- (b) If only conclusion II follows;
- (c) If neither I nor II follows; and
- (d) If both I and II follow

NEW

Live Class

CRASH COURSE

SELECTION BATCH

RRB NTPC 2.0

Starts February 12, 2020

8 PM to 11 PM | Bilingual

Q13. Which of the following does NOT belong to this group?

- (a) Notebook
- (b) Pen
- (c) Scale
- (d) Principal

Q14. P, Q, R, S are playing carrom sitting in clockwise direction. If R is facing North. What direction is Q facing.

- (a) East
- (b) West
- (c) North
- (d) South

Q15. Choose the best suitable venn diagram for the following words:

Rabbit, Tomato, Animals

(a)



(b)



(c)



(d)



Q16. How many times between 3'0 clock and 4'0 clock the hands of the clock are exactly opposite to each other?

- (a) 1
- (b) 2
- (c) 3
- (d) 4

Q17. Select the option figure that will complete the series of question figure.

4	5	7	4	6	7	?
7	6	6	5	5	4	

(a)

5	4
7	6

(b)

4	5
7	6

(c)

5	6
4	7

(d)

4	7
5	6

Q18. Direction: There are statement(s) which are followed by conclusion(s). Choose the conclusion which logically follows from the given statements

Statement: This book 'Z' is the only book which focuses its attention to the problem of poverty in India between 1950 to 1980.

Conclusion:

- I. There was no question of poverty before 1950.
- II. No other book deals with poverty in India during 1950 to 1980.

- (a) If only conclusion I follows;
- (b) If only conclusion II follows;
- (c) If neither I nor II follows; and
- (d) If both I and II follow

Q19. Final the odd one out :

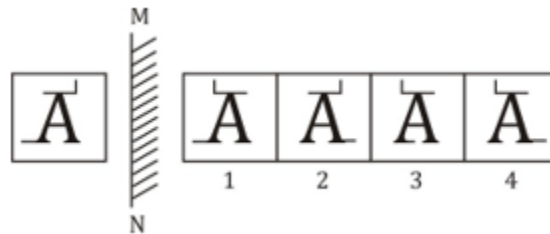
- (a) Sports – Coach
- (b) Film – Director
- (c) Book – Editor
- (d) Writing – Rider

Q20. What comes next in the given series.

18Y, 23V, 28S, ?

- (a) 34Q
- (b) 32T
- (c) 33P
- (d) 33Q

Q21. Choose the mirror image for the following figure.



- (a) 1
- (b) 2
- (c) 3
- (d) 4

Q22. Read the given statements and conclusions carefully and select which of the conclusions logically follow(s) statements :

All mouse are Rat

Some Rat are tiger.

Conclusion :

I. Some tiger are rat

II. No mouse is tiger

- (a) Only I follows
- (b) Both I and II follow
- (c) Neither I nor II follows
- (d) Only II follows

Q23. If IRELAND is written as 9185121144, how can EGYPT be written?

- (a) 58241719
- (b) 57251620
- (c) 52241721
- (d) 57261721

Q24. 9 * 5 A # 2 \$ @ 4 3 B & D 7

If the first half of the above series is reversed then using the new series find the number of numbers that comes right of '2'.

- (a) 5
- (b) 3
- (c) 6
- (d) 4

Q25. Direction : There are statement(s) which are followed by conclusion(s). Choose the conclusion which logically follow from the given statements

Statement: The secret of success is constancy of purpose.

Conclusion:

- I. Constant dripping wears the stone.
 - II. Single- minded devotion is necessary for achieving success.
- (a) If only conclusion I follows;
 - (b) If only conclusion II follows;
 - (c) If neither I nor II follows; and
 - (d) If both I and II follow

TEST SERIES

Bilingual



RRB NTPC
CBT 1 + CBT 2

100+ TOTAL TESTS



SSCadda.com