

Reasoning Mega Quiz for SSC CHSL

Q1. In the following question, select the related word from the given alternatives.

Car : Road :: Rail : ?

- (a) Water
- (b) Air
- (c) Road
- (d) Track

Q2. In the following question, select the related letters from the given alternatives.

UVWX : YYYY :: ABCD : ?

- (a) YYYY
- (b) EEEE
- (c) DDDD
- (d) FFFF

Q3. In the following question, select the related number from the given alternatives.

102 : 10404 :: 104 : ?

- (a) 10202
- (b) 10404
- (c) 10804
- (d) 10816

Q4. In the following question, select the odd letters from the given alternatives.

- (a) ADG
- (b) CFI
- (c) JMQ
- (d) SVY

Q5. How many triangles are there in the given figure?



- (a) 6
- (b) 7
- (c) 8
- (d) 10

12 Months Subscription

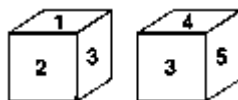
SSC

MAHA PACK

Live Class, Video Course,
Test Series, eBooks

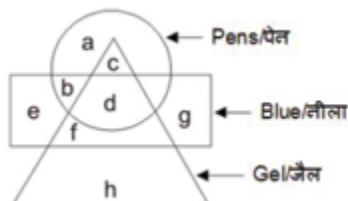
Bilingual (with eBooks)

Q6. Two position of a cube are shown below. What will come opposite to face containing '1'?



- (a) 4 or 5
- (b) 5
- (c) 4
- (d) 3

Q7. In the given figure, which alphabet represents gel pens which are not blue?



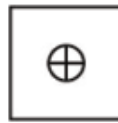
- (a) c
- (b) d
- (c) h
- (d) b

Q8. Which answer figure will complete the pattern in the question figure?



- (a)
- (b)
- (c)
- (d)

Q9. From the given answer figures, select the one in which the question figure is hidden/embedded.



(a)



(b)



(c)



(d)



Q10. A piece of paper is folded and punched as shown below in the question figures. From the given answer figures, indicate how it will appear when opened?



(a)



(b)



(c)



(d)



TEST SERIES
Bilingual

SSC CGL TIER-II

PRIME

59 Total Tests | eBooks

Q11. If HEALTH is written as GSKZDG, then how will NORTH be written in that code?

- (a) OPSUI
- (b) GSQNM
- (c) FRPML
- (d) IUSPO

Q12. In a certain code BEAN is written as ABNE and SALE is written as LSEA. How is NEWS written in that code?

- (a) SNEW
- (b) SNWE
- (c) WNES
- (d) WNSE

Q13. In a certain code GOAL is written as AGLO and BEAR is written as ABRE. How is SEND written in that code?

- (a) SNED
- (b) NDES
- (c) DENS
- (d) NSDE

Q14. In a certain code, FAVOUR is written as EBUPTS. How is DANGER written in that code?

- (a) CBFFDS
- (b) CBMHDS
- (c) EBFHDS
- (d) EBHHFS



Q15. If ROAST is coded as PQYUR in a certain language, then how will SLOPPY be coded in that language?

- (a) MRNAQN
- (b) NRMNQA
- (c) QNMRNA
- (d) RANNMQ

Q16. If in a code, MIND become KGLB and ARGUE becomes YPESC, then what will DIAGRAM be in that code?

- (a) BGYEPYK
- (b) BGYPYEK
- (c) GLPEYKB
- (d) LKBGYPK

Q17. In a certain code TEACHER is written is as VGCEJGT. How is CHILDREN written in that code?

- (a) EJKNEGTP
- (b) EGKNFITP
- (c) EJKNFGTO
- (d) EJKNFTGP

Q18. In a certain code language RUSTICATE is written as QTTUIDBSD, how would STATISTIC be written in that code?

- (a) RSBUJTUHB
- (b) RSBUITUHB
- (c) RSBUIRSJD
- (d) TUBUITUMB

Q19. If BE QUICK is coded as ZC OSGAI, then the code of the last letter of the third word in the sentence I LOVE MY COUNTRY is

- (a) A
- (b) T
- (c) U
- (d) W

Q20. In a certain code PHYSICAL is written as MQBIDZJT. How is BREAKING written in that code?

- (a) HCOJFLB
- (b) HCOSJFLB
- (c) HCOJLKB
- (d) HCOTJFLB

Directions (21-22): In the following question, select the related word/numbers/letters from the given alternatives.

Q21. PRAG : QTDK :: STOP : ?

- (a) LMNP
- (b) BDFE
- (c) TVRT
- (d) QSTG

Q22. 562 : 31 :: 663 : ?

- (a) 44
- (b) 49
- (c) 55
- (d) 58

Q23. In the following question, select the odd word from the given alternatives.

- (a) BHEL
- (b) SAIL
- (c) IOCL
- (d) RELIANCE



Q24. In the following question, select the odd word from the given alternatives.

- (a) 12 – 28
- (b) 20 – 36
- (c) 42 – 58
- (d) 72 – 90

Q25. A series is given, with one word missing. Choose the correct alternative from the given ones that will complete the series.

Laugh, Alter, Melts, Realm, Muesli, ?

- (a) Missile
- (b) Shall
- (c) Alien
- (d) Rifle

Q26. A series is given, with one term missing. Choose the correct alternative from the given ones that will complete the series.

E, H, L, O, S, ?

- (a) U
- (b) W
- (c) V
- (d) X

Q27. If 21 (49) 14 and 159 (169) 146, then what is the value of 'A' in 56 (A) 44?

- (a) 144
- (b) 121
- (c) 225
- (d) 256



Directions (28-28): In the following question, select the word which cannot be formed using the letters of the given word.

Q28. Instructor

- (a) Rust
- (b) Tort
- (c) Stop
- (d) Stint

Q29. In the following question, select the number which can be placed at the sign of question mark (?) from the given alternatives.

1	7	2
8	6	4
9	2	5
4	7	?

- (a) 9
- (b) 10
- (c) 11
- (d) 12

Q30. A Baleno car travels 17 km South, then turns East and travels 11 km, then turns North and travels 9 km, then turns to its left and travels 11 km. Where is the car now with reference to its starting position?

- (a) 8 km North
- (b) 8 km South
- (c) 26 km South
- (d) 26 km North

**Complete Preparation for
SSC Exams**

**SSC
EXTREME**

**Video Courses, Test Series,
eBooks**

