

Reasoning Mega Quiz for SSC CHSL

Q1. Find out the odd word/letters/number/number pair from the given alternatives.

- (a) QJ
- (b) SH
- (c) LN
- (d) UF

Q2. Find out the odd word/letters/number/number pair from the given alternatives.

- (a) 529
- (b) 549
- (c) 731
- (d) 523

Q3. A series is given with one term missing. Choose the correct alternative from the given ones that will complete the series.

VWX, BCD, HIJ, ?

- (a) MOQ
- (b) NOP
- (c) GHI
- (d) TUV

Q4. A series is given with one term missing. Choose the correct alternative from the given ones that will complete the series.

MN, PQ, TU, YZ, ?

- (a) YZ
- (b) AB
- (c) EF
- (d) EJ

Q5. A series is given with one term missing. Choose the correct alternative from the given ones that will complete the series.

10, 29, 66, 127, ?

- (a) 330
- (b) 115
- (c) 218
- (d) 273

Complete Preparation for
SSC Exams

SSC
EXTREME

Video Courses, Test Series,
eBooks

Q6. The average temperature of a town in the first six days of a month was 41°C and the sum of the temperatures of the first five days of the same month was 201°C. What was the temperature on the sixth day of the month?

- (a) 40°C
- (b) 45°C
- (c) 46°C
- (d) 50°C

Q7. In the following question, select the missing number from the given series.

15	30	20
6	8	5
84	152	?

- (a) 400
- (b) 150
- (c) 100
- (d) 625

Q8. Sonal is standing to the north of Amar and to the west of Mahi. In which direction is Mahi standing with respect to Amar?

- (a) South-West
- (b) North-West
- (c) North-East
- (d) South-East

Q9. A word is represented by only one set of numbers as given in any one of the alternatives. The sets of numbers given in the alternatives are represented by two classes of alphabets as shown in the given two matrices. The columns and rows of Matrix-I are numbered from 0 to 4 and that of Matrix-II are numbered from 5 to 9. A letter from these matrices can be represented first by its row and next by its column, for example, 'E' can be represented by 68, 99 etc. and 'N' can be represented by 20, 31 etc. Similarly, you have to identify the set for the word 'LION'.

MATRIX - I

	0	1	2	3	4
0	G	T	G	D	O
1	I	G	L	F	I
2	N	V	Y	G	F
3	R	N	V	S	E
4	O	L	F	B	L

MATRIX - II

	5	6	7	8	9
5	F	N	L	R	I
6	O	I	F	E	O
7	N	R	S	L	F
8	R	L	W	O	Y
9	I	V	E	H	E

- (a) 41, 10, 69, 76
- (b) 86, 69, 04, 41
- (c) 44, 59, 88, 20
- (d) 57, 66, 31, 04

Q10. A boy and a girl are playing in a park. The only daughter of the maternal grandfather of the girl, is the sister of the boy's father. How is the boy related to the girl?

- (a) Father
- (b) Grandfather
- (c) Son
- (d) Cousin

Q11. If '-' stands for division, '+' for multiplication, '÷' for subtraction and 'x' for addition, which one of the following equations is correct?

- (a) $18 \div 3 \times 2 + 8 - 6 = 10$
- (b) $18 - 3 + 2 \times 8 \div 6 = 14$
- (c) $18 - 3 \div 2 \times 8 + 6 = 17$
- (d) $18 \times 3 + 2 \div 8 - 6 = 15$

Q12. X walked 20 feet from A to B in the East direction. Then X turned to the right and walked 6 feet. Again X turned to the right and walked 28 feet. How far is X from A?

- (a) 28
- (b) 9
- (c) 10
- (d) 27

Q13. If FRIEND is coded as HTKGPF then REVEAL will be coded as:

- (a) TGXFCN
- (b) TGXNGC
- (c) TXGNCG
- (d) TGXGCN

Q14. Select the related word/letters/number from the given alternatives.

Flow : River :: Stagnant : ?

- (a) Pond
- (b) Rain
- (c) Stream
- (d) Canal

Q15. Which of the following interchange of signs would make the equation correct?

$$5 + 3 \times 8 - 12 \div 4 = 3$$

- (a) -And ÷
- (b) + And ×
- (c) + And ÷
- (d) + And -

TEST SERIES
Bilingual



SSC CGL TIER-II

PRIME

59 Total Tests | eBooks

Q16. In a mirror is placed on the line MN, then which of the answer figures is the right image of the given figure ?



(a)



(b)



(c)

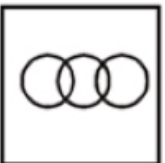


(d)

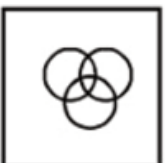


Q17. Identify the diagram that best represents the relationship among the given classes.
Singer, Musician, Businessman

(a)



(b)



(c)



(d)



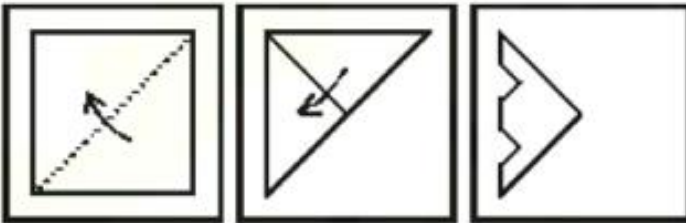
6 Months Subscription

SSC CGL TIER-II MAHA PACK

Test Series, Live Classes,
Video Course, Ebooks

Bilingual (With e-Books)

Q18. A piece of paper is folded and punched as shown below in the question figures. From the given answer figures, indicate how it will appear when opened.



(a)



(b)



(c)



(d)



SSCadda.com

Q19. Arrange the following words as per the order in the dictionary:

1. RESIGN
2. REPAIR
3. RESIDUE
4. RESEARCH
5. RESCUE

- (a) 4 5 3 1 2
(b) 2 5 4 3 1
(c) 2 5 4 1 3
(d) 5 4 3 1 2

Q20. X and Y are brothers. R is the father of Y. T is the sister of S who is maternal uncle of X. How is T related to R?

- (a) Mother
(b) Wife
(c) Sister
(d) Brother

Directions (21-30): In the following questions, select the number which can be placed at the sign of question mark (?) from the given alternatives.

Q21.

7	3	2
6	11	5
5	1	8
72	?	50

- (a) 38
(b) 40
(c) 42
(d) 44

Q22.

1	7	2
8	6	4
9	2	5
4	7	?

- (a) 9
(b) 10
(c) 11
(d) 12

TEST SERIES
Bilingual



SSC CGL 2019-20
PRIME
400+ TOTAL TESTS
Validity : 12 Months

Q23.

8	24
216	72

12	36
324	108

14	42
?	126

- (a) 178
- (b) 252
- (c) 378
- (d) 630

Q24.

	3	
6	15	1
	4	

	4	
7	19	5
	2	

	2	
3	?	1
	9	

- (a) 16
- (b) 17
- (c) 18
- (d) 19

Q25.

7	8	2
2	3	3
4	1	7
5	6	?

- (a) 1
- (b) 2
- (c) 4
- (d) 6

Q26.

11	2	4	98
3	6	5	100
8	9	1	?

- (a) 72
- (b) 75
- (c) 88
- (d) 82

Q27.

3	4	2
1	6	5
4	2	3
20	14	?

- (a) 11
- (b) 12
- (c) 14
- (d) 16

SSCadda.com

Q28.

3	11	5	45
2	4	6	44
3	7	8	?

- (a) 72
- (b) 76
- (c) 80
- (d) 84

Q29.

1	4
10	7

5	8
14	11

6	9
?	12

- (a) 13
- (b) 14
- (c) 15
- (d) 16

Q30.

	7	
4	16	3
	2	

	7	
5	19	6
	1	

	3	
8	?	7
	4	

- (a) 20
- (b) 21
- (c) 22
- (d) 24

 BILINGUAL



**ENGLISH
BY
NEETU SINGH**

12th May

Tue, Thr, Sat | **5 pm - 7 pm**



SSCadda.com