

Reasoning Mega Quiz for SSC CHSL

Q1. Select the related word/letters/number from the given alternatives.

Eccrinology : Secretions :: Cardiology : ?

- (a) Insects
- (b) Soil
- (c) Algae
- (d) Heart

Q2. Select the related word/letters/number from the given alternatives.

CFI: XUR :: GJM : ?

- (a) TRO
- (b) TQN
- (c) WQT
- (d) QWT

Q3. Select the related word/letters/number from the given alternatives.

BFJ: KOS :: KOS : ?

- (a) TXC
- (b) SXB
- (c) TXB
- (d) SXC

Q4. Select the related word/letters/number from the given alternatives.

24 : 36 :: 52 : ?

- (a) 19
- (b) 70
- (c) 49
- (d) 78

Q5. Select the odd word/letters/number/number pair from the given alternatives.

- (a) Body
- (b) Nose
- (c) Eyes
- (d) Lips

6 Months Subscription

SSC CGL
TIER-II MAHA PACK

Test Series, Live Classes,
Video Course, Ebooks

Bilingual (With e-Books)

Q6. Select the odd word/letters/number/number pair from the given alternatives.

- (a) BYCX
- (b) DWEV
- (c) GUHS
- (d) IRJQ

Q7. Select the odd word/letters/number/number pair from the given alternatives.

- (a) 13
- (b) 17
- (c) 19
- (d) 21

Q8. Select the odd word/letters/number/number pair from the given alternatives.

- (a) 25673
- (b) 34664
- (c) 42763
- (d) 25556

Q9. A series is given with one term missing. Choose the correct alternative from the given ones that will complete the series.

DJO, EKP, FLQ, GMR, ?

- (a) HOS
- (b) HNS
- (c) INS
- (d) DEF

Q10. A series is given with one term missing. Choose the correct alternative from the given ones that will complete the series.

DEF, ?, OPQ, VWX

- (a) HIJ
- (b) GHI
- (c) IJK
- (d) IPV

Q11. Which of the following interchanges in signs will make the given equation correct?

$$17 - 15 \times 5 = 250$$

- (a) = and \times
- (b) + and -
- (c) = and -
- (d) \times and -

Q12. In the following question, which one set of letters when sequentially placed at the gaps in the given letter series shall complete it?

_k_m_kl_jk_m

- (a) jljl
- (b) jljml
- (c) jllmj
- (d) jllmm

Q13. Rahul leaves his home and walks 5 km towards east, turns in the south-east direction and walks for 10km, then he turns north-east and moves 10 km. Again, he moves towards the north for 10km. In which direction is he now from starting point?

- (a) West
- (b) East
- (c) North-east
- (d) North-west

Q14. A word is represented by only one set of numbers as given in any one of the alternatives. The sets of numbers given in the alternatives are represented by two classes of alphabets as shown in the given two matrices. The columns and rows of Matrix-I are numbered from 0 to 4 and that of Matrix-II are numbered from 5 to 9. A letter from these matrices can be represented first by its row and next by its column, for example, 'J' can be represented by 20, 58 etc. and 'A' can be represented by 12, 69 etc. Similarly, you have to identify the set for the word 'ANIMAL'.

Matrix - I

	0	1	2	3	4
0	Y	L	U	A	C
1	K	S	A	O	L
2	J	L	N	L	T
3	V	C	E	F	U
4	D	K	D	U	A

Matrix - II

	5	6	7	8	9
5	Q	M	O	Y	S
6	F	O	D	L	A
7	N	H	I	O	R
8	J	N	G	Q	O
9	O	R	T	H	I

- (a) 69,22,99,56,23,03
- (b) 69,22,99,56,03,23
- (c) 69,22,98,56,03,23
- (d) 69,22,99,65,03,23

Q15. Introducing a boy a Ankit said," He is the son of daughter of my grandfather's son". How is that boy related to Ankit?

- (a) Cousin
- (b) Brother
- (c) Father-in-law
- (d) Nephew

TEST SERIES

Bilingual

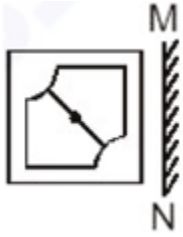


SSC CGL TIER-II

PRIME

59 Total Tests | eBooks

Q16. If a mirror is placed on the line MN, then which of the answer figures is the right image of the given figure?



(a)



(b)



(c)



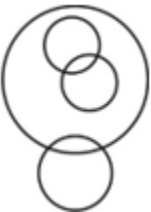
(d)



Q17. Identify the diagram that best represents the relationship among the given classes.

Sweets, Sugar, Salt, Jaggery

(a)



(b)



(c)



(d)



Complete Preparation for
SSC Exams

SSC
EXTREME

Video Courses, Test Series,
eBooks

Q18. A piece of paper is folded is folded and punched as shown in the below question figures. From the given answer figures, indicate how it will appear when opened.



(a)



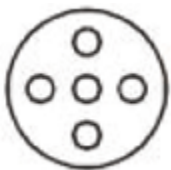
(b)



(c)



(d)



Q19. Select the related word/letters/number from the given alternatives.

Cup : Coffee:: Bowl : ?

- (a) Dish
- (b) Spoon
- (c) Soup
- (d) Food

Q20. Select the related word/letters/number from the given alternatives.

ZYX : ABC:: VUT : ?

- (a) EFG
- (b) FGH
- (c) DEF
- (d) CDE

Q21. In this question, two statements are given each followed by two conclusions I and II. You have to consider the statements to be true even if they seem to be at variance from commonly known facts. You have to decide which of the given conclusions, if any, follows from the given statements.

Statement:

I. We are going back again to our ancestors and finding out the importance of Yoga and Pranayam.

II. People in west have already opted it. It does not require any external equipment but only body and soul.

Conclusions:

I. Ancient science is treasure of many cures and natural remedies of various diseases.

II. Technology has overshadowed these ancient sources and introduced new concepts of fitness called gym.

- (a) Only conclusion II follows
- (b) Conclusion I and II both follow
- (c) Neither I nor II follow
- (d) Only conclusion I follows

Q22. A series is given with one term missing. Select the correct alternative from the given that will complete the series.

Second, Minute, Hour, ?

- (a) Days
- (b) Night
- (c) Year
- (d) Month



The advertisement features a woman in a pink and white patterned top against a dark red background. In the top left corner, there is a logo with a 'K' and the word 'LIVE'. In the top right corner, the word 'BILINGUAL' is written in white. The main text in the center reads 'ENGLISH BY NEETU SINGH' in large white letters, followed by '12th May' in a slightly smaller font. At the bottom, there are two orange boxes containing the text 'Tue, Thr, Sat' and '5 pm - 7 pm'.

Q23. Amit, Bhuwan, Chetan, Dilip, Lalit and Fahim are sitting in a row facing west. Chetan is between Amit and Lalit. Bhuwan is just to the left of Lalit but right of Dilip. Chetan is sitting to the immediate right of Lalit. Fahim is at the extreme left end. Which pair is sitting by the side of Dilip ?

- (a) Lalit and Bhuwan
- (b) Bhuwan and Fahim
- (c) Amit and Fahim
- (d) Chetan and Amit

Q24. Arrange the given words in the sequence in which they occur in the dictionary.

- i. Irrelevant
 - ii. Invincible
 - iii. Irresistible
 - iv. Invariable
 - v. Investigate
- (a) iv, ii, v, iii, i
 - (b) iv, v, i, iii, ii
 - (c) ii, v, iv, i, iii
 - (d) iv, v, ii, i, iii

Q25. In a certain code language "READER" is written as "123421" and "DIRTY" is written as "49178". How will "DEARER" be written in that code language ?

- (a) 432121
- (b) 423212
- (c) 423121
- (d) 412312

Q26. In the following question, select the missing number from the given series.

36	86	35
72	59	78
56	45	?
52	100	100

- (a) 11
- (b) 13
- (c) 12
- (d) 14

Q27. If "-" stands for "division", "+" stands for "multiplication", "÷" stands for "subtraction" and "×" stands for "addition", then which of the following equations holds true ?

- (a) $4 \times 5 + 9 - 3 \div 4 = 15$
- (b) $4 - 5 \times 9 + 3 \div 4 = 32$
- (c) $4 - 5 \div 18 \times 3 - 4 = 70$
- (d) $4 \div 5 + 9 - 3 \div 4 = 81$

Q28. In the question, which one set of letters when sequentially placed at the gaps in the given letter series shall complete it ?

p _ q _ _ qq _ p _ qr

- (a) qrppr
- (b) qrprq
- (c) qrpqr
- (d) qpprq

Q29. A watch reads 3 : 30. If the minute hand points towards the north-east direction, then in what direction will the hour hand point ?

- (a) South-west
- (b) North-west
- (c) South-east
- (d) North-east

Q30. A word is represented by only one set of numbers as given in any one of the alternatives. The sets of numbers given in the alternatives are represented by two classes of alphabets as shown in the given two matrices. The columns and rows of Matrix-I are numbered from 0 to 4 and that of Matrix-II are numbered from 5 to 9. A letter from these matrices can be represented first by its row and next by its column, for example, 'I' can be represented by 23, 34 etc. and 'A' can be represented by 65, 99, etc. Similarly, you have to identify the set for the word 'RHINO'.

MATRIX - I

	0	1	2	3	4
0	I	R	O	E	W
1	E	I	W	R	O
2	O	W	E	I	R
3	W	E	R	O	I
4	R	O	I	W	E

MATRIX - II

	5	6	7	8	9
5	N	H	A	Q	P
6	A	P	H	N	Q
7	P	N	Q	A	H
8	Q	A	P	H	N
9	H	Q	N	P	A

- (a) 13, 79, 41, 68, 33
- (b) 40, 56, 23, 97, 04
- (c) 32, 67, 23, 89, 12
- (d) 13, 88, 34, 76, 02

6 Months Subscription

SSC CGL

TIER-II MAHA PACK

Test Series, Live Classes,
Video Course, Ebooks

Bilingual (With e-Books)