

Reasoning Mega Quiz for SSC CHSL

Q1. Select the related word/letter/number from the given alternatives.

ASK : KAS :: SAW : ?

- (a) WAS
- (b) ASW
- (c) PQR
- (d) WSA

Q2. Select the related word/letter/number from the given alternatives.

36 : 3 :: 108 : ?

- (a) 9
- (b) 13
- (c) 12
- (d) 16

Q3. Select the odd word/letters/number pair from the given alternatives.

- (a) AEG
- (b) END
- (c) IUC
- (d) OIL

Q4. Select the odd word/letter/number pair from the given alternatives.

- (a) 236
- (b) 327
- (c) 248
- (d) 177

Q5. A series is given with one term missing. Select the correct alternative from the given ones that will complete the series.

LOR, PSV, TWZ, ?

- (a) YBE
- (b) XAD
- (c) XAB
- (d) YBD

Q6. Which one of the given responses would be a meaningful order of the following:

6 Months Subscription

SSC CGL
TIER-II MAHA PACK





Test Series, Live Classes,
Video Course, Ebooks

Bilingual (With e-Books)

1. Implementation
2. Conceptual Modelling
3. Requirements Analysis
4. Logical Modelling
5. Physical Model
6. Schema Refinement

- (a) 3, 2, 1, 4, 6, 5
- (b) 3, 2, 4, 6, 5, 1
- (c) 1, 3, 2, 6, 5, 4
- (d) 3, 2, 5, 4, 6, 1

Q7. Identify the diagram that best represents the relationship among the given classes. Mathematics, Arithmetic, Algebra

- (a) 
- (b) 
- (c) 
- (d) 

Q8. Select the related word/letters/number from the given alternatives.

The Time Machine: H. G. Wells :: Julius Caesar : ?

- (a) Rabindra Nath Tagore
- (b) William Shakespeare
- (c) Charles Dickens
- (d) Leo Tolstoy

Q9. Select the related word/letters/number from the given alternatives.

LK : OP :: ? : UV

- (a) ML
- (b) TU
- (c) NQ
- (d) FE

Q10. Select the odd word/letters/number/number pair from the given alternatives.

- (a) Vishakhapatnam
- (b) Mumbai
- (c) Kochi
- (d) Bhubaneshwar

Q11. Select the related word/letters/number from the given alternatives.

Hirakund : Mahanadi :: Tehri Dam : ?

- (a) Damodar
- (b) Bhagirathi
- (c) Yamuna
- (d) Son

Q12. Select the related word/letters/number from the given alternatives.

IM : RZ :: HF : ?

- (a) MP
- (b) OK
- (c) PL
- (d) QR

Q13. Find out the odd word/letters/number/number pair from the given alternatives.

- (a) Mohammad Azharuddin
- (b) Sunil Gavaskar
- (c) Dhyan Chand
- (d) Yuvraj Singh

Q14. In the following question, select the missing number from the given series.

25	144	60
81	225	135
49	289	?

- (a) 119
- (b) 120
- (c) 170
- (d) 190

Q15. In the following question, which one set of letters when sequentially placed at the gaps in the given letter series shall complete it?

c_e_cd_f_de_

- (a) dfecf
- (b) dfcef
- (c) fdcef
- (d) dffcd

TEST SERIES

Bilingual



SSC CGL TIER-II

PRIME

59 Total Tests | eBooks

Q16. A word is represented by only one set of numbers as given in any one of the alternatives. The sets of numbers given in the alternatives are represented by two classes of alphabets as shown in the given two matrices. The columns and rows of Matrix-I are numbered from 0 to 4 and that of Matrix-II are numbered from 5 to 9. A letter from these matrices can be represented first by its row and next by its column, for example, 'N' can be represented by 23, 00 etc. and 'R' can be represented by 88, 95 etc. Similarly, you have to identify the set for the word 'HIGHLY'.

Matrix - I

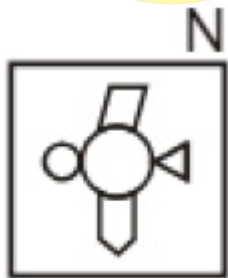
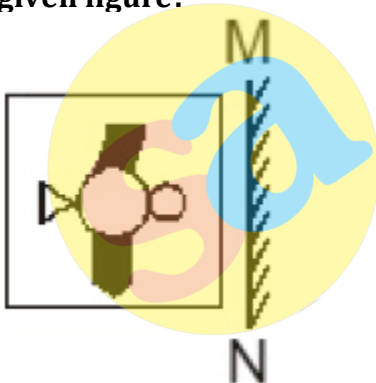
	0	1	2	3	4
0	N	D	P	R	B
1	G	E	R	A	R
2	H	R	L	N	E
3	R	C	Y	E	G
4	S	V	E	Y	H

Matrix - II

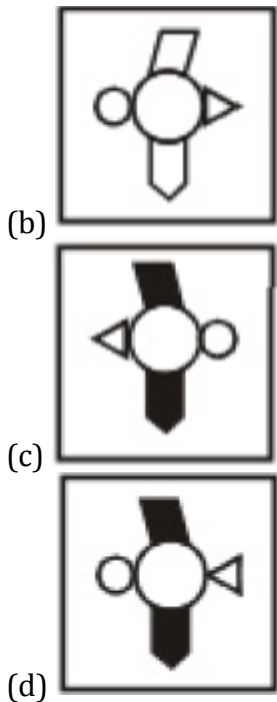
	5	6	7	8	9
5	S	H	L	H	G
6	D	L	H	G	G
7	E	H	N	I	D
8	Q	S	I	R	A
9	R	I	Y	B	S

- (a) 58, 78, 69, 20, 22, 31
- (b) 76, 96, 68, 43, 66, 43
- (c) 76, 78, 10, 44, 57, 32
- (d) 67, 87, 98, 76, 77, 86

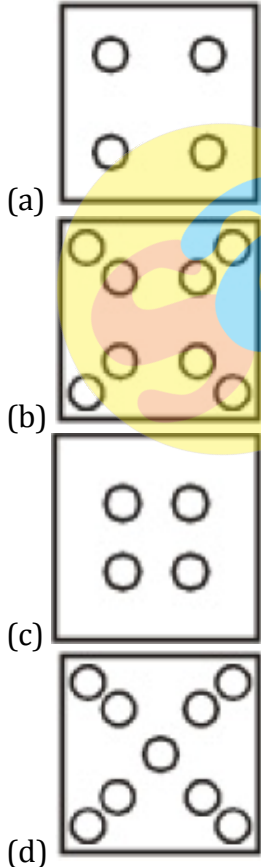
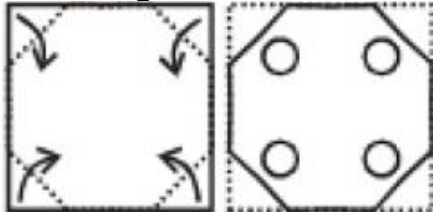
Q17. If a mirror is placed on the line MN, then which of the answer figures is the right image of the given figure?



(a)



Q18. A piece of paper is folded and punched as shown below in the question figures. From the given answer figures, indicate how it will appear when opened.



SSCadda.com

Complete Preparation for
SSC Exams

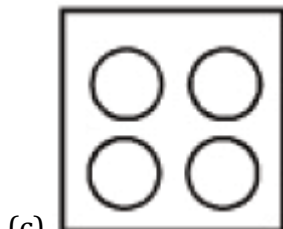
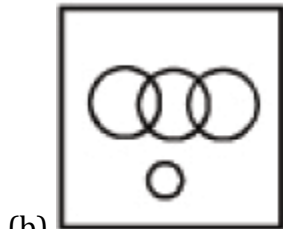
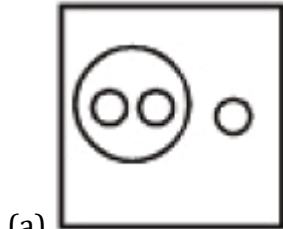
SSC
EXTREME

Video Courses, Test Series,
eBooks

Q19. Introducing a girl, a man says, "She is the daughter of the daughter of my wife". How is man related to the girl?

- (a) Maternal uncle
- (b) Son
- (c) Maternal grandfather
- (d) Father

Q20. Identify the diagram that best represents the relationship among the given classes. Olympic games, Tennis, Wrestling, Ludo



Q21. If DELHI is coded as 73541 and CALCUTTA as 82589662, how can CALICUT be coded?

- (a) 5279431
- (b) 5978213
- (c) 8251896
- (d) 8543691

Q22. Choose the odd numeral pair/group in each of the following questions:

- (a) 22, 4, 5
- (b) 34, 4, 8
- (c) 37, 4, 9
- (d) 54, 4, 13

Q23. In each of this question, four words have been given, out of which three are alike in some manner and the fourth one is different. Choose out the odd one.

- (a) Cricket
- (b) Hockey
- (c) Billiards
- (d) Fencing

Q24. TRADE is related to UQBCF in the same way as PLATE is related to?.....

- (a) QKBSF
- (b) QKBUF
- (c) OMZUD
- (d) QMBUF

Q25. In this question, one term in the number series is wrong. Find out the wrong term.

25, 36, 49, 81, 121, 169, 225

- (a) 36
- (b) 49
- (c) 169
- (d) 225

Q26. The positions of how many digits in the number 529468173 will remain same when the digits are arranged in ascending order?

- (a) Three
- (b) One
- (c) Two
- (d) None

Q27. Pointing to a photograph a woman says, "He is the brother of the daughter of my mother-in-law's only son". How is the man related to the woman?

- (a) Son
- (b) Brother
- (c) Brother-in-law
- (d) Nephew

Q28. In a certain code language 'tree is very beautiful' is written as 'ka na da ta' and 'this is strong tree' is written as 'na pa sa ka'. How is 'beautiful' written in that code language?

- (a) da
- (b) ta
- (c) sa
- (d) Data inadequate

Q29. If '-' means '+', '+' means '-', 'x' means '÷' and '÷' means 'x' then which of the following will be the correct equation?

- (a) $10 + 5 - 14 \div 10 \times 15 = 158$
- (b) $30 + 5 + 14 - 10 \times 15 = 122$
- (c) $30 - 5 + 14 \div 10 \times 15 = 162$
- (d) $30 \times 5 - 4 \div 10 + 15 = 31$

Q30. Select the related numbers from the given alternatives:

14 : 39 :: 15 : ?

- (a) 48
- (b) 42
- (c) 39
- (d) 51

TEST SERIES

Bilingual



SSC CGL TIER-II

PRIME

59 Total Tests | eBooks