

Reasoning Mega Quiz for RRB NTPC

Q1. Find out the odd word/letters/number/number pair from the given alternatives.

- (a) 78, 26
- (b) 19, 20
- (c) 20, 40
- (d) 36, 12

Q2. A series is given with one term missing. Choose the correct alternative from the given ones that will complete the series.

3, 6, 9, 36, 41, ?

- (a) 244
- (b) 225
- (c) 246
- (d) 410

Q3. A series is given with one term missing. Choose the correct alternative from the given ones that will complete the series.

JLN, RTV, ZBD, ?

- (a) SUW
- (b) HJL
- (c) GHI
- (d) TVX

Q4. If yesterday was Tuesday, then what day of the week will the tenth day from today be?

- (a) Friday
- (b) Sunday
- (c) Monday
- (d) Saturday

Q5. In a certain code language, 'TAPERECORDER' is written as '!#&@^@?%+@^'. How is 'REPORT' written in that code language?

- (a) ^@&^%!
- (b) ^@&%!
- (c) ^@&%^!
- (d) ^@%&^!



Q6. Select the related word/letters/number from the given alternatives.

ACEG : ZXVT :: IKMO : ?

- (a) MNOP
- (b) PQRS
- (c) RPNL
- (d) LNPR

Q7.

$$\text{If } 17 + 17 = 2895$$

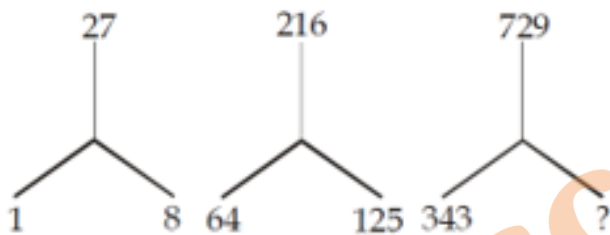
$$18 + 18 = 3245$$

$$19 + 19 = 3615$$

$$\text{then } 23 + 23 = ?$$

- (a) 5765
- (b) 2565
- (c) 4005
- (d) 5295

Q8. Select the missing number from the given responses.



- (a) 432
- (b) 334
- (c) 512
- (d) 501

Q9. Consider the given statement/s to be true and decide which of the given conclusions/assumptions can definitely be drawn from the given statement.

Statement: Poverty is a symptom as well as a consequence of social disorder.

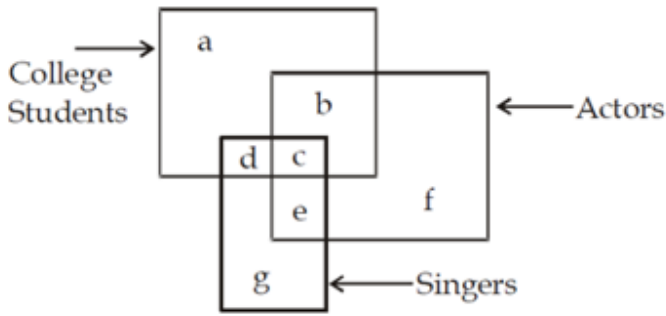
Assumptions:

I. Poverty is a type of social order

II. Poverty is related to social order

- (a) only I assumption is correct
- (b) only assumption II is correct
- (c) Both assumptions I and II are correct
- (d) Neither assumption I nor II is correct

Q10. Find the part which represents those actors who are also singers?

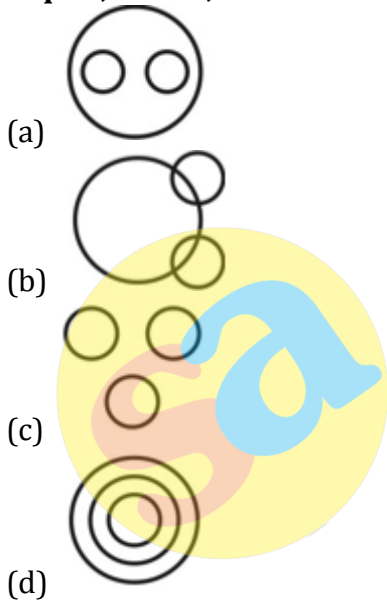


- (a) a
- (b) b
- (c) c
- (d) f

Q11. Introducing a girl Anjali says, "She is the daughter of the only sister of the son of my mother". How is the girl related to Anjali?

- (a) Cousin
- (b) Daughter
- (c) Sister-in-law
- (d) Niece

Q12. Identify the diagram that best represents the relationship among the given classes. Liquid, Water, Oil



Q13. Select the related word/letters/number from the given alternatives.

Donkey : Brays :: Monkey : ?

- (a) Chatters
- (b) Trumpets
- (c) Bellows
- (d) Grunts

BILINGUAL



RRB NTPC 4.0

Starts April 9, 2020

2 PM to 3 PM

Q14. Find the odd word/letters/number pair from the given alternatives.

- (a) Swimming
- (b) Sailing
- (c) Diving
- (d) Driving

Q15. Find the odd word/letters/number pair from the given alternatives.

- (a) 443
- (b) 633
- (c) 821
- (d) 245

Q16. Choose the correct alternative that will replace the question mark in the given series:

DHL, PTX, BFJ, ?

- (a) KOS
- (b) NRV
- (c) NPS
- (d) NRU

Q17. The age of Rakhi is twelve times that of her daughter Anubha. If age of Anubha is 3 years now, then what was the age of Rakhi, 2 years earlier?

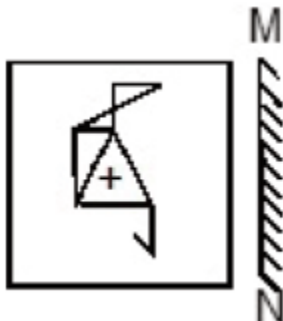
- (a) 20 years
- (b) 34 years
- (c) 30 years
- (d) 36 years

Q18. From the given words, select the word which can be formed using the letters of the given word?

AMPLIFICATION

- (a) ACTOR
- (b) MANOR
- (c) CHAMP
- (d) MANIA

Q19. If a mirror is placed on the line MN, then which of the answer figures is the right image of the given figure?







6 Months Subscription

RRB NTPC

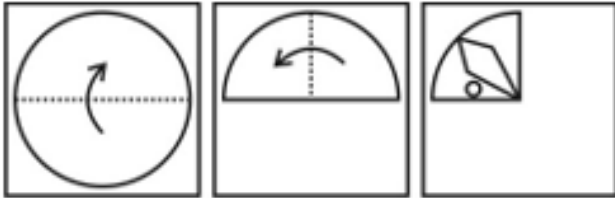
KA MAHA PACK



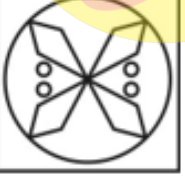

Test Series, Live Classes,
Video Course, eBooks

Bilingual

- (a) 
- (b) 
- (c) 
- (d) 

Q20. A piece of paper is folded and punched as shown below in the question figures. From the given answer figures, indicate how it will appear when opened.



- (a) 
- (b) 
- (c) 
- (d) 

Q21. Select the related word/letter/number from the given alternatives.

A Suitable Boy : Vikram Seth :: Gitanjali : ?

- (a) R. K. Narayan
- (b) Mulk Raj Anand
- (c) RabindraNath Tagore
- (d) MunshiPrem Chand

Q22. Select the related word/letter/number from the given alternatives.

MALAYALAM : MALAYALAM :: SYSTEM : ?

- (a) METSYS
- (b) TEMSYS
- (c) SYSTEMS
- (d) MTESYS

Q23. Select the odd word/letter/number pair from the given alternatives.

- (a) Flamingo
- (b) Hawk
- (c) Monkey
- (d) Penguin

Q24. Select the odd word/letter/number pair from the given alternatives.

- (a) 31
- (b) 37
- (c) 39
- (d) 41

Q25. A series is given with one term missing. Select the correct alternative from the given ones that will complete the series.

Mercury, Venus, Earth, ?

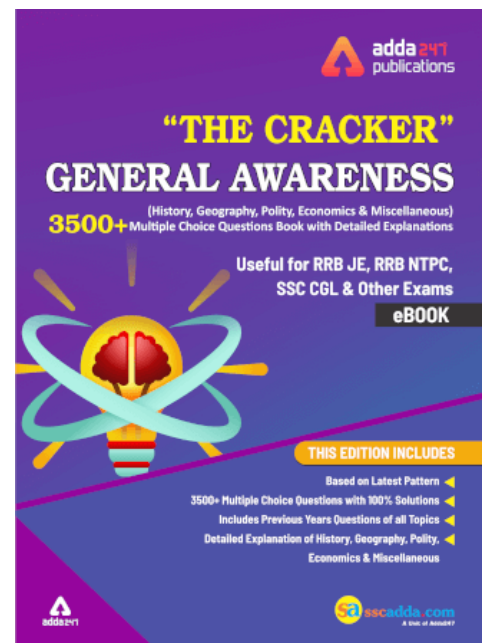
- (a) Jupiter
- (b) Saturn
- (c) Mars
- (d) Pluto

Q26. Select the odd word/letters/number/number pair from the given alternatives.

- (a) eno
- (b) iqa
- (c) ubu
- (d) olr

Q27. Select the odd word/letters/number/number pair from the given alternatives.

- (a) 308
- (b) 108
- (c) 288
- (d) 240



Q28. A series is given with one term missing. Select the correct alternative from the given ones that will complete the series.

RS, WX, ? , GH

- (a) BC
- (b) AB
- (c) CD
- (d) EG

Q29. A series is given with one term missing. Select the correct alternative from the given ones that will complete the series.

10, 22, 46, ?

- (a) 90
- (b) 91
- (c) 95
- (d) 94

Q30. Vishu, Pooja, Vishakha, Rani and Ram are sitting in a line. Pooja is third to the extreme right end. Vishu is second to the left of Pooja. Vishakha is to the right of Pooja. Rani is third to the right of Ram, who is the immediate neighbour of Vishu. Who is sitting in the middle?

- (a) Pooja
- (b) Ram
- (c) Visakha
- (d) Rani



SSCadda.com