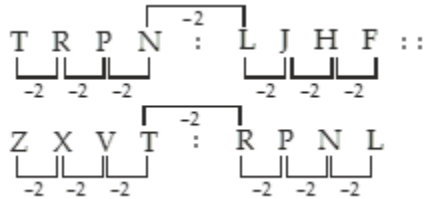


Reasoning Mega Quiz for SSC CHSL (Solutions)

S1. Ans.(b)

Sol.



S2. Ans.(d)

Sol.

$$9\frac{1}{11} = \frac{100}{11}, 7\frac{9}{13} = \frac{100}{13}, 5\frac{15}{17} = \frac{100}{17}$$

$$5\frac{6}{19} = \frac{101}{19} \text{ odd one}$$

S3. Ans.(c)

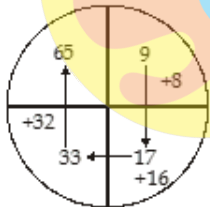
Sol.

The pattern is  $\times 2 + 1, \times 2 - 1, \times 2 + 1, \times 2 - 1, \dots$

so, missing term =  $67 \times 2 - 1 = 133$

S4. Ans.(d)

Sol.



S5. Ans.(d)

Sol.

Digit, Number	Keyboard
1 - 99	9
10 - 99 (90 number)	$90 \times 2 = 180$
100 - 500 (401 number)	$401 \times 3 = 1203$

Total =  $1203 + 180 + 9 = 1392$  time, he will press the buttons of key board.

Complete Preparation for  
SSC Exams

**SSC**  
**EXTREME**

Video Courses, Test Series,  
eBooks

**S6. Ans.(b)**

**Sol.**

Meaningful order

1. Birth



4. Infancy



3. Childhood



5. Adolescence



6. Adulthood



7. Old age



2. Death

**S7. Ans.(b)**

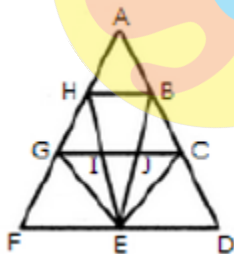
**Sol.** 2 represent the boys who are athletes and disciplined.

**S8. Ans.(b)**

**Sol.** Clock makes two right angle in an hour but it makes one right angle between 3 to 4 and 9 to 10, So in 24 hours, clock will make 44 times right angle.

**S9. Ans.(b)**

**Sol.** The figure may be labeled as shown.



The simplest triangles are AHB, GHI, BJC, GFE, GIE, IJE, CEJ and CDE i.e. 8 in number.

The triangles composed of two components each are HEG, BEC, HBE, JGE and ICE i.e. 5 in number.

The triangles composed of three components each are FHE, GCE and BED i.e. 3 in number.

There is only one triangle i.e. AGC composed of four components.

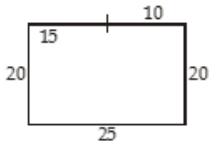
There is only one triangle i.e. AFD composed of nine components.

Thus, there are  $8 + 5 + 3 + 1 + 1 = 18$  triangles in the given figure.

S10. Ans.(b)

Sol.

10 km



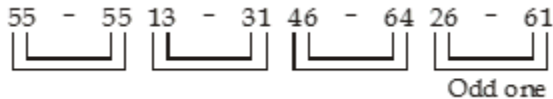
S11. Ans.(d)

Sol. Antonym of Giant – dwarf

Antonym of Genius – Idiot

S12. Ans.(b)

Sol.



S13. Ans.(a)

Sol. S 14 M, Clearly, the first letters of the terms are alternate.

The last letter of each term is three steps ahead of the last letter of the preceding term.

Thus, the next term would be S 14 M. Hence, the answer is (a).

S14. Ans.(c)

Sol. Column wise

I.  $2 \times 7 \times 9 = 126$     II.  $7 \times 3 \times 8 = 168$

III.  $9 \times 4 \times ? = 216$

$\therefore ? = \frac{216}{9 \times 4} = 6$

S15. Ans.(a)

Sol. Using proper symbols, we get the new sequence as

$$94 + 27 - 44 - 56 + 20$$

$$= 121 + 20 - 44 - 56 = 141 - 44 - 56$$

$$= 141 - 100 = 41$$

S16. Ans.(d)

Sol.

Order of words as per Dictionary:

3. Frankalmoign



1. Frankenstein



2. Frankincense



4. Frauendienst

6 Months Subscription

**SSC CGL**  
**TIER-II MAHA PACK**

Test Series, Live Classes,  
Video Course, Ebooks

**Bilingual** (With e-Books)

**S17. Ans.(b)**

**Sol.** Number 5 represents all.

**S18. Ans.(c)**

**Sol.**

25th Oct. → Thursday

26th Oct. → Friday

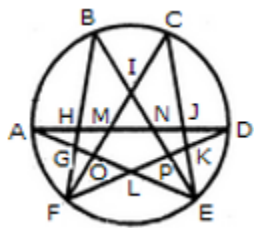
27th Oct. → Saturday

28th Oct. → Sunday

29th Oct. → Monday

**S19. Ans.(d)**

**Sol.** The figure may be labeled as shown.



The simplest triangles are AGH, GFO, LFO, DJK, EKP, PEL and IMN i.e. 7 in number.

The triangles having two components each are GFL, KEL, AMO, NDP, BHN, CMJ, NEJ and HFM i.e. 8 in number.

The triangles having three components each are IOE, IFP, BIF and CEI i.e. 4 in number.

The triangles having four components each are ANE and DMF i.e. 2 in number.

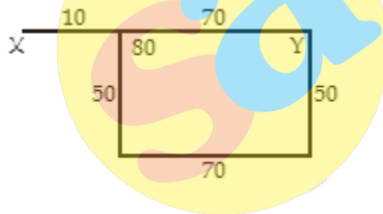
The triangles having five components each are FCK, BGE and ADL i.e. 3 in number.

The triangles having six components each are BPF, COE, DHF and AJE i.e. 4 in number.

Total number of triangles in the figure = 7 + 8 + 4 + 2 + 3 + 4 = 28.

**S20. Ans.(a)**

**Sol.**



**S21. Ans.(c)**

**Sol.** Study of tissue is called Histology.

**S22. Ans.(b)**

**Sol.** Mathematics

**S23. Ans.(c)**

**Sol.**

B F K → K O T → U Y D → F J O  
 | +1 ↑ | +5 ↑ | | +1 ↑ | +5 ↑ | | +1 ↑ | +5 ↑ | | +1 ↑ | +5 ↑

**S24. Ans.(c)**

**Sol.**

$$2 \times 1 + 1 = 3$$

$$3 \times 2 + 2 = 8$$

$$8 \times 3 + 3 = 27$$

**S25. Ans.(a)**

**Sol.** Man is brother-in-law to the woman.

**S26. Ans.(c)**

**Sol.** R

**S27. Ans.(d)**

**Sol.** PEACE

**S28. Ans.(c)**

**Sol.**

(+5 series)

SCHOOL → X H M T T Q

**S29. Ans.(b)**

**Sol.**

$$(24+36)/3=20,$$

$$(55+x)/3=40, x=65$$

**S30. Ans.(c)**



TEST SERIES

Bilingual



**SSC CGL 2019-20**

**PRIME**

**400+ TOTAL TESTS**

Validity : 12 Months

SSCadda.com