

## Reasoning Mega Quiz for SSC CHSL


**Q1. Four latter-cluster have been given out of which three are alike in same manner while one is different choose the odd one**

- (a) BDYW
- (b) CDXW
- (c) EFVU
- (d) DFWV

**Q2. Select the word from given options that is similar to the given words and Hence belong to the same group.**

**Croak: Cackle :: Quack :?**

- (a) Sound
- (b) Squeak
- (c) Speak
- (d) Gallup



**Q3. Select the option in which the words share the same relationship as that shared. By the given pair of words**

**Sun Temple : Odisha**

- (a) Mahabodhi Temple : Gujarat.
- (b) Ajanta Caves : Tamilnadu
- (c) Elora Caves : Maharashtra.
- (d) Elephanta Caves : Madhya Pradesh.

**Q4. Select the option that is related to the third term in the same ways as the Second term is related to the first term?**

$$\frac{7}{50} : \frac{9}{80} :: \frac{11}{122} : ?$$

- (a) 15/225
- (b) 168
- (c) 13/168
- (d) 15/226



12 Months Subscription

adda247

SSC

Useful for CGL, CHSL & others

TEST PACK

**Q5. Select the option that is related to the fifth number in the same way as the second number is related to the first number and fourth number is related to third number?**

**120 : 145 :: 168 : 197 :: 224 : ?**


- (a) 254
- (b) 255
- (c) 256
- (d) 257

**Q6. Select the letter that can replace the question mark in the following series.**

**E, Y, V, P, M, ?, D**

- (a) E
- (b) F
- (c) H
- (d) G

**Q7. Study the given pattern Carefully and select the number that Can Replace the question mark (?) in**



14	7	5	10
18	4	2	9
16	2	3	24
13	?	6	39

- (a) 8
- (b) 5
- (c) 3
- (d) 2

**Q8. Select the option in which the numbers share the same relationship as that shared by that given pairs of numbers.**

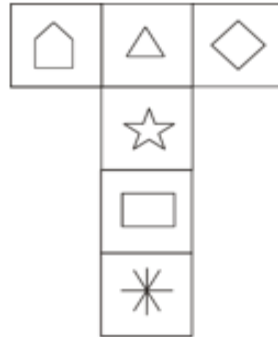
**80 : 110**

- (a) 35 : 55
- (b) 48 : 78
- (c) 24 : 50
- (d) 17 : 35

**Q9. In a Code language CUPE is Coded as 952562 then TAPE is coded as?**

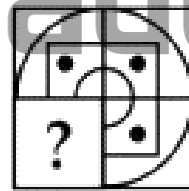
- (a) 20122556
- (b) 40012265
- (c) 40012565
- (d) 40012562

Q10. A cube is made by folding the given sheet. In the cube so farmed, what would be the symbol on the opposite of ☆ ?

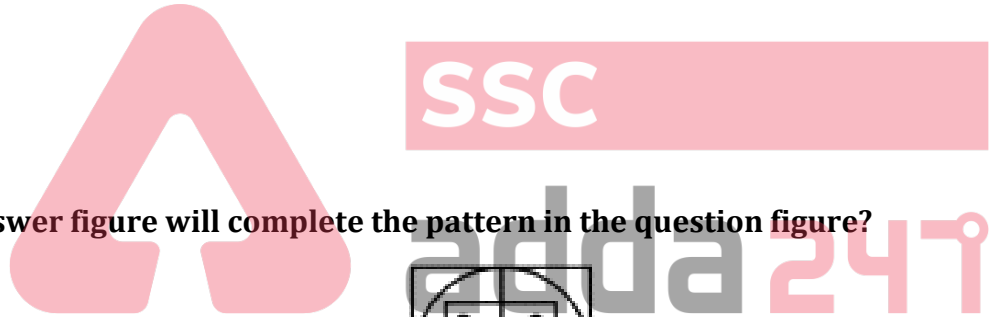


- (a)
- (b)
- (c)
- (d)

Q11. Which answer figure will complete the pattern in the question figure?



- (a)
- (b)
- (c)
- (d)



12 Months Subscription

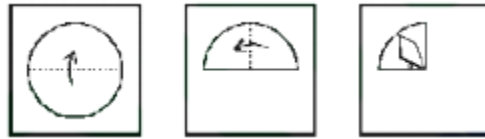
# SSC

## MAHA PACK

Live Class, Video Course,  
Test Series, eBooks


**Bilingual (with eBooks)**

**Q12.** A piece of paper is folded and punched as shown in the question figures. From the given figures, indicate how it will appear when opened.



- (a)
- (b)
- (c)
- (d)

**Q13.** If a mirror is placed on the line MN, then which of the answer figure is the right image of the given figure?



- (a)
- (b)
- (c)
- (d)

**Q14.** Select the combination of letters that when sequentially placed in the gaps of the given letter series will complete the series .

a \_ c \_ \_ b b \_ c a a a \_ b \_ c c \_

- (a) baacbbc
- (b) baccbbc
- (c) baabaac
- (d) bbaaccb

**Q15. Below are given statements followed by some conclusions. You have to take the given statements to be true even if they seem to be at variance with commonly known facts and then decide which of the given conclusions logically follow (s) from the given statements.**

**Statements –**

No mouse is pad.

All pads are leathers

**Conclusion-**

I. Some leathers are pads

II. Some leathers are mouse

III. No leather is mouse

(a) Only conclusion III follows

(b) Either II or III follows

(c) Only conclusion I follows

(d) Either conclusion II or III, and I follows.

**Q16. 'P+Q', means 'P is the sister of Q'**

'P-Q', means 'P is the daughter of Q'

'P×Q', means 'P is the brother of Q'

'P÷Q', means 'P is the husband of Q'

**If  $A+B \times C - D \div E + F \times G$ , then how is F related to A?**

(a) Maternal Uncle

(b) Maternal Aunt

(c) Paternal Uncle

(d) Paternal Aunt

**Q17. Three of the following four words are alike in a certain way and one is different. Pick the odd one out.**

(a) Apple

(b) Mango

(c) Almond

(d) Guava

**Q18. Three of the following four numbers are alike in a certain way and one is different. Pick the odd one out.**

(a) 13 : 2366

(b) 17 : 5202

(c) 15 : 3600

(d) 11 : 1451

**Q19. These of the following four letters are alike in a certain way and one is different. Pick the odd one out.**

(a) A

(b) U

(c) O

(d) D




TEST SERIES  
Bilingual  
SSC CGL TIER-II  
PRIME  
59 Total Tests | eBooks

**Q20. If you wrote all the numbers from 1 to 99, then how many times would you have written '7'?**

- (a) 19
- (b) 18
- (c) 21
- (d) 20


**Q21. Select the Answer Fig. that will come next in the following problem Fig. series.**



- (a)
- (b)
- (c)
- (d)



**Q22. Select the correct mirror image of the given figure when the mirror is placed to the right of the figure.**



- (a)
- (b)
- (c)
- (d)

Q23. Select the option in which the given figure (X) is embedded.



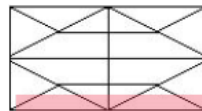
- (a)
- (b)
- (c)
- (d)

Complete Preparation for  
SSC Exams

# SSC EXTREME

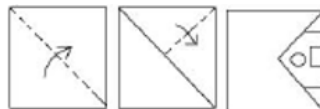
Video Courses, Test Series,  
eBooks

Q24. Find the total number of triangles in the given figure below-



- (a) 24
- (b) 25
- (c) 26
- (d) 27

Q25. The sequence of folding a piece of paper and the manner in which the folded paper has cut is shown in the following figures. How would this paper look when unfolded?



- (a)
- (b)
- (c)
- (d)

**Q26. Select the option that is related to the third number in the same way as the second number is related to the first number.**

**18 : 17 :: 24 : \_**

- (a) 21
- (b) 14
- (c) 18
- (d) 16

**Q27. Select the word pair in which the two words are related in the same way as the two words in the following word - pair .**

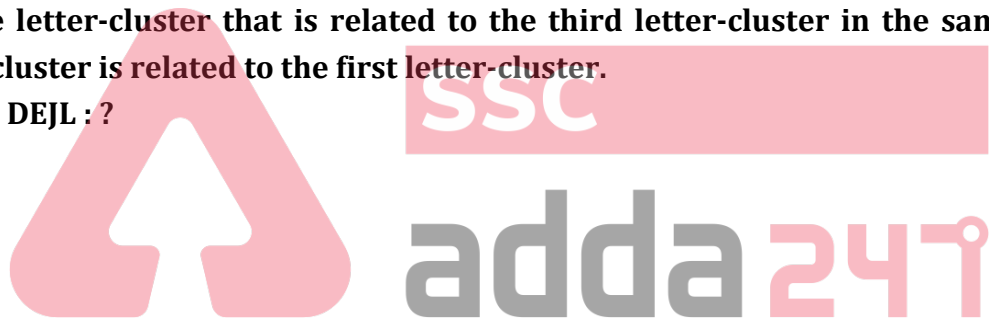
**Badminton : Court**

- (a) Hockey : Stick
- (b) Cricket : Bat
- (c) Skating : Rink
- (d) Football : Goal

**Q28. Select the letter-cluster that is related to the third letter-cluster in the same way that the second letter-cluster is related to the first letter-cluster.**

**AFIM : WROK :: DEJL : ?**

- (a) TQNO
- (b) TSNL
- (c) TSNO
- (d) SQMK



**Q29. If 'H' is coded as '16' and 'M' is coded as '26' , then how will 'F' be coded ?**

- (a) 12
- (b) 16
- (c) 14
- (d) 9

**Q30. In a code language, HEART is written as IGDVY how will FRIEND be written in that language?**

- (a) GQLTSI
- (b) GTLISJ
- (c) ETLISJ
- (d) ETLISP

12 Months Subscription

**SSC**

Useful for CGL, CHSL & others

**TEST PACK**