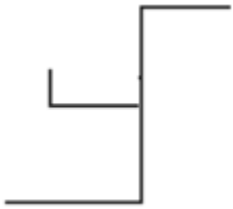
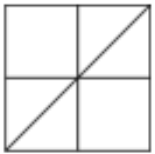


Reasoning Mega Quiz for SSC CHSL


Q1. Select the option in which the given figure is embedded?



(a)



(b)



(c)



(d)



Q2. Select word-pair in which the two words are related in the same ways as are the two words in the following words pair

Whisper: Shout

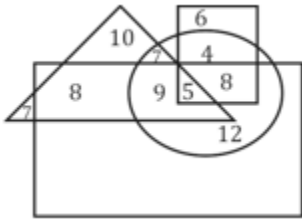
- (a) Think: thought
- (b) Clean: wash
- (c) Request: order
- (d) Heat: summer

Complete Preparation for
SSC Exams

SSC
EXTREME

Video Courses, Test Series,
eBooks

Directions (3-4): in a given diagram the triangle represent 'dancer' the circle represents 'Footballer'. The rectangle represents Boys. And the square represents students.



Q3. How many Boys students are only footballer.

- (a) 5
- (b) 8
- (c) 13
- (d) 12

Q4. How many boys are footballer, dancer and singers?

- (a) 7
- (b) 4
- (c) 5
- (d) None of these

Q5. Select the set of numbers that is similar to the following set of number.

(17, 25, 37)

- (a) (10, 15, 20)
- (b) (15, 17, 23)
- (c) (17, 26, 37)
- (d) (13, 18, 25)

Q6. Select the option that is related to the third term in the same way as the second term is related to first term.

CDFG : JKMN :: XYAB :

- (a) CDFG
- (b) EFHI
- (c) EFGH
- (d) CDEG

Directions (7-8): select the option that is related to the third number in the same way as the second is related to first number.

Q7. 9 : 101 :: 10 :

- (a) 100
- (b) 122
- (c) 121
- (d) 120

Q8. 8 : 9 :: 64 : ?

- (a) 36
- (b) 25
- (c) 24
- (d) 27

Q9. Two statements are given followed by three conclusion numbered I, II and III. Assuming the statements to be true, even they seem to be at variance with commonly known facts decided which of the conclusions logically follow from statement.

Statements:

Some vegetable are fruits.

No fruit is mango.

Conclusions:

I. some vegetables are Mangoes

II. Some fruits are vegetable.

III. No vegetable is mango.

- (a) only conclusion III follows.
- (b) only conclusion II follows.
- (c) Only conclusion I and III follows.
- (d) only conclusion I follows.

Q10. Which number will replace the question mark in the following series?

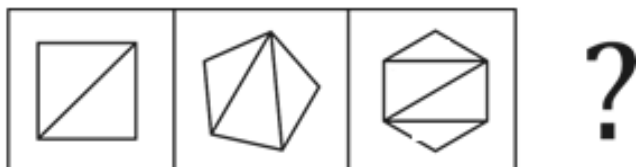
0, 1, 5, 14, 30, 55, ?

- (a) 65
- (b) 76
- (c) 81
- (d) 91

Q11. Three of the following four letter-clusters are alike in a certain way and one is different. Find the odd one out.

- (a) XAZC
- (b) PRRT
- (c) CDDE
- (d) LMNO

Q12. Find the figure that will come next in the following figure series.



6 Months Subscription

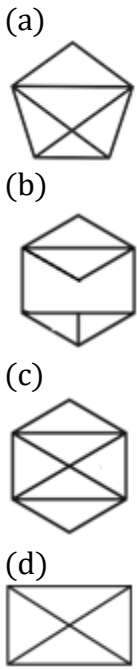
SSC CGL
TIER-II MAHA PACK

Test Series, Live Classes,
Video Course, Ebooks

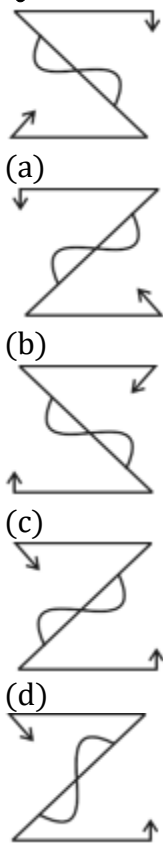
Bilingual (With e-Books)

SSC

adda247



Q13. Select the mirror image of the figure when mirror is placed on the top of the figure.



Q14. Select the word pair in which the two words are related in the same ways as are the two words in the following.

Vision: Blindness.

- (a) Cholera : Epidemic
- (b) Old age : Senility
- (c) Deaf : hear
- (d) Audition : Hearing.

Q15. Ram's school bus was facing north – west when it reaches his school. After starting from his house the took one left turn, one Right turn another left turn to reach. If bus pick up Ram and starting towards East direction then in which direction bus facing to reach school.

- (a) South-east
- (b) North-east
- (c) North.
- (d) South

Q16. Which letter-cluster will replace the question mark (?) in the following series?

AZC, DXF, GUI, _?, MLO

- (a) KQM
- (b) JQL
- (c) KPN
- (d) JRL

Q17. Three of the following four words are alike in a certain way and one is different. Find the odd one out.

- (a) Iron Box
- (b) Mixer Grinder
- (c) Computer
- (d) Gas Stove

Q18. Select the correct alternative to indicate the arrangement of the following words in a logical order and meaningful order.

- (1) State
- (2) District
- (3) City
- (4) Continent
- (5) Country
- (a) 5, 4, 3, 2, 1
- (b) 4, 5, 1, 2, 3
- (c) 4, 5, 1, 3, 1
- (d) 4, 5, 2, 3, 1

Q19. If $CAD = 4$ and $BUS = 4$

Then $TRAIN = ?$

- (a) 4
- (b) 5
- (c) 6
- (d) 7



TEST SERIES	
Bilingual	
SSC CGL 2019-20	
PRIME	
400+ TOTAL TESTS	
Validity : 12 Months	

Q20. Which number will replace the question mark (?) in the following series?

8, 11, 17, 20, 26, _?_

- (a) 29
- (b) 32
- (c) 35
- (d) 27

Q21. Select the Venn diagram that best illustrates the relationship between the following classes.

Nurses, Doctors, Pharmacists

(a)



(b)



(c)



(d)



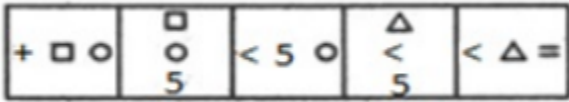
Q22. In a code language, CONSULTANCY is written as QOJKYOUYJWP. How will MASTERMINDS be written as in that language?

- (a) APOWIIOZJEI
- (b) APOWHIOZJEI
- (c) APOWIHOZJEI
- (d) APOWJIOZJEI

Q23. Ranga got thrice as many sums wrong as he got right in a mathematics assignment. If he attempted 72 sums in all, how many did he solve correctly in his mathematics assignment?

- (a) 16
- (b) 20
- (c) 14
- (d) 18

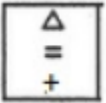
Q24. Select the figure that will come next in the following figure series.



(a)



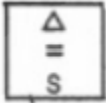
(b)



(c)



(d)



TEST SERIES
Bilingual




SSC CGL TIER-II

PRIME

59 Total Tests | eBooks

Q25. If 'FORTUNE' is coded as '6521347' and 'PREY' is coded as '8279' then how will 'NEPTUNE' be coded as?

- (a) 4781347
- (b) 4781342
- (c) 4782347
- (d) 4781343

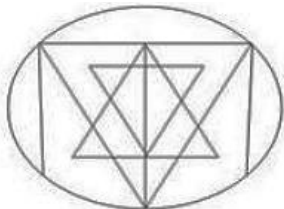


Q26. Select the option that is related to the third letter-cluster in the same way as the second letter-cluster is related to the first letter-cluster.

BANK: WXLJ :: IDOL: _____

- (a) DAKM
- (b) ADMK
- (c) DAMJ
- (d) DAMK

Q27. How many triangles are present in the following figure?

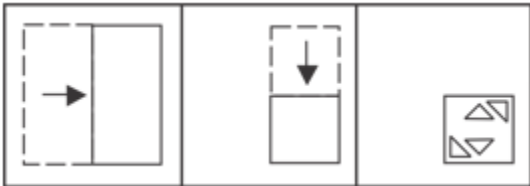


- (a) 23
- (b) 27
- (c) 25
- (d) 29

Q28. Three of the following four numbers are alike in a certain way and one is different. Pick the number that is different from the rest.

- (a) 83115
- (b) 54215
- (c) 43217
- (d) 12347

Q29. A paper is folded cut as shown in the following figures. How will it appear when unfolded?



- (a)
- (b)
- (c)
- (d)



Q30. T is sister of D.D is married to P.P is the son of M.T is the mother of J.Y is the father of U.Y has only one son and only one daughter. U is the daughter of T.Q is the son of D. If M is the wife of W, then how is Q related to W?

- (a) Son-in-law
- (b) Son
- (c) Grandson
- (d) Nephew

NRA-CET Ready

SSC

MAHA PACK

Live Class, Video Course,
Test Series, eBooks

Bilingual (with eBooks)

12 Months Subscription