

Reasoning Mega Quiz for SSC Tier-1

Q1. Select the related word/letters/number from the given alternatives.

Doctor : Patient :: Shopkeeper : ?

- (a) Products
- (b) Customer
- (c) Retailer
- (d) Games

Q2. Select the related word/letters/number from the given alternatives.

EF : GH :: IJ : ?

- (a) MN
- (b) LK
- (c) KL
- (d) GH

Q3. Select the related word/letters/number from the given alternatives.

AE : FJ :: ? : PT

- (a) OK
- (b) KO
- (c) DE
- (d) FG

Q4. Select the related word/letters/number from the given alternatives.

96 : 54 :: 89 : ?

- (a) 76
- (b) 72
- (c) 67
- (d) 64

Q5. Select the odd word/letters/number/number pair from the given alternatives.

- (a) Magenta
- (b) Maroon
- (c) Turquoise
- (d) Picasa

Q6. Select the odd word/letters/number/number pair from the given alternatives.

- (a) AI
- (b) OU
- (c) AD
- (d) IO



Bilingual

SSC CHSL
PRIME

265+ Total Tests

2020-21 Online Tests

Q7. Select the odd word/letters/number/number pair from the given alternatives.

- (a) 3
- (b) 7
- (c) 5
- (d) 1

Q8. Select the odd word/letters/number/number pair from the given alternatives.

- (a) 525
- (b) 745
- (c) 636
- (d) 416

Q9. A series is given with one term missing. Choose the correct alternative from the given ones that will complete the series.

Nitrogen fixation, Ammonification, Nitrification, ?

- (a) Denitrification
- (b) Nitrate
- (c) Decomposer
- (d) Fossil Fuel

Q10. A series is given with one term missing. Choose the correct alternative from the given ones that will complete the series.

CEA, GIE, KMI, ?

- (a) NOP
- (b) OPM
- (c) OQM
- (d) LMN



Q11. In the following question, select the related word from the given alternatives.

Car : Road :: Rail : ?

- (a) Water
- (b) Air
- (c) Road
- (d) Track

Q12. In the following question, select the related letters from the given alternatives.

UVWX : YYYY :: ABCD : ?

- (a) YYYY
- (b) EEEE
- (c) DDDD
- (d) FFFF

Q13. In the following question, select the related number from the given alternatives.

102 : 10404 :: 104 : ?

- (a) 10202
- (b) 10404
- (c) 10804
- (d) 10816

Q14. In the following question, select the odd letters from the given alternatives.

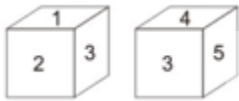
- (a) ADG
- (b) CFI
- (c) JMQ
- (d) SVY

Q15. How many triangles are there in the given figure?



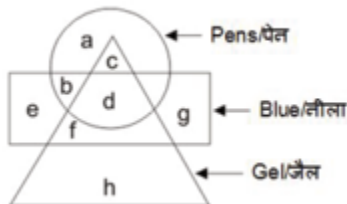
- (a) 6
- (b) 7
- (c) 8
- (d) 10

Q16. Two position of a cube are shown below. What will come opposite to face containing '1'?



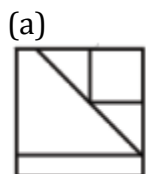
- (a) 4 or 5
- (b) 5
- (c) 4
- (d) 3

Q17. In the given figure, which alphabet represents gel pens which are not blue?



- (a) c
- (b) d
- (c) h
- (d) b

Q18. Which answer figure will complete the pattern in the question figure?



(b)



(c)



(d)



Q19. From the given answer figures, select the one in which the question figure is hidden/embedded.



(a)



(b)



(c)



(d)



Q20. A piece of paper is folded and punched as shown below in the question figures. From the given answer figures, indicate how it will appear when opened?



(a)



(b)



(c)



(d)



NRA-CET Ready

SSC

Useful for CGL, CHSL & others

TEST PACK

Bilingual (with eBooks)

Unlimited Validity*

Directions (21-22): In the following question, select the related letter/number from the given alternatives.

Q21. ABCD : HGFE :: JKLM : ?

- (a) NMOP
- (b) QPNO
- (c) QMPO
- (d) QPON

Q22. 5 : 27 :: 9 : ?

- (a) 28
- (b) 85
- (c) 83
- (d) 84

Q23. In the following question, select the odd word/number pair from the given alternatives.

- (a) Dog : Puppy
- (b) Horse : Mare
- (c) Sheep : Lamb
- (d) Cow : Calf

Q24. In the following question, select the odd word/number pair from the given alternatives.

- (a) 11 - 44
- (b) 8 - 34
- (c) 6 - 18
- (d) 12 - 72

Directions (25-26): A series is given with one term missing. Select the correct alternative from the given ones that will complete the series.

Q25. R, M, I, F, D, ?

- (a) X
- (b) R
- (c) C
- (d) D

Q26. 2, 6, 12, 20, 30, 42, ?

- (a) 48
- (b) 56
- (c) 52
- (d) 64

Q27. The ratio of age of Anshu and his father is 1:4. 3 years ago the ratio was 1:7 then find the age of Anshu's father ?

- (a) 24
- (b) 30
- (c) 32
- (d) 36

Q28. In a certain code language, "ABE" is written as "8". How is "ILO" written in that code language?

- (a) 56
- (b) 29
- (c) 36
- (d) 72

Q29. In each of the following question below are given some statements followed by some conclusions. Taking the given statements to be true even if they seem to be at variance from commonly known facts, read all the conclusions and then decide which of the given conclusion logically follows the given statements.

Statements:

- I.** All pens are pencils.
- II.** No pencil is eraser.
- III.** Some cups are erasers.

Conclusions:

- I.** Some cups are not pencils.
- II.** Some cups are not pens.
- III.** Some pencils are not cups.
- IV.** No pen is eraser.

- (a) Only conclusion (I), (II) and (III) follow
- (b) Only conclusion (II) and (IV) follow
- (c) Only conclusion (I), (II) and (IV) follow
- (d) All conclusions follow



Q30. find the number which share the same relation as relation shared by the given number

(4,11,30)

(a) (6, 37, 217)

(b) (5,18,67)

(c) (7,15,23)

(d) 1,2,3

TEST SERIES
Bilingual



SSC CGL TIER-II

PRIME

59 Total Tests | eBooks

