

Reasoning Mega Quiz for SSC

Q1. In the following question, select the related number from the given alternatives.

49 : 169 :: 66 : ?

- (a) 126
- (b) 132
- (c) 144
- (d) 162

Q2. In the following question, select the odd letter pair from the given alternatives.

- (a) BN - P
- (b) GI - R
- (c) LM - Y
- (d) TA - U

Q3. From the given answer figures, select the one in which the question figure is hidden/embedded.



(a)



(b)



(c)



(d)



12 Months Validity

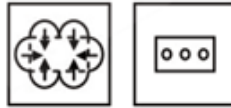
SSC CHSL

KA MAHA PACK

Live Class, Video Course,
Test Series, eBooks

Bilingual (with eBooks)

Q4. A piece of paper is folded and punched as shown below in the question figures. From the given answer figure, indicate how it will appear when opened?



(a)



(b)



(c)



(d)



Q5. A series is given with one term missing. Select the correct alternative from the given ones that will complete the series.

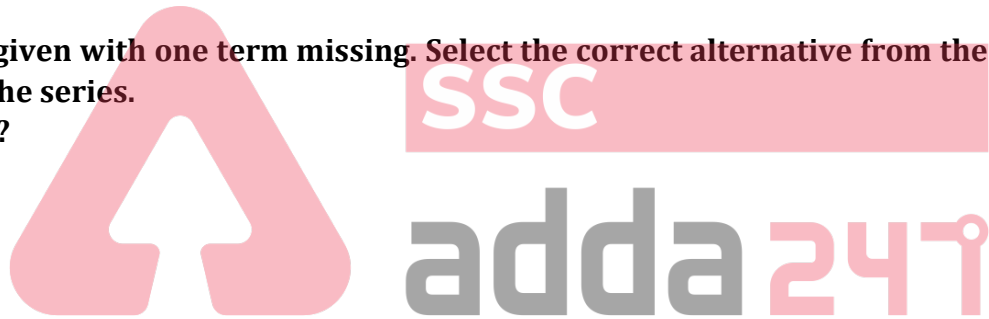
ACE, FHJ, KMO, ?

(a) QRS

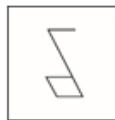
(b) PRT

(c) PRU

(d) QRV



Q6. From the given answer figures, select the one in which the question figure is hidden/embedded.



(a)



(b)



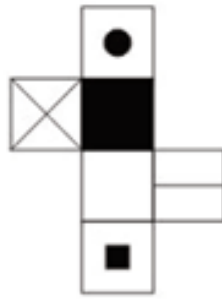
(c)



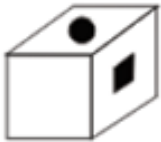
(d)



Q7. From the given options, which figure can be formed by folding the figure given in the question?



(a)



(b)



(c)



(d)



Q8. In the following question, select the odd letter from the given alternatives.

- (a) M
- (b) E
- (c) S
- (d) W

Q9. In the following question, select the related number from the given alternatives.

AKP : 1121256 :: LNO : ?

- (a) 196125144
- (b) 144196225
- (c) 144225196
- (d) 41521196

Bilingual

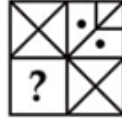
SSC CHSL

PRIME

265+ Total Tests

2020-21 Online Tests

Q10. Which answer figure will complete the pattern in the question figure?



(a)



(b)



(c)



(d)



Q11. Find out the odd word/letters/number/number pair from the given alternatives.

- (a) 5306
- (b) 2147
- (c) 4205
- (d) 4308



Q12. A series is given with one term missing. Choose the correct alternative from the given ones that will complete the series.

Inch, Decameter, Foot, ?

- (a) Decimeter
- (b) Millimeter
- (c) Centimeter
- (d) Meter

Q13. A series is given with one term missing. Choose the correct alternative from the given ones that will complete the series.

5, 8, 12, 17, 23, ?

- (a) 30
- (b) 72
- (c) 65
- (d) 48

Q14. In this question, two statements are given each followed by two conclusions I and II. You have to consider the statements to be true even if they seem to be at variance from commonly known facts. You have to decide which of the given conclusions, if any, follows from the given statements.

Statement:

- (I) Some authors are teachers.
- (II) No teacher is a lady.

Conclusions:

- (I) Some teachers are not ladies.
- (II) Some ladies are teachers.
- (a) Conclusion I follows
- (b) Conclusion II follows
- (c) Neither I nor II follows
- (d) Both I and II follows

Q15. A series is given with one term missing. Choose the correct alternative from the given ones that will complete the series.

AN, EQ, IT, MW, ?

- (a) QZ
- (b) KX
- (c) IV
- (d) ZM

Q16. A series is given with one term missing. Choose the correct alternative from the given ones that will complete the series.

PRQ, UWV, ZBA, ? , JLK

- (a) FHG
- (b) EGF
- (c) DFE
- (d) FGE

Q17. Chandan is 2 years older than Ankit but 1 year younger than Sumit. Ankit is twice as old as Khushboo. If Khushboo's age is 25 years, what is the age (in years) of Sumit?

- (a) 51
- (b) 53
- (c) 52
- (d) 55

Q18. Arrange the given words in the sequence in which they occur in the dictionary.

- i. Yielded
- ii. Yelp
- iii. Yeast
- iv. Yogurt
- (a) ii, iii, iv, i
- (b) iii, ii, i, iv
- (c) iv, i, ii, iii
- (d) i, ii, iii, iv



Q19. In a certain code language, "MATERIAL" is written as "RIALMATE". How is "REMEMBER" written in that code language?

- (a) REMEREBM
- (b) MBEREMER
- (c) MBERREME
- (d) MBERREEM

Q20. In the following question, select the missing number from the given series.

5	8	32
9	6	48
7	9	?

- (a) 45
- (b) 48
- (c) 54
- (d) 64

Q21. In the following question, select the odd word from the given alternatives.

- (a) Walls
- (b) Doors
- (c) Floor
- (d) Foundation

Q22. In the following question, select the odd letters from the given alternatives.

- (a) DU
- (b) KP
- (c) JQ
- (d) GT

Q23. A series is given with one term missing. Select the correct alternative from the given ones that will complete the series.

BD, CE, DF, EG, ?

- (a) FG
- (b) DH
- (c) FH
- (d) EH

Q24. Raman remembers that the examination is after 15th May but before 18th May, while Deep remembers that the examination is before 21st May but after 16th May. On which date of May is the examination?

- (a) 17
- (b) 18
- (c) 19
- (d) 20

Q25. Pointing to a lady in the photograph Amit said, " She is the mother of the only grandson of my mother ". How is the lady related to Amit?

- (a) Mother
- (b) Daughter
- (c) Niece
- (d) Wife

Q26. In the following question, select the word which cannot be formed using the letters of the given word.

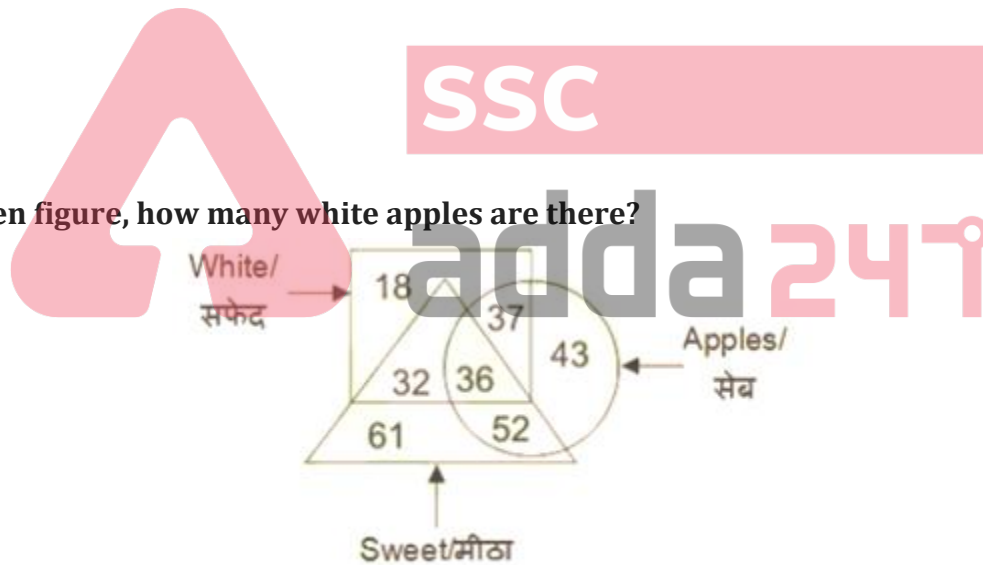
CARBONATE

- (a) CARBON
- (b) BORN
- (c) EARN
- (d) BOSE

Q27. If 6 A 11 B 33 = 18 and 4 A 9 B 18 = 8, then 3 A 5 B 35 = ?

- (a) 12
- (b) 25
- (c) 21
- (d) 18

Q28. In the given figure, how many white apples are there?



- (a) 37
- (b) 73
- (c) 36
- (d) 88

Q29. Select the related word/letters/numbers from the given alternatives.

Peacock : India :: Bear : ?

- (a) Australia
- (b) America
- (c) England
- (d) Russia

Q30. Among four books, Book1 is twice as heavy as Book 2. Book 3's weight is half of Book 2's weight. Book 4 is 60 grams more as compared to Book 2 but 60 grams less as compared Book 1. Which book is heaviest?

- (a) Book 1
- (b) Book 2
- (c) Book 3
- (d) Book 4

NRA-CET Ready

SSC

Useful for CGL, CHSL & others

TEST PACK

Bilingual (with eBooks)
12 Months Validity*

