

Reasoning Mega Quiz for SSC Tier-1

Q1. If 39574 is written as XPLMD, and 0826 as TBNQ, then DBMTX will be coded as

- (a) 48730
- (b) 48603
- (c) 48703
- (d) 48743

Q2. Interchanging which two signs will make the following equation corrects?

$$15+3\times 9-4\div 16 = 57$$

- (a) - and +
- (b) - and \div
- (c) - and \times
- (d) + and \div

Q3. An assertion and a reason are given below.

Assertion: India is a Sovereign country.

Reason: its parliament is placed in Delhi.

Choose the answer.

- (a) Both Assertion and Reason are true and Reason is the correct explanation of Assertion.
- (b) Both Assertion and Reason are true but Reason is not the correct explanation of Assertion.
- (c) Both Assertion and Reason are false.
- (d) Assertion is true but Reason is false.

Q4. Below are given statements followed by some conclusions. You have to take the given statements to the true even if they seem to be at variance with the commonly known facts and then decide which of the given conclusions logically follow(S) from the given statements

Statement:

Domestic demand has been increasing faster than the production of indigenous crude oil.

Conclusions:

I. Crude oil must be imported.

II. Domestic demand must be reduced.

- (a) Only conclusion I follows.
- (b) Only conclusion II follows.
- (c) Neither I nor II follows.
- (d) Both I and II follow.



NRA-CET Ready

SSC

MAHA PACK

Live Class, Video Course,
Test Series, eBooks

Bilingual (with eBooks)

12 Months Validity

Q5. Sharad introduced Meena as his son's paternal grandfather's only sister. How is Meena related to Sharad?

- (a) Mother
- (b) Sister
- (c) Paternal Aunt
- (d) Daughter

Q6. If TRACTER = 14 and TROLLEY = 14, the SCOOTER=

- (a) 24
- (b) 14
- (c) 28
- (d) 30

Q7. Choose the pair which is related in the same way as the words in the first pair from the given choices.

LUNG : MAN :: GILL : _____

- (a) FISH
- (b) COW
- (c) PEACOCK
- (d) BIRD

Q8. If "÷" denotes "multiplication", "-" denotes "addition", "+" denotes "division" and "×" denotes "subtraction", then which of the following is the value of the expression

19 ÷ 9 × 51 - 171 + 19

- (a) 143
- (b) 129
- (c) 179
- (d) 151

Q9. If "-" and "×" signs as well as "7" and "3" are interchanged, then which of the one following is correct?

- (a) $20 \times 1 - 7 = 3$
- (b) $1 \times 20 - 7 = 20$
- (c) $3 - 7 \times 1 = 20$
- (d) $20 - 3 \times 1 = 7$

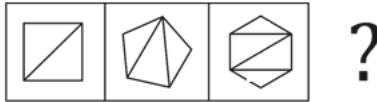
Q10. From the given series of jumbled letters separate the names of flower and tree and select from the given choices the first letter of the name of flower and tree "saltoteuk"

- (a) SR
- (b) RE
- (c) LK
- (d) LT

Q11. Three of the following four letter-clusters are alike in a certain way and one is different. Find the odd one out.

- (a) XAZC
- (b) PRRT
- (c) CDDE
- (d) LMNO

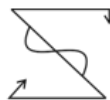
Q12. Find the figure that will come next in the following figure series.



- (a)
- (b)
- (c)
- (d)



Q13. Select the mirror image of the figure when mirror is placed on the top of the figure.



- (a)
- (b)
- (c)
- (d)

Q14. Select the word pair in which the two words are related in the same ways as are the two words in the following.

Vision: Blindness.

- (a) Cholera : Epidemic
- (b) Old age : Senility
- (c) Deaf : hear
- (d) Audition : Hearing.

Q15. Ram's school bus was facing north - west when it reaches his school. After starting from his house the took one left turn, one Right turn another left turn to reach. If bus pick up Ram and starting towards East direction then in which direction bus facing to reach school.

- (a) South-east
- (b) North-east
- (c) North.
- (d) South

Q16. Which letter-cluster will replace the question mark (?) in the following series?

AZC, DXF, GUI, _?_, MLO

- (a) KQM
- (b) JQL
- (c) KPN
- (d) JRL



Q17. Three of the following four words are alike in a certain way and one is different. Find the odd one out.

- (a) Iron Box
- (b) Mixer Grinder
- (c) Computer
- (d) Gas Stove

Q18. Select the correct alternative to indicate the arrangement of the following words in a logical order and meaningful order.

- (1) State
- (2) District
- (3) City
- (4) Continent
- (5) Country
- (a) 5, 4, 3, 2, 1
- (b) 4, 5, 1, 2, 3
- (c) 4, 5, 1, 3, 1
- (d) 4, 5, 2, 3, 1

Q19. If CAD = 4 and BUS = 4

Then TRAIN =?

- (a) 4
- (b) 5
- (c) 6
- (d) 7

Q20. Which number will replace the question mark (?) in the following series?

8, 11, 17, 20, 26, _?_

- (a) 29
- (b) 32
- (c) 35
- (d) 27

Q21. Select the Venn diagram that best illustrates the relationship between the following classes.

Nurses, Doctors, Pharmacists

(a)



(b)



(c)



(d)



Q22. In a code language, CONSULTANCY is written as QOJKYOUYJWP. How will MASTERMINDS be written as in that language?

- (a) APOWIIOZJEI
- (b) APOWHIOZJEI
- (c) APOWIHOZJEI
- (d) APOWJIOZJEI



SSC
adda247

Bilingual



SSC CHSL
PRIME

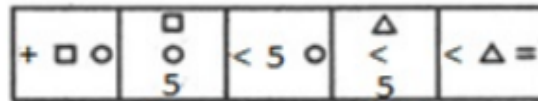
265+ Total Tests

2020-21 Online Tests

Q23. Ranga got thrice as many sums wrong as he got right in a mathematics assignment. If he attempted 72 sums in all, how many did he solve correctly in his mathematics assignment?

- (a) 16
- (b) 20
- (c) 14
- (d) 18

Q24. Select the figure that will come next in the following figure series.



- (a)
- (b)
- (c)
- (d)



Q25. If 'FORTUNE' is coded as '6521347' and 'PREY' is coded as '8279' then how will 'NEPTUNE' be coded as?

- (a) 4781347
- (b) 4781342
- (c) 4782347
- (d) 4781343

Q26. Select the option that is related to the third letter-cluster in the same way as the second letter-cluster is related to the first letter-cluster.

BANK: WXLJ :: IDOL: _____

- (a) _DAKM
- (b) ADMK
- (c) DAMJ
- (d) DAMK

