

Multi Tasking (Non-Technical) Staff Examination 2019

Roll No.	WWW.QMATHS.IN
	WWW.QMATHS.IN
Name	
Test Venue	Royal Solutions Online Examination Center
Test Time	9:00 AM - 10:30 AM
Test Date	05/08/2019



Section : General English

Q.1 Select the most appropriate option to fill in the blank.
The students are in great _____ of their teachers.

- Ans
- ☒ 1. praise
 - ☒ 2. awe
 - ☒ 3. respect
 - ☒ 4. gusto

Question ID : 239087104
Status : Not Answered
Chosen Option : --

Q.2 Find the part of the given sentence that has an error in it. If there is no error, choose 'No error'.
The servant was beaten through his master with a stick. /No error

- Ans
- ☒ 1. No error
 - ☒ 2. with a stick
 - ☒ 3. through his master
 - ☒ 4. The servant was beaten

Question ID : 23908780
Status : Answered
Chosen Option : 2

Q.3 Select the most appropriate option to substitute the underlined segment in the given sentence. If there is no need to substitute it, select No Improvement.
Many accidents at the factory are caused of workers who don't read warning signs.

- Ans
- ☒ 1. are caused because of
 - ☒ 2. is the cause of
 - ☒ 3. is caused by
 - ☒ 4. No Improvement

Question ID : 23908782
Status : Answered
Chosen Option : 1

Q.4 Select the most appropriate option to fill in the blank.
The origin of ice-cream dates back _____ nearly half-a-century.

- Ans
- ☒ 1. to
 - ☒ 2. at

Very Important For
SSC CGL 2019

Question ID : 23908786

Status : Answered

Chosen Option : 1

Q.5 In the following question, out of the given four alternatives, select the alternative which best expresses the meaning of the Idiom/Phrase.

Birds of the same feather

- Ans
- ☒ 1. People with a generous heart
 - ☒ 2. To get into trouble together
 - ☒ 3. To be in a totally helpless condition
 - ☒ 4. People with similar character

Question ID : 23908798

Status : Answered

Chosen Option : 4

Q.6 Select the most appropriate option to substitute the underlined segment in the given sentence. If there is no need to substitute it, select No Improvement.
For her, money is only the means to an end.

- Ans
- ☒ 1. the means for an end
 - ☒ 2. means to end
 - ☒ 3. No Improvement
 - ☒ 4. a means to the end

Question ID : 23908783

Status : Answered

Chosen Option : 2

Q.7 Select the most appropriate antonym of the given word.
Gloomy

- Ans
- ☒ 1. Cloudy
 - ☒ 2. Bright
 - ☒ 3. Dull
 - ☒ 4. Greedy

Question ID : 23908795

Status : Answered

Chosen Option : 3

Q.8 Select the most appropriate option to substitute the underlined segment in the given sentence. If there is no need to substitute it, select No Improvement.
The wound on her hand is now heal completely.

- Ans
- ☒ 1. has now healing
 - ☒ 2. No Improvement
 - ☒ 3. is now healed
 - ☒ 4. is healing now

Question ID : 23908784

Status : Answered
Chosen Option : 3

Q.9 Select the most appropriate synonym of the given word.
Immense

- Ans
- ☒ 1. Insignificant
 - ☒ 2. Dull
 - ☒ 3. Minute
 - ☒ 4. Massive

Question ID : 23908793
Status : Answered
Chosen Option : 4

Q.10 Find the part of the given sentence that has an error in it. If there is no error, choose 'No error'.
Unless you prepare well, you will not get a first class. /No error

- Ans
- ☒ 1. No error
 - ☒ 2. a first class
 - ☒ 3. Unless you prepare well
 - ☒ 4. you will not get

Question ID : 23908781
Status : Answered
Chosen Option : 4

Q.11 Choose the word that can substitute the given sentence.
An internal or external framework of bones

- Ans
- ☒ 1. Spine
 - ☒ 2. Skull
 - ☒ 3. Skeleton
 - ☒ 4. Skin

Question ID : 23908799
Status : Answered
Chosen Option : 3

Q.12 Choose the word that can substitute the given sentence.
An area of grassland where animals graze

- Ans
- ☒ 1. Forest
 - ☒ 2. Park
 - ☒ 3. Meadow
 - ☒ 4. Garden

Question ID : 239087100
Status : Answered
Chosen Option : 3

Q.13 Find the part of the given sentence that has an error in it. If there is no error, choose 'No error'.
The child always goes for sleep with his teddy bear. /No error

Ans

☒ 1. with his teddy bear

☒ 2. goes for sleep

☒ 3. No error

☒ 4. The child always

Very Important For
SSC CGL 2019

Question ID : 23908779

Status : Answered

Chosen Option : 2

Q.14 Choose the correctly spelt word.

Ans ☒ 1. Exhausted

☒ 2. Intelligent

☒ 3. Equally

☒ 4. Amigrate

Question ID : 239087102

Status : Answered

Chosen Option : 2

Q.15 In the following question, out of the given four alternatives, select the alternative which best expresses the meaning of the Idiom/Phrase.

Cat's whiskers

Ans ☒ 1. A very easy matter

☒ 2. To be highly impressive

☒ 3. To be very determined

☒ 4. Difficult to understand

Question ID : 23908797

Status : Answered

Chosen Option : 1

Q.16 Select the most appropriate option to fill in the blank.

I _____ very busy lately.

Ans ☒ 1. would be

☒ 2. have been

☒ 3. will be

☒ 4. should be

Question ID : 23908785

Status : Answered

Chosen Option : 2

Comprehension:

In the following passage some words have been deleted. Fill in the blanks with the help of the alternatives given. Select the most appropriate option for each blank.

Mr. Oliver was taking a shortcut 1. _____ the pine forest which was making sad, 2. _____ sounds because of strong winds. He 3. _____ a lonely boy sitting on a rock. 4. _____ boy was weeping soundlessly. There seemed to be 5. _____ terribly wrong with the boy.

SubQuestion No : 17

Q.17 Select the most appropriate option for blank No. 1.

Ans

☒ 1. through

☐ 2. by

☐ 3. along

☐ 4. of

Very Important For
SSC CGL 2019

Question ID : 23908788

Status : Answered

Chosen Option : 1

Comprehension:

In the following passage some words have been deleted. Fill in the blanks with the help of the alternatives given. Select the most appropriate option for each blank.

Mr. Oliver was taking a shortcut 1.____ the pine forest which was making sad, 2.____ sounds because of strong winds. He 3.____ a lonely boy sitting on a rock. 4.____ boy was weeping soundlessly. There seemed to be 5.____ terribly wrong with the boy.

SubQuestion No : 18

Q.18 Select the most appropriate option for blank No. 2.

Ans ☐ 1. awesome

☒ 2. eerie

☐ 3. banging

☐ 4. aloud

Question ID : 23908789

Status : Answered

Chosen Option : 4

Comprehension:

In the following passage some words have been deleted. Fill in the blanks with the help of the alternatives given. Select the most appropriate option for each blank.

Mr. Oliver was taking a shortcut 1.____ the pine forest which was making sad, 2.____ sounds because of strong winds. He 3.____ a lonely boy sitting on a rock. 4.____ boy was weeping soundlessly. There seemed to be 5.____ terribly wrong with the boy.

SubQuestion No : 19

Q.19 Select the most appropriate option for blank No. 3.

Ans ☐ 1. recorded

☒ 2. noticed

☐ 3. pointed

☐ 4. remarked

Question ID : 23908790

Status : Answered

Chosen Option : 2

Comprehension:

In the following passage some words have been deleted. Fill in the blanks with the help of the alternatives given. Select the most appropriate option for each blank.

Mr. Oliver was taking a shortcut 1.____ the pine forest which was making sad, 2.____ sounds because of strong winds. He 3.____ a lonely boy sitting on a rock. 4.____ boy was weeping soundlessly. There seemed to be 5.____ terribly wrong with the boy.

SubQuestion No : 20

Q.20 Select the most appropriate option for blank No. 4.

Ans

Visit <http://mocks.qmaths.in> for Best MOCKS of SSC, RAILWAYS and BANK Exams.

☒ 1. One

☒ 2. Each

☒ 3. A

☒ 4. The

Very Important For
SSC CGL 2019

Question ID : 23908791

Status : Answered

Chosen Option : 4

Comprehension:

In the following passage some words have been deleted. Fill in the blanks with the help of the alternatives given. Select the most appropriate option for each blank.

Mr. Oliver was taking a shortcut 1.____ the pine forest which was making sad, 2.____ sounds because of strong winds. He 3.____ a lonely boy sitting on a rock. 4.____ boy was weeping soundlessly. There seemed to be 5.____ terribly wrong with the boy.

SubQuestion No : 21

Q.21 Select the most appropriate option for blank No. 5.

Ans

☒ 1. anything

☒ 2. nothing

☒ 3. everything

☒ 4. something

Question ID : 23908792

Status : Answered

Chosen Option : 4

Q.22 Select the most appropriate synonym of the given word.

Former

Ans

☒ 1. Inferior

☒ 2. Superior

☒ 3. Regular

☒ 4. Previous

Updated till July 2019

Question ID : 23908794

Status : Answered

Chosen Option : 4

Q.23 Select the most appropriate antonym of the given word.

Impartial

Ans

☒ 1. Biased

☒ 2. Judicious

☒ 3. Involved

☒ 4. Impractical

Question ID : 23908796

Status : Answered

Chosen Option : 1

Q.24 Choose the correctly spelt word.

Ans

☒ 1. Genuine

☒ 2. Genuine

☒ 3. Ganuine

☒ 4. Jenuine

Very Important For
SSC CGL 2019

Question ID : 239087101

Status : Answered

Chosen Option : 1

Q.25 Select the most appropriate option to fill in the blank.
Sarthak _____ everything that a leader should be.

Ans ☒ 1. epitomizes

☒ 2. adores

☒ 3. worships

☒ 4. clones

Question ID : 239087103

Status : Answered

Chosen Option : 1

Section : General Intelligence & Reasoning

Q.1 Select the option that is related to the third term in the same way as the second term is related to the first term.

Salary : Job :: Profit : ?

Ans ☒ 1. Loss

☒ 2. Business

☒ 3. Huge

☒ 4. Seller

Question ID : 239087332

Status : Answered

Chosen Option : 2

Q.2 Five boys, G, K, P, R and T, are sitting around a circular table facing towards the centre (not necessarily in the same order). R is third to the left of K. P and G are the immediate neighbours of K. T is to the immediate left of P. Who is sitting second to the right of P?

Ans ☒ 1. G

☒ 2. K

☒ 3. T

☒ 4. R

Question ID : 239087340

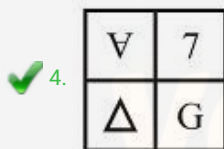
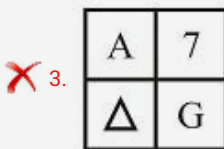
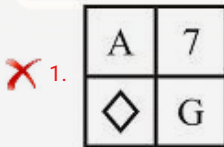
Status : Answered

Chosen Option : 1

Q.3



Ans



Question ID : 239087350

Status : Answered

Chosen Option : 4

Q.4 Read the given statements and conclusions carefully. Assuming that the information given in the statements is true, even if it appears to be at variance with commonly known facts, decide which of the given conclusions logically follow(s) from the statements.

Statements:

I. No A is B.

II. All C are B.

Conclusions:

I. No C is A.

II. Some A are C.

Ans

✓ 1. Only conclusion I follows.

✗ 2. Both conclusions I and II follow.

✗ 3. None of the conclusions follows.

✗ 4. Only conclusion II follows.

Question ID : 239087342

Status : Answered

Chosen Option : 1

Q.5 In a certain code language, 'MANGO' is written as '93425' and 'GREAT' is written as '28631'. What will be the code for 'GREEN' in that code language?

Ans

✓ 1. 28664

✗ 2. 28994

Very Important For
SSC CGL 2019

Question ID : 239087338
Status : Answered
Chosen Option : 1

Q.6 Select the option that is related to the third term in the same way as the second term is related to the first term.

Water : Drink :: Bread : ?

- Ans
- ☒ 1. Hard
 - ☒ 2. Eat
 - ☒ 3. Milk
 - ☒ 4. White

Question ID : 239087333
Status : Answered
Chosen Option : 2

Q.7 Select the correct mirror image of the given figure when the mirror is placed at line AB.



Ans

- ☒ 1.
- ☒ 2.
- ☒ 3.
- ☒ 4.

Question ID : 239087353
Status : Answered
Chosen Option : 4

Q.8 Study the given pattern carefully and select the number that can replace the question mark (?) in it.

7 7 1 48
11 5 1 ?
9 5 0 45

- Ans
- ☒ 1. 36
 - ☒ 2. 72
 - ☒ 3. 48
 - ☒ 4. 54

Question ID : 239087347

Status : Answered

Chosen Option : 4

Q.9 Select the option that is related to the third number in the same way as the second number is related to the first number.

325 : 18 :: 226 : ?

- Ans
- ☒ 1. 14
 - ☒ 2. 17
 - ☒ 3. 15
 - ☒ 4. 16

Question ID : 239087346

Status : Answered

Chosen Option : 3

Q.10 Read the given statements and conclusions carefully. Assuming that the information given in the statements is true, even if it appears to be at variance with commonly known facts, decide which of the given conclusions logically follow(s) from the statements.

Statements:

- I. Some red are cars.
- II. All yellow are cars.

Conclusions:

- I. Some cars are red.
- II. Some yellow are red.
- III. Some cars are yellow.

- Ans
- ☒ 1. Both conclusions I and II follow.
 - ☒ 2. Both conclusions I and III follow.
 - ☒ 3. Both conclusions II and III follow.
 - ☒ 4. Only conclusion II follows.

Question ID : 239087343

Status : Answered

Chosen Option : 2

Q.11 Select the option in which the given figure is embedded.



Ans

✗ 1.




✗ 2.



✗ 3.



✓ 4.



Question ID : 239087352

Status : Answered

Chosen Option : 2

Q.12 Select the number that can replace the question mark (?) in the following series.

13, 17, 19, 23, 29, ?

Ans ✗ 1. 41

✗ 2. 43

✗ 3. 37

✓ 4. 31

Question ID : 239087344

Status : Not Answered

Chosen Option : --

Q.13 In a certain code language, 'CAP' is written as '20' and 'ROM' is written as '46'. What will be the code for 'RUB' in that code language?

Ans ✗ 1. 47

✓ 2. 41

✗ 3. 53

✗ 4. 51

Question ID : 239087337

Status : Answered

Chosen Option : 2

Q.14 In a certain code language, 'RIMPY' is written as 'OFJMV'. What will be the code for 'CORPSE' in that code language?

Ans

Visit <http://mocks.qmaths.in> for Best MOCKS of SSC, RAILWAYS and BANK Exams.

✓ 2. ZLOMPB

✗ 3. ZLONPB

✗ 4. AMPNQC

Very Important For
SSC CGL 2019

Question ID : 239087336

Status : Answered

Chosen Option : 2

Q.15 Study the given pattern carefully and select the figure that will complete the pattern given in the question figure.



Ans



Question ID : 239087351

Status : Answered

Chosen Option : 1

Q.16 In a certain code language, 'COMFORTS' is written as 'FJPARMWN'. What will be the code for 'HINDWARE' in that code language?

Ans ✗ 1. KDRYZVUZ

✗ 2. LERZAWVA

✓ 3. KDQYZVUZ

✗ 4. MFSABXWB

Question ID : 239087335

Status : Answered

Chosen Option : 3

Q.17 Identify the Venn diagram that best represents the relationship between the given classes.

Venus, Planet, Sun

Ans



✗ 3.



✗ 4.



Very Important For
SSC 2019

Question ID : 239087355

Status : Answered

Chosen Option : 2

Q.18 Which two signs need to be interchanged to make the following equation correct?

$$7 - 9 \times 3 \div 9 + 5 = 5$$

Ans

✗ 1. - and ×

✗ 2. ÷ and ×

✓ 3. + and -

✗ 4. + and ÷

Question ID : 239087349

Status : Answered

Chosen Option : 3

Q.19 Select the numbers that can replace the question marks (?) in the following series.

36, 49, 51, 39, 53, 54, 42, 57, 57, 45, ?, ?

Ans

✗ 1. 71, 60

✗ 2. 60, 63

✗ 3. 60, 61

✓ 4. 61, 60

Question ID : 239087345

Status : Answered

Chosen Option : 4

Q.20 Select the option that is related to the third letter-pair in the same way as the second letter-pair is related to the first letter-pair.

RG : QE :: LB : ?

Ans

✗ 1. KY

✓ 2. KZ

✗ 3. JZ

✗ 4. JY

Question ID : 239087334

Status : Answered

Chosen Option : 2

Q.21 Five phones, H, M, R, T and V, are kept one above the other (not necessarily in the same order). The number of phones above T is same as the number of phones below V. R is just above H. V is at the bottom. There are two phones between M and V. Which of the following phones are above R?

Ans

✓ 1. M and T

2. H and I

3. M and V

4. M and H

Very Important For
SSC CGL 2019

Question ID : 239087341

Status : Answered

Chosen Option : 1

Q.22 Six tables labelled C, D, L, N, P and X are placed in a row facing towards the south (not necessarily in the same order). D is placed second to the left of L. X is placed second to the right of P. N is placed third to the left of D. How many tables are placed between C and X?

Ans

1. 3

2. 1

3. 2

4. 4

Question ID : 239087339

Status : Answered

Chosen Option : 3

Q.23 Select the letter-cluster that can replace the question mark (?) in the following series.

MRT, TYA, AFH, HMO, ?

Ans

1. PUV

2. PUU

3. OTV

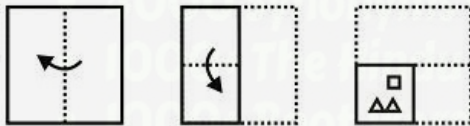
4. OTU

Question ID : 239087331

Status : Answered

Chosen Option : 3

Q.24 A paper is folded and cut as shown below. How will it appear when unfolded?



Ans



3.



4.



Question ID : 239087354

Status : Answered

Chosen Option : 1

Q.25 Which two numbers need to be interchanged to make the following equation correct?

$$3 + 4 - 6 \div 2 = 7$$

Ans

1. 6 and 2

2. 3 and 6

3. 2 and 3

4. 6 and 4

Question ID : 239087348

Status : Answered

Chosen Option : 4

Section : Numerical Aptitude

Q.1 Marked price and cost price of an article are in ratio 5 : 4. If the profit earned by selling the article is 12.5%, then what is the discount percentage?

Ans

1. 12.5

2. 15

3. 8

4. 10

Question ID : 239087461

Status : Answered

Chosen Option : 2

Q.2 The length, breadth and height of a cuboid are 5 cm, 2 cm and 4 cm respectively. What is the total surface area of the cuboid?

Ans

1. 84 cm^2

2. 152 cm^2

3. 38 cm^2

4. 76 cm^2

Question ID : 239087477

Status : Answered

Chosen Option : 4

Q.3

Visit <http://mocks.gmaths.in> for Best MOCKS of SSC, RAILWAYS and BANK Exams.

A train leaves P at 9 am with speed of 50 km/hr. Another train leaves Q at 11 am with speed of 45 km/hr. The trains are travelling towards each other on parallel tracks. Distance between P and Q is 300 km. When they meet, what is the ratio of the distances covered by them?

- Ans
- ☒ 1. 8 : 5
 - ☒ 2. 13 : 12
 - ☐ 3. 17 : 14
 - ☐ 4. 11 : 9

Question ID : 239087474
Status : Answered
Chosen Option : 1

Q.4 70 sticks each of unit length are combined to form a right angle triangle without breaking any stick. What is the area (in square units) of the triangle?

- Ans
- ☒ 1. 210
 - ☐ 2. 180
 - ☐ 3. 240
 - ☐ 4. 350

Question ID : 239087475
Status : Answered
Chosen Option : 2

Q.5 A, B and C, working alone can do a piece of work in 15, 30 and 75 days respectively. They work together and get ₹1615 for completing the work. What is the difference in shares of A and C?

- Ans
- ☒ 1. ₹760
 - ☐ 2. ₹620
 - ☐ 3. ₹680
 - ☐ 4. ₹540

Question ID : 239087472
Status : Answered
Chosen Option : 2

Q.6 What is the value of $90 \times 3 \div 9 + 4 \div 2 \times 3$ of $4 \times 8 \div (18 \times 2 - 4)$?

- Ans
- ☐ 1. 48
 - ☐ 2. 40
 - ☒ 3. 36
 - ☐ 4. 42

Question ID : 239087457
Status : Not Answered
Chosen Option : --

Q.7 The ratio of milk and water in a mixture is 4 : 3. If we add 2 litres of water, the ratio of milk and water becomes 8 : 7. What is the quantity of the final mixture?

- Ans
- ☐ 1. 18 litres
 - ☒ 2. 30 litres
 - ☐ 3. 24 litres

Very Important For

Question ID : 239087468

Status : Not Answered

Chosen Option : --

Q.8 What is the largest two digit number which when divided by 6 and 5 leaves remainder 1 in each case?

Ans ☒ 1. 61

☒ 2. 93

☒ 3. 91

☒ 4. 97

Question ID : 239087456

Status : Not Answered

Chosen Option : --

Q.9 The average age of 12 boys is 15 years and the average age of 18 girls is 12 years. What is the combined average age of the boys and girls, taken together?

Ans ☒ 1. 15.4

☒ 2. 13.2

☒ 3. 16.6

☒ 4. 14.8

Question ID : 239087460

Status : Not Answered

Chosen Option : --

Q.10 The Table given below presents the marks obtained by three students in five examinations.

Exams	S1	S2	S3
E1	80	84	85
E2	72	91	99
E3	99	80	82
E4	96	95	93
E5	87	86	84

The marks obtained by S1 in Exam E5 is how much percentage (correct up to two places of decimal) more than that obtained by S2 in Exam E3?

Ans ☒ 1. 9.75

☒ 2. 8.75

☒ 3. 9.26

☒ 4. 10.24

Question ID : 239087479

Status : Not Answered

Chosen Option : --

Q.11

Age
(Years)

Number
of
children

6	17
7	16
8	16
9	17
10	19
11	15

What is the difference between the mean and mode of the ages?

Ans

- ✓ 1. 1.5
 ✗ 2. 1
 ✗ 3. 2.5
 ✗ 4. 2

Question ID : 239087462

Status : Not Answered

Chosen Option : --

Q.12 The Table given below presents the marks obtained by three students in five examinations.

Exams	S1	S2	S3
E1	80	84	85
E2	72	91	99
E3	99	80	82
E4	96	95	93
E5	87	86	84

What is the average of marks obtained by S3 per exam?

Ans

- ✗ 1. 84.6
 ✓ 2. 88.6
 ✗ 3. 82.6
 ✗ 4. 86.6

Question ID : 239087478

Status : Not Answered

Chosen Option : --

Q.13 An article is sold at $14\frac{2}{7}\%$ profit. What is the ratio of the selling price to the cost price?

- Ans
- ☒ 1. 7 : 5
 - ☒ 2. 8 : 7
 - ☒ 3. 8 : 5
 - ☒ 4. 7 : 6

Question ID : 239087465

Status : Answered

Chosen Option : 2

Q.14 An article is sold for ₹6500 so as to earn a profit of 4%. A second article whose cost price is ₹3750, is sold at a loss of 4%. What is the overall gain or loss percent in the whole transaction?

- Ans
- ☒ 1. Gain 4%
 - ☒ 2. Loss 1%
 - ☒ 3. Loss 4%
 - ☒ 4. Gain 1%

Question ID : 239087464

Status : Not Answered

Chosen Option : --

Q.15 The diameter of a right circular cylinder is decreased to one third of its initial value. If the volume of the cylinder remains the same, then the height becomes how many times of the initial height?

- Ans
- ☒ 1. 1
 - ☒ 2. 9
 - ☒ 3. 6
 - ☒ 4. 3

Question ID : 239087476

Status : Not Answered

Chosen Option : --

Q.16 The Table given below presents the marks obtained by three students in five examinations.

Exams	S1	S2	S3
E1	80	84	85
E2	72	91	99
E3	99	80	82
E4	96	95	93
E5	87	86	84

What is the sum of marks obtained by S1 in Exam E4, S2 in Exam E1, S3 in Exam E3 and E5?

- Ans
- ☒ 1. 346
 - ☒ 2. 326
 - ☒ 3. 366
 - ☒ 4. 306

Question ID : 239087480

Status : Not Answered

Chosen Option : --

Q.17 If $A = 40 \div 8 + 5 \times 2 - 4 + 5$ of 3 and $B = 24 \div 4(4 + 2) + 19$ of 2, then what is the value of $A - B$?

- Ans
- ☒ 1. -11
 - ☒ 2. 11
 - ☒ 3. 13
 - ☒ 4. -13

Question ID : 239087458

Status : Not Answered

Chosen Option : --

Q.18 In a bag, the ratio of the number of 2 rupee, 1 rupee and 50 paise coins is 3 : 4 : 5. If the total amount in the bag is ₹250, then how many 1 rupee coins are there?

- Ans
- ☒ 1. 70
 - ☒ 2. 100
 - ☒ 3. 60
 - ☒ 4. 80

Question ID : 239087466

Status : Not Answered

Chosen Option : --

Q.19 A sum invested at compound interest (compounded annual) amounts to ₹750 at the end of first year and ₹900 at the end of second year. What is the sum?

- Ans
- ☒ 1. ₹700
 - ☒ 2. ₹625
 - ☒ 3. ₹600
 - ☒ 4. ₹650

Question ID : 239087470

Status : Not Answered

Chosen Option : --

Q.20 What is the average of all the natural numbers from 49 to 125?

- Ans
- ☒ 1. 85
 - ☒ 2. 87
 - ☒ 3. 88
 - ☒ 4. 86

Question ID : 239087459

Status : Not Answered

Chosen Option : --

Q.21 If $A : B$ is 2 : 3 and $B - A = 28$, then what is the value of $B + A$?

- Ans
- ☒ 1. 120

☒ 2. 150

☒ 3. 130

☒ 4. 140

Very Important For
SSC CGL 2019

Question ID : 239087467

Status : Answered

Chosen Option : 3

Q.22 The simple interest on a principal for 6 months at an interest rate of 10% per annum is ₹100. What is the principal?

Ans ☒ 1. ₹1000

☒ 2. ₹2000

☒ 3. ₹1500

☒ 4. ₹2500

Question ID : 239087469

Status : Answered

Chosen Option : 2

Q.23 An inlet pipe A originating from a river can fill a reservoir in 30 days. And an outlet pipe B, which is capable of emptying the completely filled reservoir in 50 days, drains out the water from the reservoir to an irrigation canal. The pipes are opened on alternate days starting with A. On which day from the beginning will the reservoir get completely filled for the first time?

Ans ☒ 1. 75th

☒ 2. 147th

☒ 3. 150th

☒ 4. 74th

Question ID : 239087471

Status : Not Answered

Chosen Option : --

Q.24 Alok starts walking from P with speed of 6 km/h towards Q. Raman starts at same time from P towards Q with speed of 9 km/h. Raman reaches Q, turns back and starts walking towards P. He meets Alok at R. If PQ is 15 km, then what is PR?

Ans ☒ 1. 20 km

☒ 2. 12 km

☒ 3. 15 km

☒ 4. 18 km

Question ID : 239087473

Status : Not Answered

Chosen Option : --

Q.25 A number is first increased by $16\frac{2}{3}\%$ and then decreased by 15% to get 238. What is 37.5% of that number?

Ans ☒ 1. 150

☒ 2. 75

☒ 3. 120

☒ 4. 90

Question ID : 239087463

Status : Not Answered

Chosen Option : --

Section : General awareness

Q.1 When was the Indian National Flag adopted?

- Ans
- ☒ 1. 12 July, 1947
 - ☒ 2. 12 August, 1947
 - ☒ 3. 22 August, 1947
 - ☒ 4. 22 July, 1947

Question ID : 239087218

Status : Answered

Chosen Option : 2

Q.2 Which of the following river falls in Arabian Sea?

- Ans
- ☒ 1. Indus
 - ☒ 2. Godavari
 - ☒ 3. Brahmaputra
 - ☒ 4. Krishna

Question ID : 239087227

Status : Answered

Chosen Option : 2

Q.3 Which of the following cricketer was awarded Rajiv Gandhi Khel Ratna 2018?

- Ans
- ☒ 1. Yuvraj Singh
 - ☒ 2. Virat Kohli
 - ☒ 3. M.S. Dhoni
 - ☒ 4. Rohit Sharma

Question ID : 239087210

Status : Answered

Chosen Option : 2

Q.4 Which of the following is a traditional painting of Odisha?

- Ans
- ☒ 1. Warli
 - ☒ 2. Pattachitra
 - ☒ 3. Sanjhi
 - ☒ 4. Madhubani

Question ID : 239087207

Status : Not Answered

Chosen Option : --

Q.5 Who among the following was NOT a Governor of Reserve Bank of India (RBI)?

- Ans
- ☒ 1. Manmohan Singh
 - ☒ 2. Sunil Arora

☒ 3. Urjit Patel

☒ 4. Raghuram Rajan

Very Important For
SSC CGL 2019

Question ID : 239087215
Status : Answered
Chosen Option : 1

Q.6 Which of the following is an ancient book written by Banabhatta?

Ans ☒ 1. Kadambari

☒ 2. Mrichchhakatika

☒ 3. Meghadutam

☒ 4. Gitagovinda

Question ID : 239087206
Status : Answered
Chosen Option : 1

Q.7 What is Parsi New year known as?

Ans ☒ 1. Ugadi

☒ 2. Navroz

☒ 3. Pateti

☒ 4. Puthandu

Question ID : 239087208
Status : Not Answered
Chosen Option : --

Q.8 The book 'War and Peace' is written by:

Ans ☒ 1. Leo Tolstoy

☒ 2. Dalai Lama

☒ 3. Maroof Raza

☒ 4. H.G. Wells

Question ID : 239087211
Status : Answered
Chosen Option : 2

Q.9 How many digits are there on a debit card?

Ans ☒ 1. 15

☒ 2. 16

☒ 3. 14

☒ 4. 17

Question ID : 239087214
Status : Answered
Chosen Option : 3

Q.10 To which of the following event Lord Curzon is related?

Ans ☒ 1. Partition of Bengal

- ☒ 2. Setting up of Durand Commission
- ☒ 3. Bhutan War
- ☒ 4. Introduction to system of Budget

Very Important For
SSC CGL 2019

Question ID : 239087230
Status : Answered
Chosen Option : 1

Q.11 The term 'time trial' is associated with which of the following sport?

- Ans ☒ 1. Cycling
- ☒ 2. Hockey
 - ☒ 3. Shooting
 - ☒ 4. Swimming

Question ID : 239087209
Status : Not Answered
Chosen Option : --

Q.12 Who is the 17th Lok Sabha Speaker?

- Ans ☒ 1. Meira Kumar
- ☒ 2. Somnath Chatterjee
 - ☒ 3. Om Birla
 - ☒ 4. Sumitra Mahajan

Question ID : 239087212
Status : Answered
Chosen Option : 3

Q.13 How many Schedules are there in the Indian Constitution?

- Ans ☒ 1. 14
- ☒ 2. 12
 - ☒ 3. 11
 - ☒ 4. 13

Question ID : 239087219
Status : Not Answered
Chosen Option : --

Q.14 According to the Census 2011, what is the population density of India?

- Ans ☒ 1. 372 per sq. km
- ☒ 2. 382 per sq. km
 - ☒ 3. 352 per sq. km
 - ☒ 4. 362 per sq. km

Question ID : 239087226
Status : Not Answered
Chosen Option : --

Q.15 Who discovered electron?

Ans

☒ 1. J.J. Thomson

☐ 2. James Chadwick

☐ 3. E. Rutherford

☐ 4. E. Goldstein

Important For
SSC CGL 2019

Question ID : 239087220

Status : Answered

Chosen Option : 1

Q.16 Which of the following ministers is named in the '100 Most Influential in UK-India Relations: Celebrating Women' list?

Ans

☐ 1. Smriti Irani

☒ 2. Nirmala Sitharaman

☐ 3. Sushma Swaraj

☐ 4. Maneka Gandhi

Question ID : 239087213

Status : Answered

Chosen Option : 3

Q.17 Which of the following Dynasty was founded by Qutb ud-din Aibak?

Ans

☐ 1. Chera Dynasty

☐ 2. Nanda Dynasty

☐ 3. Shunga Dynasty

☒ 4. Slave Dynasty

Question ID : 239087228

Status : Answered

Chosen Option : 4

Q.18 Under which article of Indian Constitution Hindi is declared as the official language?

Ans

☐ 1. Article 273

☒ 2. Article 343

☐ 3. Article 360

☐ 4. Article 370

Question ID : 239087217

Status : Answered

Chosen Option : 1

Q.19 Who was the fifth guru in Sikhism?

Ans

☐ 1. Guru Angad

☐ 2. Guru Ram Das

☒ 3. Guru Arjan Dev

☐ 4. Guru Har Rai

Question ID : 239087229

Status : Answered

Chosen Option : 1

Q.20 Which of the following quantities have its SI unit named after Blaise Pascal?

- Ans
- ☒ 1. Energy
 - ☐ 2. Pressure
 - ☐ 3. Work
 - ☐ 4. Power

Question ID : 239087221

Status : Answered

Chosen Option : 2

Q.21 Who among the following presented the Union budget of India for maximum times?

- Ans
- ☐ 1. RK Shanmukham Chetty
 - ☐ 2. Pranab Mukherjee
 - ☒ 3. Morarji Desai
 - ☐ 4. P. Chidambaram

Question ID : 239087216

Status : Answered

Chosen Option : 4

Q.22 Which of the following cell organelle contains DNA apart from nucleus?

- Ans
- ☐ 1. Cytoplasm
 - ☐ 2. Golgi Apparatus
 - ☒ 3. Mitochondria
 - ☐ 4. Ribosome

Question ID : 239087222

Status : Answered

Chosen Option : 3

Q.23 In which of the following states Marshy/ Peaty soil is NOT predominantly found?

- Ans
- ☐ 1. Kerala
 - ☒ 2. Madhya Pradesh
 - ☐ 3. Odisha
 - ☐ 4. West Bengal

Question ID : 239087225

Status : Not Answered

Chosen Option : --

Q.24 Which of the following element found in water is responsible for cancer?

- Ans
- ☒ 1. Arsenic
 - ☐ 2. Iron
 - ☐ 3. Chlorine
 - ☐ 4. Fluorine

Question ID : 239087224

Status : Answered
Chosen Option : 1

Q.25 Which of the following disease is caused by severe deficiency of proteins?

Ans



1. Kwashiorkor



2. Anaemia



3. Osteoporosis



4. Goiter

Question ID : 239087223

Status : Answered

Chosen Option : 1

BLACKBOOK of ENGLISH VOCABULARY

Updated till July 2019

- 3500+ Previous Year OWS
- 1100 Idioms / Phrases
- 4000 Synonyms + Antonyms + Spelling
- 1000+ The Hindu Vocabulary
- 1000+ Root Words
- 500 Phrasal Verbs
- 2100 Special Word Lists (Phobia / Latin etc)
- 100+ Practice Sets

Total 11000+ words, with ENGLISH / HINDI Explanations

NIKHIL GUPTA