



GOVT. OF NCT OF DELHI
Delhi Subordinate Services Selection Board
FC-18, Institutional Area, Karkardooma, Delhi – 110092.
www.dsssb.delhigovt.nic.in

Participant ID:	
Participant Name:	
Test Center Name:	iON Digital Zone iDZ 1 Sector 62
Test Date:	11/11/2018
Test Time:	12:30 PM - 2:30 PM
Subject:	ASSISTANT TEACHER PRIMARY

Section : Mental Ability

Q.1 Given below is a statement followed by two assumptions numbered I and II. Consider the statement and the following assumptions and decide which of the assumptions is implicit in the statement.

Statement:

Unemployment allowance should be given to all unemployed youth of our country.

Assumptions:

- I. There are unemployed youth of our country who need monetary support.
- II. The government has sufficient funds to provide allowance to all unemployed youth.

Ans

- ☒ 1. Only assumptions I is implicit
- ☐ 2. Neither I nor II is implicit
- ☐ 3. Only assumptions II is implicit
- ☐ 4. Both I and II are implicit

Question ID : 1626531022

Q.2 In a march past, seven students are standing in a row. B is standing at the left of C but at the right of A. D is standing at the right of E and at the left of A. Similarly, F is standing at the right of C and at the left of G. Who is standing in the middle?

Ans

- ☒ 1. B
- ☐ 2. D
- ☐ 3. F
- ☐ 4. C

Question ID : 1626531025

Q.3 You go for a function with your friend and he / she comments that you are not looking good. You:

Ans

- ☒ 1. make up some reason as to what went wrong
- ☐ 2. get back at him/her telling him/her how bad he/she is looking
- ☐ 3. start crying
- ☐ 4. take offence to do it and estrange your relationship

Question ID : 1626531024

Q.4 आपको एक प्रश्न तथा दो कथन I और II दिए गए हैं। आपको यह सुनिश्चित करना है कि क्या कथनों में उपलब्ध कराया गया डेटा प्रश्न का उत्तर देने के लिए पर्याप्त है।

प्रश्न:

मालिनी काव्या से छोटी है तथा सीमा अंजलि से छोटी है। उनमें से कौन सबसे छोटा है?

कथन:

- I. सीमा मालिनी से छोटी है।
- II. अंजलि काव्या से छोटी है।

Ans

- ☒ 1.

Question ID : 1626531030

प्रश्न का उत्तर देने के लिए अकेले कथन II में डेटा पर्याप्त है

☒ 2.

प्रश्न का उत्तर देने के लिए दोनों कथन I और II आवश्यक हैं।

☒ 3.

प्रश्न का उत्तर देने के लिए दोनों कथन I और II पर्याप्त नहीं हैं

☒ 4.

प्रश्न का उत्तर देने के लिए अकेले कथन I में डेटा पर्याप्त है

Q.5 आनंद, बालू, शेखर और विक्रम ताश खेल रहे हैं। आनंद और बालू जोड़ीदार हैं। विक्रम का मुँह उत्तर की तरफ है। यदि आनंद का मुँह पश्चिम की ओर हो तब किसका मुँह दक्षिण की ओर होगा?

Question ID : 1626531031

Ans

☒ 1. आनंद

☒ 2. विक्रम

☒ 3. शेखर

☒ 4. बालू

Q.6 निम्नलिखित जानकारी को सावधानीपूर्वक पढ़ें तथा नीचे दिए गए प्रश्नों का उत्तर दें:

Question ID : 1626531023

'*' प्रतीक है '=' का;

' α ' प्रतीक है 'से बड़ा' का;

' β ' प्रतीक है 'से कम' का;

' δ ' प्रतीक है 'से कम नहीं' का;

' γ ' प्रतीक है 'से अधिक नहीं' का;

यदि $M + 2N$ तथा $3N \gamma L$, तब

(मान लें कि सभी M, N, L धनात्मक हैं)

Ans

☒ 1. $M \delta 2L$

☒ 2. $3M \alpha 2L$

☒ 3. $M \beta L$

☒ 4. $M * L$

TEACHERS

adda247

Q.7 Choose the pair that is similar to the given pair.

Question ID : 1626531017

Smile : Happiness : _____ : _____

Ans

☒ 1. Face : Expression

☒ 2. Sorrow : Happy

☒ 3. Yawn : Boredom

☒ 4. Eyes : Tears

Q.8 निम्न शब्दों को अंग्रेज़ी शब्दकोष के क्रमानुसार व्यवस्थित करें।

Question ID : 1626531027

1. EMERGENCY

2. ENERGY

3. EMPOWERMENT

4. EMPLOYMENT

5. ENHANCEMENT

Ans

☒ 1. 1, 4, 3, 2, 5

- ☒ 2. 1, 3, 4, 2, 5
- ☒ 3. 1, 2, 3, 4, 5
- ☒ 4. 1, 4, 2, 3, 5

Q.9 एक कॉलेज में, 65% छात्रों ने क्रिकेट खेला, 40% छात्रों ने टेनिस खेला तथा 25% छात्रों ने क्रिकेट और टेनिस दोनों खेले। कितने प्रतिशत छात्रों ने न तो क्रिकेट और न ही टेनिस खेला?

Question ID : 1626531016

- Ans ☒ 1. 20%
- ☒ 2. 35%
- ☒ 3. 10%
- ☒ 4. 25%

Q.10 सुबिता याद करती है कि उसकी बहन का जन्मदिन 15 फरवरी के बाद लेकिन 18 फरवरी से पहले है जबकि उसका भाई रघु याद करता है कि उसकी बहन का जन्मदिन 16 फरवरी के बाद लेकिन 19 फरवरी से पहले है। फरवरी की किस तारीख को सुबिता की बहन का जन्मदिन है?

Question ID : 1626531019

- Ans ☒ 1. 15वीं
- ☒ 2. 18वीं
- ☒ 3. 19वीं
- ☒ 4. 16वीं

Q.11 You are given three statements and three conclusions. Choose the comment about conclusion from the given options below.
Given below are three statements followed by three conclusions numbered I, II and III. Consider the statement and the following conclusions and decide which of the conclusion(s) follow(s).

Question ID : 1626531029

Statement:

- I. No cat is a lion.
II. Some horses are lions.
III. All cats are cows.

Conclusions:

- I. Some cows are lions.
II. Some horses are cats.
III. No lion is a cow.

- Ans ☒ 1. All follow
- ☒ 2. Either I or II follows
- ☒ 3. Only conclusion I follows
- ☒ 4. Either I or III follows

Q.12 कॉलेज जाते समय, अनीता सुनीता के पीछे थी तथा रानी माला के आगे थी। रेखा, अनीता और रानी के बीच में थी। कौन अगुआई कर रहा था?

Question ID : 1626531034

- Ans ☒ 1. माला
- ☒ 2. सुनीता
- ☒ 3. रेखा
- ☒ 4. रानी

Q.13 निम्नलिखित के लिए सही विकल्प चुनें।

Question ID : 1626531033

46 : 22 :: 88 : _____

- Ans ☒ 1. 45

✗ 2. 44

✓ 3. 43

✗ 4. 42

Q.14 Find the odd one.

Question ID : 1626531028

Ans ✓ 1. Court

✗ 2. Stump

✗ 3. Pitch

✗ 4. Bat

Q.15 एक घन सभी पृष्ठों पर लाल रंग लगाया जाता है और फिर उसे 27 छोटे समाकार घनों में काटा जाता है। कितने घनों की केवल एक सतह पर रंग लगा है?

Question ID : 1626531021

Ans ✗ 1. 4

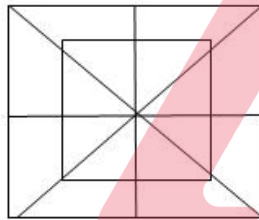
✓ 2. 6

✗ 3. 10

✗ 4. 8

Q.16 निम्नलिखित आकृति में वर्गों की संख्या का पता लगाएं:

Question ID : 1626531032



Ans ✗ 1. 8 वर्ग

✓ 2. 10 वर्ग

✗ 3. 12 वर्ग

✗ 4. 6 वर्ग

Q.17 प्रश्न चिह्नों के स्थान में छूटी शब्दावली की पहचान करें।

Question ID : 1626531035

2, 3, B, ?, 6, ?, F, G, ?, 5, D, ?, 8, ?, H, I

Ans ✗ 1. D, 8, 5, C, 7

✗ 2. E, 8, 7, I, 9

✓ 3. C, 7, 4, E, 9

✗ 4. W, 8, 7, I, 6

Q.18 हरी से परिचय कराते हुए, बीणा ने कहा, "वह मेरे पति की पत्नी की बेटी का भाई है"। बीणा का हरी से क्या संबंध है?

Question ID : 1626531020

Ans ✓ 1. माँ

✗ 2. सास

☒ 3. बहन

☒ 4. चाची

Q.19 If 'green' means 'yellow', 'yellow' means 'white', 'white' means 'blue', 'blue' means 'red' and 'red' means 'pink' then what is the colour of milk?

Question ID : 1626531018

Ans ☒ 1. Yellow

☒ 2. Blue

☒ 3. Green

☒ 4. White

Q.20 उस विकल्प को चुनें जो दिए गए संयोजन AUTUMN की दर्पण-छवि के काफी सदृश है।

Question ID : 1626531026

Ans ☒ 1. NWUTUA

☒ 2. AUTUMI

☒ 3. IMUTUA

☒ 4. NMUTUA

Section : General Awareness

Q.1 Dynamo converts:

Question ID : 1626531051

Ans ☒ 1. sound energy into electrical energy

☒ 2. mechanical energy into electrical energy

☒ 3. electrical energy into sound energy

☒ 4. electrical energy into mechanical energy

Q.2 _____ is expressed as the number of children born to a woman during her entire reproductive age.

Question ID : 1626531046

Ans ☒ 1. Infant mortality rate

☒ 2. Total fertility rate

☒ 3. Crude birth rate

☒ 4. Life expectancy at birth

Q.3 2018 में यूनेस्को की विश्व विरासत सांस्कृति में निम्नलिखित में से कौन सा भारतीय स्थल जोड़ा गया है?

Question ID : 1626531045

Ans ☒ 1.

मुंबई के विक्टोरियन गोथिक और आर्ट डेको एनसेम्बल

☒ 2. भारत की पर्वतीय रेलवे

☒ 3. जंतर मंतर, जयपुर

☒ 4.

पाटण, गुजरात का रानी-की-वाव (रानी का स्टेपवेल)

Q.4 स्वतंत्र भारत के पहले क्रिकेट टेस्ट कप्तान कौन थे?

Question ID : 1626531042

Ans ☒ 1. लाला अमरनाथ

- ☒ 2. महाराज कुमार
- ☒ 3. विजय मर्चेट
- ☒ 4. सी.के. नायडू

Q.5 'बंदी जीवन', जिसने औपनिवेशिक भारत में क्रांतिकारी आंदोलन के लिए पाठ्यपुस्तक के रूप में कार्य किया, _____ द्वारा लिखी गई थी।

Question ID : 1626531036

Ans

- ☒ 1. राजेंद्र लाहिरी
- ☒ 2. अरविंद घोष
- ☒ 3. सचिंद्रनाथ सान्याल
- ☒ 4. सूर्य सेन

Q.6 साइमन कमीशन का बहिष्कार करने वाले राजनीतिक दलों ने भारत के लिए संविधान का एक मसौदा तैयार करने के लिए एक सर्व दलीय सम्मेलन गठित किया। निम्नलिखित में से कौन सा कथन सही मालूम होता है?

Question ID : 1626531037

Ans

☒ 1.

इसने भारतीय नागरिकों को मूलभूत अधिकार देने की माँग की।

☒ 2. इसने पूर्ण स्वतंत्रता की माँग की।

☒ 3.

इसकी अध्यक्षता जवाहरलाल नेहरू द्वारा की गई।

☒ 4.

इसने संसद का एकीय होना प्रस्तावित किया।

Q.7 ट्रेकोमा मानव के कौन से अंग का एक रोग है?

Question ID : 1626531050

Ans

- ☒ 1. हृदय
- ☒ 2. आंख
- ☒ 3. गुर्दा
- ☒ 4. कान

Q.8 राष्ट्रीय खेल दिवस _____ को मनाया जाता है।

Question ID : 1626531043

Ans

- ☒ 1. 21 जून
- ☒ 2. 29 अगस्त
- ☒ 3. 25 सितंबर
- ☒ 4. 24 अक्टूबर

Q.9 Which of the following fundamental rights is mismatched?

Question ID : 1626531041

Ans

- ☒ 1. Article 21A: At the right of education
- ☒ 2.
- Article 26: Freedom to manage religious affairs.
- ☒ 3.

Article 29: Protection of interests of minorities.

✓ 4. None of the given options

Q.10 अखिल भारतीय थोक मूल्य सूचकांक (WPI) का आधार वर्ष 2017 में संशोधन किया जाता है। नया आधार वर्ष _____ है।

Question ID : 1626531049

- Ans
- ✓ 1. 2011-12
 - ✗ 2. 2013-14
 - ✗ 3. 2010-12
 - ✗ 4. 2012-13

Q.11 पंचायती राज का औपचारिक रूप से पंडित जवाहरलाल नेहरू द्वारा उद्घाटन _____ को _____ के _____ जिले में किया गया।

Question ID : 1626531038

- Ans
- ✗ 1. 2 अक्टूबर 1956 ; बहराइच ; उत्तर प्रदेश
 - ✗ 2. 2 अक्टूबर 1958 ; उदयपुर ; राजस्थान
 - ✗ 3. 2 अक्टूबर 1957 ; ग्वालियर ; मध्य प्रदेश
 - ✓ 4. 2 अक्टूबर 1959 ; नागौर ; राजस्थान

Q.12 16 सितंबर 2018 को भारतीय अंतरिक्ष अनुसंधान संगठन (इसरो) ने दो उपग्रहों को सफलतापूर्वक कक्षा में छोड़ा। लॉन्च मिशन के बारे में कौन सा कथन गलत है?

Question ID : 1626531052

- Ans
- ✗ 1. उपग्रह UK स्थित सारे सैटेलाइट टेक्नोलॉजी लिमिटेड (SSTL) का हैं।
 - ✓ 2. PSLV-C40 का मिशन में सफलतापूर्वक उपयोग किया गया।
 - ✗ 3. NovaSAR और S1-4 दो विदेशी उपग्रह थे जिन्हें कक्षा में छोड़ा गया।
 - ✗ 4. PSLV को सतीश धवन अंतरिक्ष केंद्र (SDSC) SHAR, श्रीहरिकोटा से छोड़ा गया।

Q.13 Citizenship is lost by which one/all of the following.

Question ID : 1626531040

- Ans
- ✗ 1. Renunciation of citizenship
 - ✓ 2. All of the given options
 - ✗ 3. Deprivation of citizenship
 - ✗ 4. Termination of citizenship

Q.14 असम के बिहू त्यौहार के संबंध में निम्नलिखित में से कौन सा कथन गलत है?

Question ID : 1626531044

- Ans
- ✓ 1. यह त्यौहार नववर्ष मनाने के लिए आयोजित किया जाता है।
 - ✗ 2. ये बहग बिहू, काती बिहू और माघ बिहू हैं।
 - ✗ 3. सारे बिहू त्यौहार एक संक्रांति दिवस पर होता है।
 - ✗ 4.

असम में तीन प्रकार के बिहू मनाए जाते हैं।

Q.15 The ratio that relates the change in the money supply to a given change in the monetary base is called the _____.

Question ID : 1626531048

- Ans
- ☒ 1. reserved money repo rate
 - ☒ 2. monetary base
 - ☒ 3. money increaser
 - ☒ 4. money multiplier

Q.16 Which information about the Organization of the Petroleum Exporting Countries (OPEC) is INCORRECT?

Question ID : 1626531054

- Ans
- ☒ 1. Its headquarters are situated in Baghdad.
 - ☒ 2. It is a permanent, intergovernmental organisation.
 - ☒ 3. It was founded at the Baghdad Conference on September 10–14, 1960.
 - ☒ 4. Its five founder countries are Iran, Iraq, Kuwait, Saudi Arabia and Venezuela.

Q.17 Which organization awards the Nobel Laureates in Chemistry?

Question ID : 1626531055

- Ans
- ☒ 1. The Royal Swedish Academy of Chemical Sciences
 - ☒ 2. Norwegian Nobel Committee
 - ☒ 3. The Royal Swedish Academy of Sciences
 - ☒ 4. The Nobel Foundation of Sweden

Q.18 Which of the following is INCORRECT about 'Monsoon'?

Question ID : 1626531047

- Ans
- ☒ 1. The monsoons are seasonal winds which reverse their direction of flow with the change of season.
 - ☒ 2. The term 'Monsoon' has been derived from the Arabic *mawsim* or from the Malayan *monsi*.
 - ☒ 3. Monsoons play a crucial role in the rainfall in India.
 - ☒ 4. Monsoons flow sea-to-land during winter.

Q.19 किन्हें 'भारतीय अंतरिक्ष कार्यक्रम का जनक' कहा जाता है?

Question ID : 1626531053

- Ans
- ☒ 1. डॉ होमी भाभा
 - ☒ 2. डॉ विक्रम ए. साराभाई
 - ☒ 3. जवाहरलाल नेहरू
 - ☒ 4. राकेश शर्मा

Q.20 Who argued that "The Indian Constitution established indeed a system of Government which is at most quasi-federal, a unitary state with subsidiary features rather than a Federal States with unitary features"?

Question ID : 1626531039

- Ans
- ☒ 1. KC Wheare
 - ☒ 2. Justice Fazal Ali

☒ 3. Sir Ivor Jennings

☒ 4. Dr BR Ambedkar

Section : Arithmetic Ability

Q.1 $(24)^{63} + (33)^{61} - (27)^{58}$ में इकाई स्थान में कौन सा अंक है?

Question ID : 1626531057

Ans ☒ 1. 6

☒ 2. 4

☒ 3. 8

☒ 4. 3

Q.2 An article is sold at a certain price. By selling it at $\frac{5}{6}$ of that price, one loses 5%. What is his percentage gain or loss at the original price?

Question ID : 1626531066

Ans ☒ 1. 6% gain

☒ 2. 14% loss

☒ 3. 6% loss

☒ 4. 14% gain

Q.3 $2.\overline{6} - 1.\overline{84} + 0.4\overline{27}$ का मान क्या होगा?

Question ID : 1626531059

Ans ☒ 1. $1.3\overline{35}$

☒ 2. $1.2\overline{45}$

☒ 3. $1.3\overline{56}$

☒ 4. $1.3\overline{85}$

Q.4 ₹ 17,520 की धनराशि A, B और C में इस तरह से बांटी जाती है कि A के हिस्से का 6 गुना, B के हिस्से का 7 गुना और C के हिस्से का 8 गुना बराबर हैं। B का हिस्सा कितना है?

Question ID : 1626531062

Ans ☒ 1. ₹ 5,760

☒ 2. ₹ 6,720

☒ 3. ₹ 5,040

☒ 4. ₹ 6,240

Q.5 लघुत्तम संख्या के अंकों का वह योग क्या है जिसे 94832 में से घटाया जाना चाहिए जिससे वह एक पूर्ण वर्ग बन जाये?

Question ID : 1626531058

Ans ☒ 1. 18

☒ 2. 15

☒ 3. 17

☒ 4. 16

Q.6 $(46.7)^3 - (41.7)^3 - 140.1 \times 208.5$ का मान क्या होगा?

Question ID : 1626531056

Ans ☒ 1. 175

☒ 2. 27

✓ 3. 125

✗ 4. 64

Q.7 एक नौका 2 h 42 min में 18 km ऊर्ध्वप्रवाह और 24 km अनुप्रवाह जा सकती है। यदि धारा का वेग 4 km/h है, तो स्थिर पानी में नौका की गति km/h में कितनी है?

Question ID : 1626531072

Ans ✗ 1. 12

✗ 2. 14

✗ 3. 15

✓ 4. 16

Q.8 एक आयत का विकर्ण $16\sqrt{5}$ cm है। अगर उसका परिमाप 96 cm है तो आयत का क्षेत्रफल कितने cm^2 है?

Question ID : 1626531068

Ans ✗ 1. 256

✗ 2. 640

✗ 3. 1280

✓ 4. 512

Q.9 A, B और C किसी काम को क्रमशः 20, 30 और 60 दिनों में पूरा कर सकते हैं। उन्होंने एक साथ काम शुरू किया लेकिन A ने काम पूरा होने के निर्धारित समय से 5 दिन पहले काम छोड़ दिया। B और C द्वारा बाकी काम को कितने दिन में पूरा कर लिया जायेगा?

Question ID : 1626531070

Ans ✗ 1. 12

✓ 2. 10

✗ 3. 8

✗ 4. 15

Q.10 अगर दिन में 7 घंटे काम करके 18 आदमी 20 दिन में ₹ 1,38,600 कमाते हैं, तो दिन में 8 घंटे काम करके 15 आदमी 25 दिन में कितना पैसा कमा सकेंगे?

Question ID : 1626531071

Ans ✗ 1. ₹ 1,47,000

✗ 2. ₹ 1,53,000

✓ 3. ₹ 1,65,000

✗ 4. ₹ 1,59,000

Q.11 The value of a machine depreciates at the rate of 9% per annum. If the present value of the machine is ₹ 1,800, what is the percentage decrease in its value at the end of 2 years?

Question ID : 1626531067

Ans ✓ 1. 17.19%

✗ 2. 16.16%

✗ 3. 16.81%

✗ 4. 16.26%

Q.12 By selling 12 articles, a person loses the cost price of 3 articles. What is his percentage loss?

Question ID : 1626531065

Ans ✗ 1. 20%

✓ 2. 25%

✗ 3. $\frac{50}{3}\%$

✗ 4. 16%

Q.13 एक कालेज में 180 छात्रों का औसत वजन 56 kg है। लड़कों और लड़कियों का औसत वजन क्रमशः 60 kg और 50 kg है। लड़कों और लड़कियों का अनुपात कितना है?

Question ID : 1626531061

- Ans
- ☒ 1. 3 : 4
 - ☒ 2. 4 : 3
 - ☒ 3. 3 : 2
 - ☒ 4. 2 : 3

Q.14 Two vessels A and B contain spirit and water in the ratio 5 : 6 and 9 : 13 respectively. Their contents are mixed in the ratio 2 : 3. What is the ratio of spirit and water in the new mixture?

Question ID : 1626531063

- Ans
- ☒ 1. 55 : 63
 - ☒ 2. 47 : 63
 - ☒ 3. 63 : 47
 - ☒ 4. 63 : 55

Q.15 दो संख्याओं का महत्तम समापवर्तक 24 है और उनका गुणनफल 17280 है। संख्याओं के ऐसे कितने युग्म/जोड़े संभव हैं?

Question ID : 1626531060

- Ans
- ☒ 1. 3
 - ☒ 2. 5
 - ☒ 3. 8
 - ☒ 4. 4

Q.16 8 cubes each of edge 2 cm are joined end to end to form a cuboid. What will be the percentage decrease in the surface area correct to one decimal place?

Question ID : 1626531069

- Ans
- ☒ 1. 29.2%
 - ☒ 2. 24.5%
 - ☒ 3. 28.8%
 - ☒ 4. 30.8%

Q.17 एक परीक्षा में 400 छात्र बैठे। यदि 68% छात्र गणित में, 62% छात्र विज्ञान में और 22% छात्र दोनों विषयों में अनुत्तीर्ण हुए, तो दोनों विषयों में कितने छात्र उत्तीर्ण हुए?

Question ID : 1626531064

- Ans
- ☒ 1. 152
 - ☒ 2. 220
 - ☒ 3. 248
 - ☒ 4. 208

Q.18 एक रेलगाड़ी पड़ाव के बिना 70 km/h की रफ्तार से चलती है और पड़ाव के साथ 63 km/h की रफ्तार से चलती है। रेलगाड़ी प्रति घंटे औसतन कितने मिनट रुकती है?

Question ID : 1626531073

- Ans
- ☒ 1. 10
 - ☒ 2. 8
 - ☒ 3. 6
 - ☒ 4. 12

Comprehension:

The following table gives the marks obtained by students in the given class interval. Read the table and answer the following questions.

Class Interval	0 – 10	10 – 20	20 – 30	30 – 40	40 – 50	50 – 60
Number of Students	15	26	35	40	20	14

SubQuestion No : 19

Q.1
9 If the data is represented as a pie-chart, what is the central angle of the sector representing the median class to the nearest whole degree?

Question ID : 1626531076

- Ans
- ✓ 1. 84°
 - ✗ 2. 48°
 - ✗ 3. 96°
 - ✗ 4. 62°

Comprehension:

The following table gives the marks obtained by students in the given class interval. Read the table and answer the following questions.

Class Interval	0 – 10	10 – 20	20 – 30	30 – 40	40 – 50	50 – 60
Number of Students	15	26	35	40	20	14

SubQuestion No : 20

Q.2
0 What are the mean marks obtained by the students?

Question ID : 1626531075

- Ans
- ✗ 1. 30.8
 - ✗ 2. 32.6
 - ✓ 3. 29.4
 - ✗ 4. 34.8

Section : General English

Q.1 Select the correct synonym of the following word.

Question ID : 1626531089

DECOROUS

- Ans
- ✗ 1. Uncomely

- ☒ 2. Improper
- ☒ 3. Seemly
- ☒ 4. Unbecoming

Q.2 Choose the correct option to fill in the blank and complete the given sentence.

Political parties often _____ particular neighbourhoods, looking for votes and trying to measure the pulse of the people.

Question ID : 1626531085

- Ans ☒ 1. precede
- ☒ 2. transit
- ☒ 3. canvass
- ☒ 4. predate

Q.3 Identify the correct contracted form of I am.

Question ID : 1626531078

- Ans ☒ 1. I'm
- ☒ 2. 'm
- ☒ 3. 'am
- ☒ 4. I'

Q.4 You'll know it when you meet voluble talkers: they just keep going on and on about their favourite subjects.

What does the word voluble mean in the above sentence?

Question ID : 1626531083

- Ans ☒ 1. Taciturn
- ☒ 2. Concise
- ☒ 3. Inexpressive
- ☒ 4. Garrulous

Q.5 Select the correct ANTONYM of the following word.

Question ID : 1626531086

CORPOREAL

- Ans ☒ 1. Somatic
- ☒ 2. Mental
- ☒ 3. Incarnate
- ☒ 4. Embodied

Q.6 Identify the punctuation mark that should end the given sentence.

Question ID : 1626531077

Did the man find his dog

- Ans ☒ 1. .
- ☒ 2. "
- ☒ 3. !
- ☒ 4. ?

Q.7 Choose the correct option to fill in the blank and complete the given sentence.

He is asking for a just _____ for the work he has done.

Question ID : 1626531084

- Ans ☒ 1. recompense

- ☒ 2. equivalence
- ☒ 3. correspondence
- ☒ 4. exchequer

Q.8 Choose the correct option to fill in the blank and complete the given sentence.

Question ID : 1626531081

The _____ house was built in the eighteenth century.

- Ans
- ☒ 1. grim
 - ☒ 2. bent
 - ☒ 3. mild
 - ☒ 4. hoary

Q.9 Select the correct synonym of the following word.

Question ID : 1626531087

EXIGENT

- Ans
- ☒ 1. Suppliant
 - ☒ 2. Imperative
 - ☒ 3. Adjuratory
 - ☒ 4. Lenient

Q.10 Select the correct ANTONYM of the following word.

Question ID : 1626531088

HAZY

- Ans
- ☒ 1. Lucid
 - ☒ 2. Cloudy
 - ☒ 3. Sunny
 - ☒ 4. Foggy

Q.11 Select the correct synonym of the following word.

Question ID : 1626531091

PANDEMONIUM


- Ans
- ☒ 1. Organised
 - ☒ 2. Concord
 - ☒ 3. Opacity
 - ☒ 4. Chaos

Q.12 Select the correct ANTONYM of the following word.

Question ID : 1626531090

PROSCRIBE





- Ans
- ☒ 1. Debar
 - ☒ 2. Enjoin
 - ☒ 3. Legalise

 4. Interdict

Q.13 Choose the sentence that does NOT have a mistake in it.

Question ID : 1626531080





Ans

-  1. When we leaving?
-  2. Vaishnavi is my friend.
-  3. Ravi need to go to the store.
-  4. You see the game last night?

Q.14 Choose the sentence that does NOT have a mistake in it.

Question ID : 1626531079

Ans

-  1. I am from El Salvador.
-  2. Sukhi love her mom.
-  3. Krishna am nice.
-  4. I need to get new job.

Q.15 Choose the correct option to fill in the blank and complete the given sentence.

Question ID : 1626531082

You probably enjoy the _____ hike you take up the side of a mountain.

Ans

-  1. tiresome
-  2. enervating
-  3. bracing
-  4. incapacitating

Comprehension:



Read the following passage and answer the questions based on it.

Rescue workers are hunting for survivors after a powerful earthquake hit the Indonesian island of Sulawesi and triggered a tsunami, killing at least 384 people. After the 7.5-magnitude earthquake hit on Friday, 28 September 2018, water smashed into buildings and swept away homes in the coastal city of Palu city, home to 350,000 people. More than 540 people are being treated in several local hospitals amid the massive destruction in Palu and 29 people are missing.

The death toll could climb in the coming days, Disaster Management Agency, BNPB, spokesman Sutopo Purwo Nugroho warned at a briefing in Jakarta.

Electricity and communications have been cut off, making it difficult to assess the damage in Palu and nearby fishing community of Donggala, Sutopo said.

“It is not just the people in the large urban areas. There are a lot of people also living in remote communities who are hard to reach” Jan Gelfand, head of the International Red Cross in Indonesia, said.

With Palu airport closed, relief workers have to make their way to Palu by road. Sulawesi is one of the biggest islands in the world and the drive from the nearest airport is around 10-12 hours, but what damage there is to the road infrastructure is not yet known.

In Palu, authorities are still urging residents to not go inside their homes and sleep away from buildings — in fields, on roads or in yards because of the danger from aftershocks.

The horrific scene began Friday when the first in a series of tremors was felt at 3 p.m. (3 a.m. ET) 35 miles (56 km) north of Palu, according to the United States Geological Survey.

Three quakes of 4.9 and larger magnitudes were recorded up to three hours before the tremor near Palu, the USGS said.

Hundreds of people had gathered for a festival on the beach in the city of Palu on Friday when waves as high as six metres (18 feet) smashed onshore at dusk. “When the (tsunami) threat arose yesterday, people were still doing their activities on the beach and did not immediately run and they became victims, The tsunami was “about three meters high,” Sutopo Nugroho said.

A series of aftershock quakes were reported in the aftermath of the quake, including a 5.8 magnitude tremor just 12 minutes later.

An early tsunami warning had been issued by the Indonesian meteorological agency, but was later lifted after the agency ascertained that the water had receded.

Indonesia sits on the Pacific Ring of Fire and is regularly hit by earthquakes. In August, a series of major quakes killed more than 500 people in the tourist island of Lombok and destroyed dozens of villages along its northern coast. Palu was hit by a tsunami in 1927 and 1968, according to the BNPB.

SubQuestion No : 16

Q.1
6 In Palu, authorities are urging residents to NOT to sleep:

Question ID : 1626531093

- Ans
- ☒ 1. on the roads
 - ☒ 2. inside buildings
 - ☒ 3. in the fields
 - ☒ 4. in yards

Comprehension:



Read the following passage and answer the questions based on it.

Rescue workers are hunting for survivors after a powerful earthquake hit the Indonesian island of Sulawesi and triggered a tsunami, killing at least 384 people. After the 7.5-magnitude earthquake hit on Friday, 28 September 2018, water smashed into buildings and swept away homes in the coastal city of Palu city, home to 350,000 people. More than 540 people are being treated in several local hospitals amid the massive destruction in Palu and 29 people are missing.

The death toll could climb in the coming days, Disaster Management Agency, BNPB, spokesman Sutopo Purwo Nugroho warned at a briefing in Jakarta.

Electricity and communications have been cut off, making it difficult to assess the damage in Palu and nearby fishing community of Donggala, Sutopo said.

“It is not just the people in the large urban areas. There are a lot of people also living in remote communities who are hard to reach” Jan Gelfand, head of the International Red Cross in Indonesia, said.

With Palu airport closed, relief workers have to make their way to Palu by road. Sulawesi is one of the biggest islands in the world and the drive from the nearest airport is around 10-12 hours, but what damage there is to the road infrastructure is not yet known.

In Palu, authorities are still urging residents to not go inside their homes and sleep away from buildings — in fields, on roads or in yards because of the danger from aftershocks.

The horrific scene began Friday when the first in a series of tremors was felt at 3 p.m. (3 a.m. ET) 35 miles (56 km) north of Palu, according to the United States Geological Survey.

Three quakes of 4.9 and larger magnitudes were recorded up to three hours before the tremor near Palu, the USGS said.

Hundreds of people had gathered for a festival on the beach in the city of Palu on Friday when waves as high as six metres (18 feet) smashed onshore at dusk. “When the (tsunami) threat arose yesterday, people were still doing their activities on the beach and did not immediately run and they became victims, The tsunami was “about three meters high,” Sutopo Nugroho said.

A series of aftershock quakes were reported in the aftermath of the quake, including a 5.8 magnitude tremor just 12 minutes later.

An early tsunami warning had been issued by the Indonesian meteorological agency, but was later lifted after the agency ascertained that the water had receded.

Indonesia sits on the Pacific Ring of Fire and is regularly hit by earthquakes. In August, a series of major quakes killed more than 500 people in the tourist island of Lombok and destroyed dozens of villages along its northern coast. Palu was hit by a tsunami in 1927 and 1968, according to the BNPB.

SubQuestion No : 17

Q.1
7 Sutopo Nugroho is the spokesperson of which agency?

Question ID : 1626531097

Ans

✗ 1. Indonesian Meteorological Agency

✗ 2.

Disaster Management Agency of Indonesia (BNPB)

✓ 3. The United States Geological Survey

✗ 4. International Red Cross in Indonesia

Comprehension:



Read the following passage and answer the questions based on it.

Rescue workers are hunting for survivors after a powerful earthquake hit the Indonesian island of Sulawesi and triggered a tsunami, killing at least 384 people. After the 7.5-magnitude earthquake hit on Friday, 28 September 2018, water smashed into buildings and swept away homes in the coastal city of Palu city, home to 350,000 people. More than 540 people are being treated in several local hospitals amid the massive destruction in Palu and 29 people are missing.

The death toll could climb in the coming days, Disaster Management Agency, BNPB, spokesman Sutopo Purwo Nugroho warned at a briefing in Jakarta.

Electricity and communications have been cut off, making it difficult to assess the damage in Palu and nearby fishing community of Donggala, Sutopo said.

“It is not just the people in the large urban areas. There are a lot of people also living in remote communities who are hard to reach” Jan Gelfand, head of the International Red Cross in Indonesia, said.

With Palu airport closed, relief workers have to make their way to Palu by road. Sulawesi is one of the biggest islands in the world and the drive from the nearest airport is around 10-12 hours, but what damage there is to the road infrastructure is not yet known.

In Palu, authorities are still urging residents to not go inside their homes and sleep away from buildings — in fields, on roads or in yards because of the danger from aftershocks.

The horrific scene began Friday when the first in a series of tremors was felt at 3 p.m. (3 a.m. ET) 35 miles (56 km) north of Palu, according to the United States Geological Survey.

Three quakes of 4.9 and larger magnitudes were recorded up to three hours before the tremor near Palu, the USGS said.

Hundreds of people had gathered for a festival on the beach in the city of Palu on Friday when waves as high as six metres (18 feet) smashed onshore at dusk. “When the (tsunami) threat arose yesterday, people were still doing their activities on the beach and did not immediately run and they became victims, The tsunami was “about three meters high,” Sutopo Nugroho said.

A series of aftershock quakes were reported in the aftermath of the quake, including a 5.8 magnitude tremor just 12 minutes later.

An early tsunami warning had been issued by the Indonesian meteorological agency, but was later lifted after the agency ascertained that the water had receded.

Indonesia sits on the Pacific Ring of Fire and is regularly hit by earthquakes. In August, a series of major quakes killed more than 500 people in the tourist island of Lombok and destroyed dozens of villages along its northern coast. Palu was hit by a tsunami in 1927 and 1968, according to the BNPB.

SubQuestion No : 18


Why did the people NOT evacuate the beach in spite of the warning issued by the Indonesian Meteorological Agency?

Ans  1.

The warning was issued earlier but was withdrawn later.

 2.

People are not in the habit of listening to warnings by different agencies.

 3. People were busy in their festivities.

 4.

People had no faith in the warning issued by the agency.

Comprehension:



Read the following passage and answer the questions based on it.

Rescue workers are hunting for survivors after a powerful earthquake hit the Indonesian island of Sulawesi and triggered a tsunami, killing at least 384 people. After the 7.5-magnitude earthquake hit on Friday, 28 September 2018, water smashed into buildings and swept away homes in the coastal city of Palu city, home to 350,000 people. More than 540 people are being treated in several local hospitals amid the massive destruction in Palu and 29 people are missing.

The death toll could climb in the coming days, Disaster Management Agency, BNPB, spokesman Sutopo Purwo Nugroho warned at a briefing in Jakarta.

Electricity and communications have been cut off, making it difficult to assess the damage in Palu and nearby fishing community of Donggala, Sutopo said.

“It is not just the people in the large urban areas. There are a lot of people also living in remote communities who are hard to reach” Jan Gelfand, head of the International Red Cross in Indonesia, said.

With Palu airport closed, relief workers have to make their way to Palu by road. Sulawesi is one of the biggest islands in the world and the drive from the nearest airport is around 10-12 hours, but what damage there is to the road infrastructure is not yet known.

In Palu, authorities are still urging residents to not go inside their homes and sleep away from buildings — in fields, on roads or in yards because of the danger from aftershocks.

The horrific scene began Friday when the first in a series of tremors was felt at 3 p.m. (3 a.m. ET) 35 miles (56 km) north of Palu, according to the United States Geological Survey.

Three quakes of 4.9 and larger magnitudes were recorded up to three hours before the tremor near Palu, the USGS said.

Hundreds of people had gathered for a festival on the beach in the city of Palu on Friday when waves as high as six metres (18 feet) smashed onshore at dusk. “When the (tsunami) threat arose yesterday, people were still doing their activities on the beach and did not immediately run and they became victims, The tsunami was “about three meters high,” Sutopo Nugroho said.

A series of aftershock quakes were reported in the aftermath of the quake, including a 5.8 magnitude tremor just 12 minutes later.

An early tsunami warning had been issued by the Indonesian meteorological agency, but was later lifted after the agency ascertained that the water had receded.

Indonesia sits on the Pacific Ring of Fire and is regularly hit by earthquakes. In August, a series of major quakes killed more than 500 people in the tourist island of Lombok and destroyed dozens of villages along its northern coast. Palu was hit by a tsunami in 1927 and 1968, according to the BNPB.

SubQuestion No : 19

Q.1
9 At which place was the maximum damage done by the tsunami?

Question ID : 1626531095

Ans

- ✗ 1. The city of Jakarta
- ✗ 2. The tourist island of Lombok
- ✓ 3. The fishing village of Donggala
- ✗ 4. The city of Palu

Comprehension:



Read the following passage and answer the questions based on it.

Rescue workers are hunting for survivors after a powerful earthquake hit the Indonesian island of Sulawesi and triggered a tsunami, killing at least 384 people. After the 7.5-magnitude earthquake hit on Friday, 28 September 2018, water smashed into buildings and swept away homes in the coastal city of Palu city, home to 350,000 people. More than 540 people are being treated in several local hospitals amid the massive destruction in Palu and 29 people are missing.

The death toll could climb in the coming days, Disaster Management Agency, BNPB, spokesman Sutopo Purwo Nugroho warned at a briefing in Jakarta.

Electricity and communications have been cut off, making it difficult to assess the damage in Palu and nearby fishing community of Donggala, Sutopo said.

“It is not just the people in the large urban areas. There are a lot of people also living in remote communities who are hard to reach” Jan Gelfand, head of the International Red Cross in Indonesia, said.

With Palu airport closed, relief workers have to make their way to Palu by road. Sulawesi is one of the biggest islands in the world and the drive from the nearest airport is around 10-12 hours, but what damage there is to the road infrastructure is not yet known.

In Palu, authorities are still urging residents to not go inside their homes and sleep away from buildings — in fields, on roads or in yards because of the danger from aftershocks.

The horrific scene began Friday when the first in a series of tremors was felt at 3 p.m. (3 a.m. ET) 35 miles (56 km) north of Palu, according to the United States Geological Survey.

Three quakes of 4.9 and larger magnitudes were recorded up to three hours before the tremor near Palu, the USGS said.

Hundreds of people had gathered for a festival on the beach in the city of Palu on Friday when waves as high as six metres (18 feet) smashed onshore at dusk. “When the (tsunami) threat arose yesterday, people were still doing their activities on the beach and did not immediately run and they became victims, The tsunami was “about three meters high,” Sutopo Nugroho said.

A series of aftershock quakes were reported in the aftermath of the quake, including a 5.8 magnitude tremor just 12 minutes later.

An early tsunami warning had been issued by the Indonesian meteorological agency, but was later lifted after the agency ascertained that the water had receded.

Indonesia sits on the Pacific Ring of Fire and is regularly hit by earthquakes. In August, a series of major quakes killed more than 500 people in the tourist island of Lombok and destroyed dozens of villages along its northern coast. Palu was hit by a tsunami in 1927 and 1968, according to the BNPB.

SubQuestion No : 20

Q.2
0 Which statement is NOT true according to the passage?

Question ID : 1626531096

Ans

✗ 1. The whole island of Sulawesi has been badly damaged by the earthquakes and the tsunami.

✗ 2. Indonesia is regularly hit by earthquakes.

✓ 3.

A number of earthquakes of different magnitudes hit Palu before the tsunami.

✗ 4.

People were warned about the tsunami but the warning was withdrawn.

Section : General Hindi

Comprehension:

नीचे दिये गए गद्यांश को पढ़कर पूछे गये प्रश्नों के उत्तर दीजिए।

प्रसाद के ऐतिहासिक नाटकों पर अपने समय अर्थात् 20वीं सदी की समस्याओं का पूरा प्रभाव है। नाटक राष्ट्रीयता, अतीत गौरव की भावना से पूर्ण हैं। सांप्रदायिक एकता, विश्वबंधुत्व की भावना भी दिखाई पड़ती है जिसे अंतर्राष्ट्रीय भावना भी कह सकते हैं। चंद्रगुप्त नाटक (1931) में एक ओर तो राजनीतिक चालें और चाणक्य का सूत्र-संचालन है, और दूसरी ओर उसका इन सबसे विरक्त ब्राह्मण-व्यक्तित्व है। इससे उस पात्र में अंतर्द्वंद्व तो आ ही गया है, शील वैचित्य भी आ गया है। स्कंदगुप्त (1928) की देवसेना ठेठ छायावादी पात्र है।

SubQuestion No : 1

Q.1 चाणक्य का संबंध किस नाटक से है?

Question ID : 1626531102

Ans

✗ 1. स्कन्दगुप्त

✗ 2. ध्रुवस्वामिनी

✓ 3. चन्द्रगुप्त

✗ 4. अजातशत्रु

Comprehension:

नीचे दिये गए गद्यांश को पढ़कर पूछे गये प्रश्नों के उत्तर दीजिए।

प्रसाद के ऐतिहासिक नाटकों पर अपने समय अर्थात् 20वीं सदी की समस्याओं का पूरा प्रभाव है। नाटक राष्ट्रीयता, अतीत गौरव की भावना से पूर्ण हैं। सांप्रदायिक एकता, विश्वबंधुत्व की भावना भी दिखाई पड़ती है जिसे अंतर्राष्ट्रीय भावना भी कह सकते हैं। चंद्रगुप्त नाटक (1931) में एक ओर तो राजनीतिक चालें और चाणक्य का सूत्र-संचालन है, और दूसरी ओर उसका इन सबसे विरक्त ब्राह्मण-व्यक्तित्व है। इससे उस पात्र में अंतर्द्वंद्व तो आ ही गया है, शील वैचित्त्य भी आ गया है। स्कंदगुप्त (1928) की देवसेना ठेठ छायावादी पात्र है।

SubQuestion No : 2

Q.2 प्रसाद का समय है:

Question ID : 1626531099

- Ans
- ☒ 1. 18वीं सदी
 - ☒ 2. 21वीं सदी
 - ☒ 3. 20वीं सदी
 - ☒ 4. 19वीं सदी

TEACHERS

Comprehension:

नीचे दिये गए गद्यांश को पढ़कर पूछे गये प्रश्नों के उत्तर दीजिए।

प्रसाद के ऐतिहासिक नाटकों पर अपने समय अर्थात् 20वीं सदी की समस्याओं का पूरा प्रभाव है। नाटक राष्ट्रीयता, अतीत गौरव की भावना से पूर्ण हैं। सांप्रदायिक एकता, विश्वबंधुत्व की भावना भी दिखाई पड़ती है जिसे अंतर्राष्ट्रीय भावना भी कह सकते हैं। चंद्रगुप्त नाटक (1931) में एक ओर तो राजनीतिक चालें और चाणक्य का सूत्र-संचालन है, और दूसरी ओर उसका इन सबसे विरक्त ब्राह्मण-व्यक्तित्व है। इससे उस पात्र में अंतर्द्वंद्व तो आ ही गया है, शील वैचित्त्य भी आ गया है। स्कंदगुप्त (1928) की देवसेना ठेठ छायावादी पात्र है।

SubQuestion No : 3

Q.3 देवसेना का संबंध किस नाटक से है?

Question ID : 1626531103

- Ans
- ☒ 1. स्कन्दगुप्त
 - ☒ 2. राज्यश्री
 - ☒ 3. चन्द्रगुप्त

4. ध्रुवस्वामिनी

Comprehension:

नीचे दिये गए गद्यांश को पढ़कर पूछे गये प्रश्नों के उत्तर दीजिए।

प्रसाद के ऐतिहासिक नाटकों पर अपने समय अर्थात् 20वीं सदी की समस्याओं का पूरा प्रभाव है। नाटक राष्ट्रीयता, अतीत गौरव की भावना से पूर्ण हैं। सांप्रदायिक एकता, विश्वबंधुत्व की भावना भी दिखाई पड़ती है जिसे अंतर्राष्ट्रीय भावना भी कह सकते हैं। चंद्रगुप्त नाटक (1931) में एक ओर तो राजनीतिक चालें और चाणक्य का सूत्र-संचालन है, और दूसरी ओर उसका इन सबसे विरक्त ब्राह्मण-व्यक्तित्व है। इससे उस पात्र में अंतर्द्वंद्व तो आ ही गया है, शील वैचित्य भी आ गया है। स्कंदगुप्त (1928) की देवसेना ठेठ छायावादी पात्र है।

SubQuestion No : 4

Q.4 चन्द्रगुप्त का प्रकाशन वर्ष है:

Question ID : 1626531101

- Ans  1. 1931
 2. 1928
 3. 1934
 4. 1937

TEACHERS

adda247

Comprehension:


नीचे दिये गए गद्यांश को पढ़कर पूछे गये प्रश्नों के उत्तर दीजिए।

प्रसाद के ऐतिहासिक नाटकों पर अपने समय अर्थात् 20वीं सदी की समस्याओं का पूरा प्रभाव है। नाटक राष्ट्रीयता, अतीत गौरव की भावना से पूर्ण हैं। सांप्रदायिक एकता, विश्वबंधुत्व की भावना भी दिखाई पड़ती है जिसे अंतर्राष्ट्रीय भावना भी कह सकते हैं। चंद्रगुप्त नाटक (1931) में एक ओर तो राजनीतिक चालें और चाणक्य का सूत्र-संचालन है, और दूसरी ओर उसका इन सबसे विरक्त ब्राह्मण-व्यक्तित्व है। इससे उस पात्र में अंतर्द्वंद्व तो आ ही गया है, शील वैचित्य भी आ गया है। स्कंदगुप्त (1928) की देवसेना ठेठ छायावादी पात्र है।

SubQuestion No : 5

Q.5 प्रसाद के नाटकों का विशेषता नहीं है:

Question ID : 1626531100

- Ans  1. सांप्रदायिकता एकता

- ☒ 2. अतीत गौरव की भावना
- ☒ 3. राष्ट्रीयता
- ☒ 4. वैमनस्य की भावना

Q.6 'आलोक' का विलोम होगा:

Question ID : 1626531115

- Ans ☒ 1. त्रिलोक
- ☒ 2. लोक
- ☒ 3. अंधकार
- ☒ 4. प्रकाश

Q.7 निम्नलिखित में कौन सा शब्द देशज है?

Question ID : 1626531106

- Ans ☒ 1. आदत
- ☒ 2. उम्मीद
- ☒ 3. कलाई
- ☒ 4. क्लास

Q.8 'उच्छिष्ट' का संधि विच्छेद होगा:

Question ID : 1626531109

- Ans ☒ 1. उत् + छिष्ट
- ☒ 2. उत् + शिष्ट
- ☒ 3. उच् + छिष्ट
- ☒ 4. उच् + शिष्ट

Q.9 निम्नलिखित में तत्सम शब्द कौन सा है?

Question ID : 1626531104

- Ans ☒ 1. दन्त
- ☒ 2. दही
- ☒ 3. दाढ़ी
- ☒ 4. दाई

Q.10 'भावुक' में प्रत्यय है:

Question ID : 1626531113

- Ans ☒ 1. उक
- ☒ 2. वुक
- ☒ 3. क
- ☒ 4. भा

Q.11 'प्रत्यंग' में कौन सा समास है?

Question ID : 1626531110

Ans

- ☒ 1. द्वंद्व
- ☒ 2. द्विगु
- ☒ 3. तत्पुरुष
- ☒ 4. अव्ययीभाव

Q.12 'तिरछा' किस प्रकार का विशेषण है?

Question ID : 1626531108

- Ans
- ☒ 1. सार्वनामिक
 - ☒ 2. परिमाण बोधक
 - ☒ 3. गुणवाचक
 - ☒ 4. संख्यावाचक

Q.13 'लड़का' किस प्रकार की संज्ञा है?

Question ID : 1626531107

- Ans
- ☒ 1. व्यक्तिवाचक
 - ☒ 2. पदार्थवाचक
 - ☒ 3. भाववाचक
 - ☒ 4. जातिवाचक

Q.14 निम्नलिखित में वर्तनी की दृष्टि से शुद्ध शब्द कौन सा है?

Question ID : 1626531118

- Ans
- ☒ 1. शिशु
 - ☒ 2. शिशू
 - ☒ 3. सिसू
 - ☒ 4. सिसु

Q.15 'पतंग' किसका पर्यायवाची नहीं है:

Question ID : 1626531114

- Ans
- ☒ 1. चन्द्र
 - ☒ 2. पक्षी
 - ☒ 3. सूर्य
 - ☒ 4. नौका

Q.16 निम्नलिखित में कौन सा शब्द तद्भव है?

Question ID : 1626531105

- Ans
- ☒ 1. चौदह
 - ☒ 2. चूर्ण
 - ☒ 3. चैत्र

✗ 4. चतुर्थ

Q.17 'संग्राम' में उपसर्ग है?

Question ID : 1626531112

- Ans
- ✗ 1. ग्राम
 - ✗ 2. सन्
 - ✗ 3. स
 - ✓ 4. सम्

Q.18 'जो न जाना गया हो' के लिए एक शब्द होगा:

Question ID : 1626531116

- Ans
- ✗ 1. ज्ञात
 - ✗ 2. आशातीत
 - ✗ 3. परलोक
 - ✓ 4. अज्ञात

Q.19 निम्नलिखित में से कौन सा शब्द स्त्रीलिंग है?

Question ID : 1626531111

- Ans
- ✗ 1. संन्यास
 - ✓ 2. सजा
 - ✗ 3. संपर्क
 - ✗ 4. सम्बन्ध

Q.20 'युद्ध के द्वारा लोगों ने बड़ा कष्ट भोगा।' वाक्य में अशुद्ध अंश है:

Question ID : 1626531117

- Ans
- ✓ 1. युद्ध के द्वारा
 - ✗ 2. लोगों ने
 - ✗ 3. भोगा।
 - ✗ 4. बड़ा कष्ट

Section : Subject Related

Q.1 Tabula rasa or the 'blank slate' concept of children's mind was developed by:

Question ID : 1626531123

- Ans
- ✗ 1. John Dewey
 - ✗ 2. Jean Piaget
 - ✗ 3. Vygotsky
 - ✓ 4. Avicenna

Q.2 A child playing with Lego blocks tries various combinations and successfully constructs an engine. What method is the child using?

Question ID : 1626531128

- Ans
- ✗ 1. Conditioning
 - ✗ 2. Classical
 - ✗ 3. Operant

✓ 4. Trial and error

Q.3 Project-based and play-based approaches in learning:

Question ID : 1626531134

Ans ✓ 1.

improves children's engagement and motivation.

✗ 2.

hampers children's ability to be self-directed.

✗ 3. increases behavioral issues.

✗ 4. hampers children's creativity.

Q.4 The primacy of NCF in curriculum development and reform is:

Question ID : 1626531121

Ans ✗ 1. focussing on socialisation of children.

✗ 2. teacher-centered learning.

✓ 3.

making curriculum inclusive and meaningful to children.

✗ 4. making children thorough with textbooks.

Q.5 When does effective learning happen?

Question ID : 1626531132

Ans ✗ 1.

Learning is independent of students' readiness

✗ 2. In a traditional classroom

✗ 3.

Classroom environment has no impact on student learning

✓ 4. when a student is ready to learn

Q.6 The Indian system defines education as:

Question ID : 1626531120

Ans ✗ 1. a school for citizenship.

✓ 2. training of human soul in pursuit of truth.

✗ 3. a means to earn a living.

✗ 4. acquiring knowledge.

Q.7 According to Piaget, one of the methods of motivating a child is 'cognitive conflict' This method is a:

Question ID : 1626531124

Ans ✗ 1. Schema

✗ 2. Accommodation

✓ 3. Equilibration

✗ 4. Assimilation

Q.8 Robin, a Class II student, is attentively watching animals on National Geography Channel. He observes new species of animals and adds them to the existing group of animals in his memory. This is called:

Question ID : 1626531129

Ans ✓ 1. Assimilation

✗ 2. Schema

- ☒ 3. Equilibration
- ☒ 4. Accommodation

Q.9 To design teaching-learning activities for a classroom to suit the requirements of the students, teachers should have a knowledge of:

Question ID : 1626531138

- Ans**
- ☒ 1. Behaviour psychology
 - ☒ 2. Industrial psychology
 - ☒ 3. Abnormal psychology
 - ☒ 4. Developmental psychology

Q.10 Which of the following is NOT a characteristic of a teacher-centered class?

Question ID : 1626531136

- Ans**
- ☒ 1. Teacher is giving a lecture
 - ☒ 2. Children are working in groups and discussing
 - ☒ 3. Teacher is dictating notes
 - ☒ 4. Teacher is explaining only from the textbook

Q.11 'Children develop egocentrism,' says Piaget. In which stage does this happen?

Question ID : 1626531126

- Ans**
- ☒ 1. Sensory motor stage
 - ☒ 2. Formal operational stage
 - ☒ 3. Concrete operational stage
 - ☒ 4. Pre-operational stage

Q.12 An example of external factor of attention is:

Question ID : 1626531131

- Ans**
- ☒ 1. Memory
 - ☒ 2. Forgetting
 - ☒ 3. Competitive spirit
 - ☒ 4. Interest

Q.13 A new-born baby first gains control of its head in around two months, followed by other organs. This type of development in humans is called:

Question ID : 1626531130

- Ans**
- ☒ 1. General to specific
 - ☒ 2. Proximodistal
 - ☒ 3. Gradual
 - ☒ 4. Cephalocaudal

Q.14 A teacher prepares her lesson plan and plans appropriate activities for effective teaching, but due to student distractions, he fails to effectively deliver the lesson. The teacher fails because of:

Question ID : 1626531137

- Ans**
- ☒ 1. Lack of classroom managerial skills
 - ☒ 2. lack of content knowledge
 - ☒ 3. lack of interest in teaching

☒ 4. low self-esteem

Q.15 Creativity and inquisitiveness in students can be developed by:

Question ID : 1626531133

Ans

- ☒ 1. Role play
- ☒ 2. Lecture method
- ☒ 3. Demonstration
- ☒ 4. Observation

Q.16 एक विविध कक्षा में, शिक्षको निम्न में से किसके द्वारा अधिगम की प्रक्रिया में बाधा डाल सकते हैं?

Question ID : 1626531135

Ans

☒ 1. बच्चों में भेदभाव करके

☒ 2.

शिक्षक और साथियों के साथ छात्रों को बातचीत में व्यस्त करके

☒ 3. उनके अनुभव साझा करके

☒ 4. समानता का अभ्यास करके

Q.17 एक छात्र-केन्द्रित कक्षा में छात्र बन जाते हैं:

Question ID : 1626531122

Ans

- ☒ 1. निष्क्रिय शिक्षार्थी
- ☒ 2. सीखने के लिए गैर प्रतिक्रियाशील
- ☒ 3. शिक्षकों पर आश्रित
- ☒ 4. ज्ञान के निर्माता

Q.18 पूर्व -प्राथमिक में बच्चे सर्वश्रेष्ठ निम्न में से किस माध्यम से सीखते हैं?

Question ID : 1626531119

Ans

- ☒ 1. मौखिक ड्रिल
- ☒ 2. एक बंद कमरे में
- ☒ 3. पढ़ने और लिखने
- ☒ 4. खेल के माध्यम से

Q.19 According to Piaget, the concrete operational period ranges between:

Question ID : 1626531125

Ans

- ☒ 1. Above 11 years
- ☒ 2. 18-24 months
- ☒ 3. 7 years - 11 years
- ☒ 4. 2 years - 7 years

Q.20 The three major domains of human development are:

Question ID : 1626531127

Ans

- ☒ 1. physical, cognitive and psychosocial
- ☒ 2. cognitive, emotional and social
- ☒ 3. physical, emotional and spiritual
- ☒ 4. cognitive, spiritual and emotional

Section : Subject Related

Q.1 When a modifiable connection is NOT made between a situation and response, the connection strength decreases. This is called:

Question ID : 1626531140

- Ans
- ☒ 1. Trial and error
 - ☒ 2. Law of effect
 - ☒ 3. Law of exercise
 - ☒ 4. Law of readiness

Q.2 _____ brings students together in one classroom and community, regardless of their strengths or weaknesses in any area, and seeks to maximise the potential of these students.

Question ID : 1626531150

- Ans
- ☒ 1. Specialised instruction
 - ☒ 2. Integrated education
 - ☒ 3. Individualised instruction
 - ☒ 4. Inclusive education

Q.3 Recognising, fostering and developing sensitivity to the needs of people in various identity categories are the primary aims of _____.

Question ID : 1626531147

- Ans
- ☒ 1. diversified education
 - ☒ 2. educational diversity
 - ☒ 3. cultural diversity
 - ☒ 4. differentiated learning

Q.4 One can opt for _____ if there is a need for learning of any type of education including literacy, basic education, skill development (vocational education) and equivalency.

Question ID : 1626531141

- Ans
- ☒ 1. Virtual education
 - ☒ 2. Informal education
 - ☒ 3. Online education
 - ☒ 4. Adult and continuing education

Q.5 What is the main use of an MOOC?

Question ID : 1626531158

- Ans
- ☒ 1. Free massive online open communication
 - ☒ 2. Free mass open optimal communication
 - ☒ 3. Free massive open online content
 - ☒ 4.

Free massive online open courses for any age group

Q.6 The 'National Scheme of Incentives to Girls for Secondary Education' is a government-sponsored scheme with the purpose of:

Question ID : 1626531143

- Ans
- ☒ 1. promoting enrolment of girl child in the age group of 14-18 years at secondary stage
 - ☒ 2. encouraging the girl child's education in the age group of 10-15 years, in remote places
 - ☒ 3. strengthening educational opportunities for girls in villages and remote places
 - ☒ 4.

encouraging the girl child's education in rural areas

Q.7 पाठ्यक्रम बाधा क्या है?

Question ID : 1626531153

- Ans
- ☒ 1. भाषा व्यवधान
 - ☒ 2. छात्रों के हित
 - ☒ 3. निर्देश के लिए पर्याप्त समय की कमी
 - ☒ 4. लक्ष्य और उद्देश्यों की उपलब्धि

Q.8 What are the parts of an academic plan?

Question ID : 1626531155

- Ans
- ☒ 1. Content, objectives, goals, methods, material, evaluation
 - ☒ 2. Purpose, content, sequence, learners, instructional processes, resources, evaluation, adjustment
 - ☒ 3. Teacher, content, students, classroom, activities
 - ☒ 4. Lesson plans, methods, evaluation strategies

Q.9 एक विशेष शिक्षा कक्षा में पूर्णकालिक नियुक्ति को _____ के रूप में संदर्भित किया जा सकता है जिसमें विशेष जरूरत वाले छात्र आमतौर पर विकासशील छात्रों के साथ बिल्कुल समय नहीं बिताते हैं।

Question ID : 1626531151

- Ans
- ☒ 1. अलगाव
 - ☒ 2. पृथक्करण
 - ☒ 3. एकीकरण
 - ☒ 4. मुख्य धारा

Q.10 Maintaining and continually upgrading competencies and acknowledging prior learning and competencies through official recognition are the major objectives of:

Question ID : 1626531146

- Ans
- ☒ 1. Distance education
 - ☒ 2. Formal education
 - ☒ 3. Adult education
 - ☒ 4. Basic education

Q.11 Which of the following is the best example of behaviorism while constructing curriculum?

Question ID : 1626531156

- Ans
- ☒ 1. Learning should occur when learners show appropriate response
 - ☒ 2. Learning should occur in a realistic setting
 - ☒ 3. Learning is a series of transformations of information
 - ☒ 4. Learning should occur when independent learning is assisted

Q.12 JP Naik has described _____ as the elusive triangle in Indian education.

Question ID : 1626531145

- Ans
- ☒ 1. equity, equality and quantity
 - ☒ 2. equivalence, unity and quantity

✓ 3. equality, quality and quantity

✗ 4. equality, quality and integrity

Q.13 In 2018, _____ has decided to set up an Inclusion Panel for children with special needs.

Question ID : 1626531152

Ans ✓ 1.

Central Board of Secondary Education (CBSE)

✗ 2. Special Education Program (SEP)

✗ 3. University Grants Commission (UGC)

✗ 4.

National Council for Educational Research and Training (NCERT)

Q.14 The _____ represents one of the most economically impoverished and marginalised groups in India.

Question ID : 1626531148

Ans ✗ 1. Scheduled Caste population

✗ 2. Nagas and Khasis

✗ 3. Bhils and Gonds

✓ 4. Scheduled Tribe population

Q.15 सीडब्ल्यूएसएन (CWSN) का अर्थ है:

Question ID : 1626531149

Ans ✗ 1.

चिल्ड्रन विथ सोशल नीड्स (Children with Social Needs)

✓ 2.

चिल्ड्रन विथ स्पेशल नीड्स (Children with Special Needs)

✗ 3.

चिल्ड्रन विथ स्कॉलैस्टिक नीड्स (Children with Scholastic Needs)

✗ 4.

चिल्ड्रन विथ सेंसिटिव नेचर (Children with Sensitive Nature)

Q.16 Which of the following is a high tech curriculum?

Question ID : 1626531154

Ans ✗ 1.

Study of agriculture, materials and manufacturing, energy sources and use, information processing and communication

✗ 2.

Exploration of traditional subjects related to community needs and problems

✓ 3.

Exploitation of state-of-the-art information and communications technologies

✗ 4.

Study of the great writings, master paintings, musical compositions and grand structures

Q.17 A child shows fear and anxiety in front of an unknown person and moves close to the mother. This is called:

Question ID : 1626531139

Ans ✓ 1. Stranger anxiety

✗ 2. Attachment

✗ 3. Separation anxiety

✗ 4. Self-concept

Q.18

Ans ☒ 1.

मानव और संसाधन विकास मंत्रालय (MHRD)

☒ 2.

राष्ट्रीय शैक्षणिक अनुसंधान और प्रशिक्षण परिषद (NCERT)

☒ 3. विश्वविद्यालय अनुदान आयोग (UGC)

☒ 4. शिक्षा पर राष्ट्रीय नीति (NPE)

Q.19 Which of the following is NOT relevant in communication through technology?

Question ID : 1626531157

Ans ☒ 1. Sender

☒ 2. Receiver

☒ 3. Remarks

☒ 4. Feedback

Q.20 भारत में शिक्षा के दूरस्थ प्रकार पर विचार करते हुए निम्नलिखित में से कौन सा कथन सत्य है?

Question ID : 1626531142

Ans ☒ 1.

इसमें भौगोलिक दृष्टि से अलग-अलग छात्रों को शामिल किया गया है जिन्हें नियमित कक्षाओं के माध्यम से शिक्षा लेना मुश्किल लगता है।

☒ 2.

दूरस्थ शिक्षा के मामले में कम लचीलापन वाली शिक्षा केवल संभव है।

☒ 3.

दूरस्थ शिक्षा में शिक्षक-केंद्रित शिक्षा केंद्र में होती है

☒ 4.

दूरस्थ शिक्षा का उपयोग सभी आयु वर्ग, 0 से 60 वर्ष, के लोगों द्वारा किया जा सकता है।

Section : Subject Related

Q.1 The acquisition of a second language begins with:

Question ID : 1626531172

Ans ☒ 1. self-analysis

☒ 2. expression

☒ 3. comprehension

☒ 4. speaking

Q.2 गणित का शिक्षण कब से शुरू करना चाहिए?

Question ID : 1626531177

Ans ☒ 1. प्राथमिक स्तर से

☒ 2. निम्न प्राथमिक स्तर से

☒ 3. पूर्व-प्राथमिक स्तर से

☒ 4. उच्च प्राथमिक स्तर से

Q.3

The primacy of assessment is:

Question ID : 1626531166

- Ans
- ☒ 1. diagnosis and feedback
 - ☐ 2. improving scores
 - ☐ 3. ranking students
 - ☐ 4. discriminating against students

Q.4 In a heterogeneous and mixed ability class, a teacher should:

Question ID : 1626531165

- Ans
- ☐ 1. employ one type of teaching for all
 - ☒ 2. use a variety of teaching-learning methods
 - ☐ 3. conduct many tests
 - ☐ 4. employ teacher-directed teaching

Q.5 एनसीईए के मुताबिक बुटियों पर ध्यान देना महत्वपूर्ण है क्योंकि वे:

Question ID : 1626531173

- Ans
- ☐ 1. छात्रों को डांटने का अवसर प्रदान करते हैं
 - ☐ 2. स्कूल से छात्रों को हटाने का अवसर प्रदान करते हैं
 - ☐ 3. छात्रों को धीमे शिक्षार्थियों के रूप में ब्रांड करने में सहायता करते हैं
 - ☒ 4. बच्चे की सोच की पहचान करने का अवसर प्रदान करते हैं

Q.6 In language learning _____ is/are called passive skill/s.

Question ID : 1626531175

- Ans
- ☐ 1. reading and writing
 - ☐ 2. reading
 - ☐ 3. speaking
 - ☒ 4. listening and speaking

Q.7 Students will get examples of angles, after that they will learn the definition and find the examples of angles. Which method is followed by this example?

Question ID : 1626531178

- Ans
- ☐ 1. Constructivist method
 - ☐ 2. Deductive method
 - ☐ 3. Discovery method
 - ☒ 4. Inductive method

Q.8 Which of the following helps develop language skills?

Question ID : 1626531169

- Ans
- ☐ 1. Use of the vocabulary
 - ☐ 2. Explanation of statements
 - ☒ 3. Preparation of various literature forms
 - ☐ 4. Reading the language

Q.9 What purpose does a language lab serve?

Question ID : 1626531167

Ans ☒ 1.

It helps enhance language skills in the classroom

☒ 2. It enables users to play language games

☒ 3.

It provides an enriching experience of a language

☒ 4.

It enables users to experience a language with the help of advanced technology

Q.10 When can BYOD (bring your own device) approach be employed in ICT?

Question ID : 1626531162

Ans ☒ 1. For students learning at primary stage

☒ 2. For evaluation

☒ 3. For assessment of students

☒ 4. For teacher training

Q.11 शिक्षा आयोगों के अनुसार छात्रों की बेहतर समझ के लिए प्राथमिक शिक्षा में कौन सी भाषा का उपयोग किया जाना चाहिए?

Question ID : 1626531168

Ans ☒ 1. क्षेत्रीय भाषा

☒ 2. अंग्रेजी भाषा

☒ 3. राजभाषा

☒ 4. मातृ भाषा

Q.12 Teachers should use programmed instructions in teaching:

Question ID : 1626531161

Ans ☒ 1. for absent students

☒ 2. to provide ubiquitous resources

☒ 3. to reduce the limitation of boundaries

☒ 4. to satisfy different needs of the students

Q.13 'भाषा' शब्द 'लिंगुआ' शब्द से ली गई है जो एक _____ शब्द है।

Question ID : 1626531170

Ans ☒ 1. लैटिन

☒ 2. फ्रेंच

☒ 3. अंग्रेजी

☒ 4. यूनानी

Q.14 पढ़ने और लेखन के कौशल को _____ कहा जाता है।

Question ID : 1626531171

Ans ☒ 1. भाषा कौशल

☒ 2. उत्पादक कौशल

☒ 3. देश कौशल

☒ 4. ग्रहणशील कौशल

Q.15 Technology can replace the teacher in coming decades and we will see no teacher in classroom.

Question ID : 1626531163

- Ans
- ☒ 1. The first part of this statement is true.
 - ☒ 2. The second part of this statement is true.
 - ☒ 3. This statement is true.
 - ☒ 4. This statement is false.

Q.16 What qualities are required for a good mathematics teacher?

Question ID : 1626531176

- Ans
- ☒ 1. Problem solving, decision making, creative thinking and critical thinking
 - ☒ 2. Presentation skills and critical thinking
 - ☒ 3. 21st century skills
 - ☒ 4. Knowledge, understanding and application

Q.17 What is a limitation of using a social networking site?

Question ID : 1626531164

- Ans
- ☒ 1. It can pose a threat to a user in some manner
 - ☒ 2. It is expensive
 - ☒ 3. It requires internet
 - ☒ 4. It is not reliable

Q.18 _____ learning is a matter of growth and maturation of relatively fixed capacities under appropriate external conditions.

Question ID : 1626531174

- Ans
- ☒ 1. Writing
 - ☒ 2. Language
 - ☒ 3. Communication
 - ☒ 4. Listening

Q.19 Which of the following is an appropriate option for sending a Microsoft PowerPoint file of more than 25 GB to parents of students?

Question ID : 1626531159

- Ans
- ☒ 1. Chat messenger
 - ☒ 2. E-mail
 - ☒ 3. Forum
 - ☒ 4. E-mail through Google drive

Q.20 निम्न में से कौन सा नेट शिष्टाचार (netiquette) का एक उदाहरण नहीं है?

Question ID : 1626531160

- Ans
- ☒ 1. उचित प्रतिक्रिया
 - ☒ 2. इंटरनेट पर लोगों का सम्मान करना
 - ☒ 3. समय सारणी का पालन करना
 - ☒ 4. सभी बड़े अक्षरों का प्रयोग करना

Q.1 What should teachers do to develop interest among students regarding art education?

Question ID : 1626531191

Ans ☒ 1.

Help students select and perform any art form with which they would like to express themselves

☒ 2. Add art and craft subject to board studies

☒ 3.

Show students movies related to art and craft

☒ 4. Discuss the advantages of art and craft

Q.2 Which of the following helps develop knowledge of Mathematics?

Question ID : 1626531179

Ans ☒ 1.

Development of habits such as regularity, practice, patience, self-reliance and hard work

☒ 2.

Acquainting the students with concepts and processes in mathematics

☒ 3.

Providing clarity about fundamental concepts and processes of mathematics

☒ 4.

Development of a taste for and confidence in mathematics

Q.3 All of the organic and inorganic components surrounding us as well as the events, conditions and processes of their interactions are known as _____.

Question ID : 1626531183

Ans ☒ 1. ecology

☒ 2. biochemistry

☒ 3. biodiversity

☒ 4. environment

Q.4 Which of the following statements is true?

Question ID : 1626531188

Ans ☒ 1.

Social science deals with the history of humans.

☒ 2.

Social science prepares students for wholesome social living.

☒ 3. Social science is a study of human growth.

☒ 4.

Social science is extracurricular and not a core course.

Q.5 According to Selman, undifferentiated perspective-taking sets in, in the age group of:

Question ID : 1626531195

Ans ☒ 1. 10 – 15 years

☒ 2. 14 – adults

☒ 3. 3 – 6 years

☒ 4. 7 – 12 years

Q.6 बागवानी के दौरान क्या सावधानी बरतनी चाहिए?

Question ID : 1626531192

Ans ☒ 1.

क्या करें और क्या न करें इसके बारे में जागरूकता बढ़ाना

✓ 2. शिक्षक की उपस्थिति

✗ 3.

बागवानी के बाद सैनीटाइजर्स का उपयोग करना

✗ 4. प्राथमिक चिकित्सा किट तैयार रखना

Q.7 _____ provides information about biodiversity richness and the potential dangers to the species of plants, animals and microorganisms in the environment.

Question ID : 1626531182

Ans ✓ 1. Environmental education

✗ 2. Environmental training

✗ 3. Environmental studies

✗ 4. Environmental science

Q.8 Bulimia Nervosa is:

Question ID : 1626531196

Ans ✓ 1. an eating disorder

✗ 2. a sleep disorder

✗ 3. a physical disability

✗ 4. a type of nervous breakdown

Q.9 According to Piaget, adolescents can predict about variables that might affect an outcome and this is called:

Question ID : 1626531197

Ans ✗ 1. Propositional thought

✗ 2. Scientific reasoning

✓ 3. Hypo-deductive reasoning

✗ 4. Idealism and criticism

Q.10 Which of the following is the best example of creativity?

Question ID : 1626531190

Ans ✓ 1. Writing a script for role play in class

✗ 2. Preparing an origami structure

✗ 3. Making a Rangoli

✗ 4. Making a painting

Q.11 Social science study adapts to a _____ approach.

Question ID : 1626531186

Ans ✓ 1. interdisciplinary

✗ 2. systematic

✗ 3. social

✗ 4. holistic

Q.12 How can we inculcate scientific temper in students while teaching them mathematics?

Question ID : 1626531180

Ans ✗ 1.

Giving the students scientific examples to solve

☒ 2.

Encouraging students to take a scientific approach for solving problems

☒ 3.

Telling them about the cause-effect relationship while solving problems

☒ 4. Making students solve science formulas

Q.13 People who know the environmental acts, rights, rules and legislations, and use their knowledge to make appropriate judgments and decisions for the protection and improvement of the earth are known to be _____.

Question ID : 1626531181

Ans

☒ 1. environmentally aware

☒ 2. environmentally literate

☒ 3. environmentally active

☒ 4. environmental masters

Q.14 What is the most important task of an art and craft teacher?

Question ID : 1626531189

Ans

☒ 1. Developing an interest in art and craft

☒ 2. Organising teaching work

☒ 3. Taking care of the class

☒ 4.

Providing opportunities to students for learning art and craft to explore their abilities

Q.15 At school level, the important objective of environmental education is to build and develop skills of _____ that concern humans and the world around them.

Question ID : 1626531184

- a. adjustment
- b. reasoning
- c. evaluating
- d. making decisions

Ans

☒ 1. a, d and b

☒ 2. a, c and d

☒ 3. c and d

☒ 4. b, c and d

Q.16 As a result of over-population, rapid industrialisation and other human activities such as agriculture and deforestation, earth has become loaded with diverse substances that were released as by-products. This process is known as:

Question ID : 1626531185

Ans

☒ 1. ecological pollution

☒ 2. manmade pollution

☒ 3. environmental pollution

☒ 4. ecological depletion

Q.17 How can we develop students' interest in physical fitness?

Question ID : 1626531194

Ans

☒ 1. By interviewing an athlete

☒ 2.

By discussing the benefits of physical fitness

☒ 3.

By taking them outside on the playground to play outdoor games

☒ 4.

By taking the students for a visit to a hospital

Q.18 How does physical training help students?

Question ID : 1626531193

Ans ☒ 1.

It enables students to improve their physical fitness.

☒ 2.

It encourages students to become active in yoga.

☒ 3.

It helps students gain good health and sound state of mind.

☒ 4. It helps them meditate better.

Q.19 Any branch of study that deals with the social life of man and employs scientific method for its study may be conceived as:

Question ID : 1626531187

Ans ☒ 1. Social system

☒ 2. Social education

☒ 3. Sociology

☒ 4. Social science

Q.20 Identifying with a particular gender by means of activities and interests, among other things, is called:

Question ID : 1626531198

Ans ☒ 1. Sexual activeness

☒ 2. Sexual diversity

☒ 3. Sexual orientation

☒ 4. Sexual development

TEACHERS

Section : Subject Related

Q.1 For effective functioning, primary school teachers are expected to be efficient in organising:

Question ID : 1626531216

Ans ☒ 1.

Indoor and outdoor sports, language clubs and field work

☒ 2.

play projects, discussions, dialogues, observations and visits

☒ 3.

laboratory work, group activities and presentations

☒ 4. fun fairs, science exhibitions and projects

Q.2 Which of the following entities recommends basic safety assurance of students in school?

Question ID : 1626531205

Ans ☒ 1. School organisations

☒ 2. Central Government

☒ 3. Health Ministry

☒ 4. World Health Organization (WHO)

Q.3 National curricular framework for school education as developed by the NCERT (2000) has given a new term 'work education' instead of the earlier name _____.

Question ID : 1626531209

Ans ☒ 1. Social studies

☒ 2. Social work

✓ 3. Work experience

✗ 4. Work culture

Q.4 Classroom management is an important responsibility of teachers that entails three basic functions, which are _____.

Question ID : 1626531215

Ans ✗ 1. planning, managing and performing

✗ 2. Curriculum, designing and execution

✓ 3. planning, control and communication

✗ 4. controlling, managing and performing

Q.5 स्कूल स्वास्थ्य संबंधी समस्याओं से कैसे निपट सकता है?

Question ID : 1626531204

Ans ✗ 1.

स्कूल की अच्छी तरह से बनाया गया इमारत और स्वच्छता सुविधाओं की अच्छी संरचना सुनिश्चित करके

✗ 2. स्कूल परिसर में एक डॉक्टर उपलब्ध कराके

✗ 3. स्वास्थ्य मुद्दों के लिए निधि उपलब्ध कराके

✓ 4.

श्वसन संक्रमण ,अस्थमा ,और दस्त के प्रबंधन के बारे में बुनियादी ज्ञान प्रदान करके

Q.6 It is possible in every circumstance that the children may develop the skills of observing a livelihood in local economy available to them by including _____ in complete educational routine.

Question ID : 1626531207

Ans ✗ 1. efforts

✓ 2. work

✗ 3. knowledge

✗ 4. skills

Q.7 स्कूल की विशिष्ट हस्तक्षेप रणनीतियाँ क्या हैं?

Question ID : 1626531203

Ans ✓ 1.

पोषण और खाद्य सुरक्षा ;पानी की गुणवत्ता ;हवा की गुणवत्ता ;शौचालय की सुविधा ;परिवहनअपशिष्ट ;सुविधाएं डिजाइन

✗ 2. स्कूल की वित्तीय रणनीतियाँ

✗ 3. स्कूल के उद्देश्यों के लक्ष्य

✗ 4. स्कूल की प्रक्रियात्मक नीतियाँ

Q.8 According to Piaget, which of following is one of the distorted images of relations between self and peers in adolescents?

Question ID : 1626531200

Ans ✗ 1. Peer pressure

✗ 2. Self-concern

✓ 3. Imaginary audience

✗ 4. Adult pressure

Q.9 Creating opportunities to promote teacher collaboration is essential for:

Question ID : 1626531210

Ans ✗ 1. teacher's knowledge

- ☒ 2. teacher's growth
- ☒ 3. handling challenges in the profession
- ☒ 4. teacher's professional development

Q.10 Which of the following is NOT a factor that is essential for the success of work education?

Question ID : 1626531208

Ans ☒ 1.

Positive relationship between community and school

- ☒ 2. Broadmindedness
- ☒ 3. Dignity of labour and pessimistic attitude
- ☒ 4. Feelings of co-operation

Q.11 In best school practice, _____ communicate closely and regularly so that all sectors of the school community are working effectively towards achieving common goals.

Question ID : 1626531213

Ans ☒ 1. Trustees, office and parents

- ☒ 2. SMC, principal and trustees
- ☒ 3. Supervisors, admin and board
- ☒ 4. PTA, board and staff

Q.12 When relationships between the school and wider community strengthen the ability of schools and families to support student learning, well-being and developmental outcomes, it is called:

Question ID : 1626531218

Ans ☒ 1. Community engagement

- ☒ 2. Community co-operation
- ☒ 3. Community network
- ☒ 4. Community collaboration

Q.13 How does planting shade-providing trees around school grounds help students?

Question ID : 1626531206

Ans ☒ 1. It provides proper ventilation in the class

- ☒ 2. It enables teachers to take students on the school grounds
- ☒ 3. It enables teachers to arrange nature visit camps
- ☒ 4. It helps reduce ultra-violet rays

Q.14 _____ can offer teachers, even in low-resource environments, access to content, curriculum, colleagues and a variety of learning experiences.

Question ID : 1626531211

Ans ☒ 1. Internet and audio-visual facilities

- ☒ 2. Information and Communication Technology
- ☒ 3. Radio, mobile phones, TV
- ☒ 4. Teaching-learning aids

Q.15 निम्नलिखित में से कौन स्कूल के स्थान के लिए उपयुक्त नहीं है?

Question ID : 1626531201

Ans ☒ 1. वह जगह जहां स्वास्थ्य खतरे हैं

- ☒ 2. प्रदूषण से दूर
- ☒ 3. प्रकृति के पास
- ☒ 4. शहर से बाहर

Q.16 To encourage fellowship among parents, teachers, children and the community, _____ has to be established.

Question ID : 1626531212

- Ans
- ☒ 1. community centre
 - ☒ 2. board of trustees
 - ☒ 3. board of studies
 - ☒ 4. parent-teacher association

Q.17 _____ includes using appropriate games to improve the child's literacy and numeracy. It also includes parents being assisted to arrange effective learning spaces for their child.

Question ID : 1626531217

- Ans
- ☒ 1. Parents' active interference
 - ☒ 2. Parent engagement
 - ☒ 3. Appropriate parental behaviour
 - ☒ 4. Parent-teachers association

Q.18 The major role of primary school leading teachers is to:

Question ID : 1626531214

- Ans
- ☒ 1. contribute to classroom management
 - ☒ 2. improve the skill, knowledge and performance of the teaching workforce
 - ☒ 3. supervise the delivery of teaching programs
 - ☒ 4. develop and manage the school code of conduct

Q.19 यदि छात्र कक्षा में बीमार पड़ते हैं तो आपको किसको कॉल करना चाहिए?

Question ID : 1626531202

- Ans
- ☒ 1. चिकित्सक
 - ☒ 2. प्राचार्य
 - ☒ 3. कक्षा अध्यापक
 - ☒ 4. माता-पिता

Q.20 Which of the following is a trait in adolescents that hinders their decision making ability?

Question ID : 1626531199

- Ans
- ☒ 1. Self-concern
 - ☒ 2. Idealism
 - ☒ 3. Criticism
 - ☒ 4. Abstract thinking